



Use lattice multiplication to solve each problem.

1)  $27 \times 78 =$



2)  $39 \times 51 =$



3)  $54 \times 95 =$



4)  $79 \times 28 =$



5)  $56 \times 14 =$



6)  $23 \times 46 =$



7)  $49 \times 10 =$



8)  $49 \times 15 =$



9)  $22 \times 85 =$



10)  $62 \times 17 =$



11)  $92 \times 41 =$



12)  $85 \times 63 =$



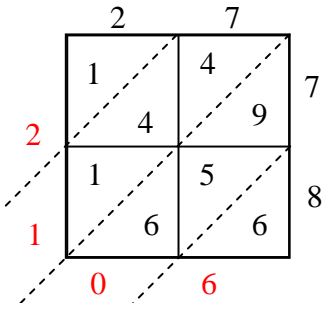
**Answers**

1. \_\_\_\_\_
2. \_\_\_\_\_
3. \_\_\_\_\_
4. \_\_\_\_\_
5. \_\_\_\_\_
6. \_\_\_\_\_
7. \_\_\_\_\_
8. \_\_\_\_\_
9. \_\_\_\_\_
10. \_\_\_\_\_
11. \_\_\_\_\_
12. \_\_\_\_\_

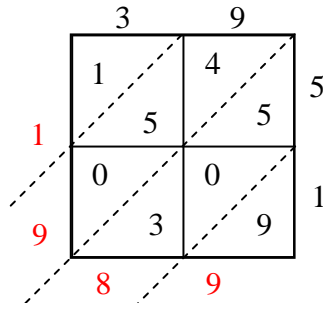


Use lattice multiplication to solve each problem.

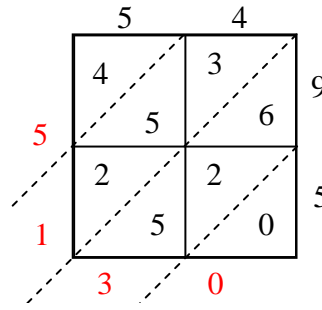
1)  $27 \times 78 =$



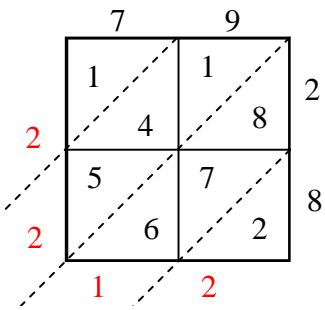
2)  $39 \times 51 =$



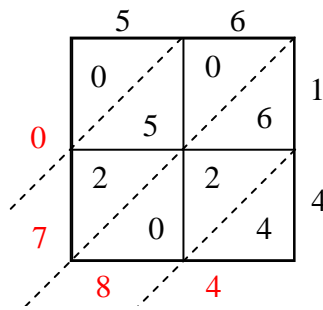
3)  $54 \times 95 =$



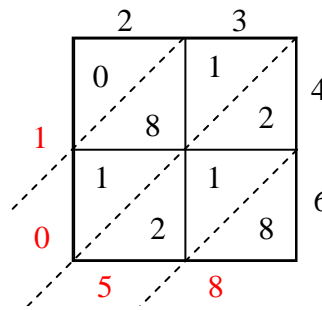
4)  $79 \times 28 =$



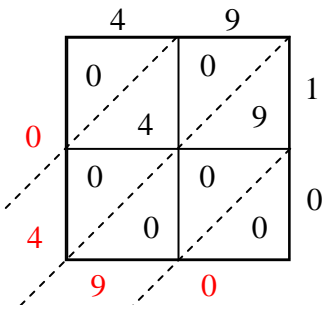
5)  $56 \times 14 =$



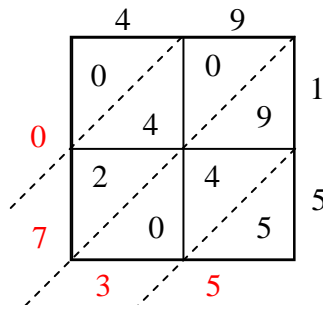
6)  $23 \times 46 =$



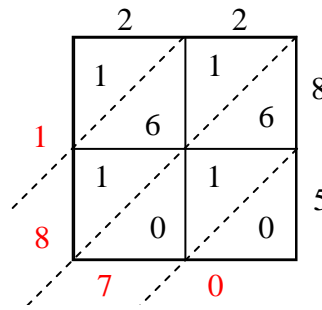
7)  $49 \times 10 =$



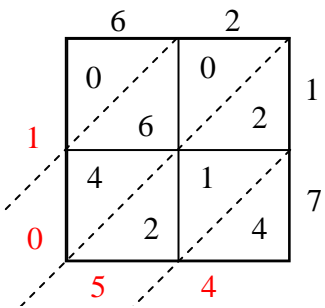
8)  $49 \times 15 =$



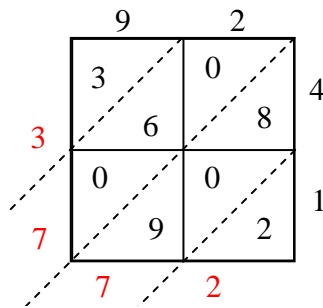
9)  $22 \times 85 =$



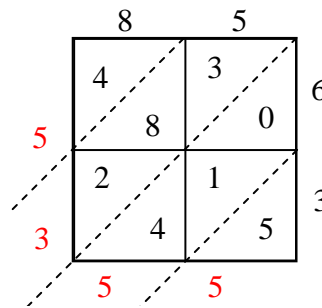
10)  $62 \times 17 =$



11)  $92 \times 41 =$



12)  $85 \times 63 =$



Answers

1. **2,106**

2. **1,989**

3. **5,130**

4. **2,212**

5. **784**

6. **1,058**

7. **490**

8. **735**

9. **1,870**

10. **1,054**

11. **3,772**

12. **5,355**