



Use lattice multiplication to solve each problem.

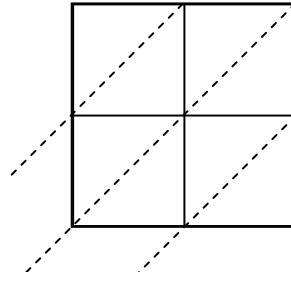
1) $96 \times 32 =$



2) $69 \times 54 =$



3) $97 \times 28 =$



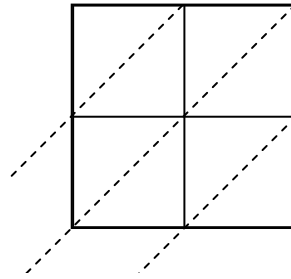
4) $75 \times 91 =$



5) $48 \times 79 =$



6) $56 \times 73 =$



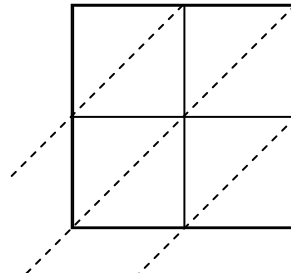
7) $45 \times 69 =$



8) $84 \times 45 =$



9) $29 \times 41 =$



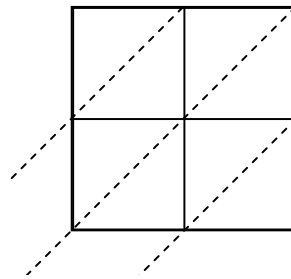
10) $45 \times 24 =$



11) $93 \times 59 =$



12) $57 \times 39 =$



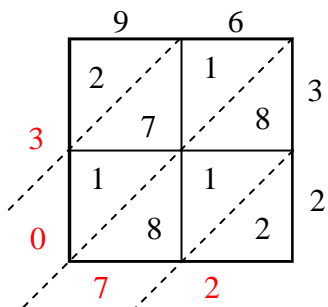
Answers

1. _____
2. _____
3. _____
4. _____
5. _____
6. _____
7. _____
8. _____
9. _____
10. _____
11. _____
12. _____

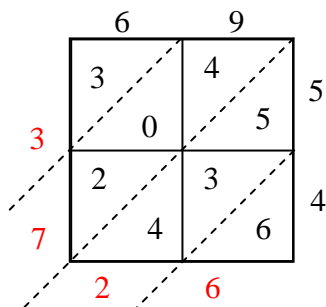


Use lattice multiplication to solve each problem.

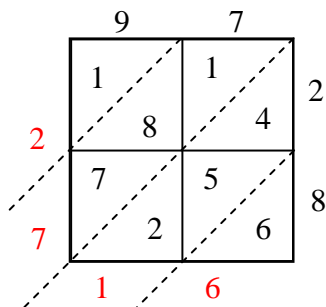
1) $96 \times 32 =$



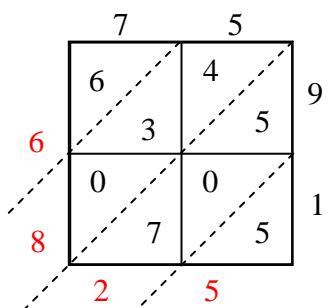
2) $69 \times 54 =$



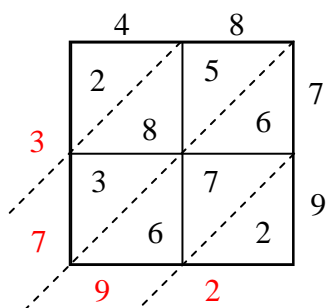
3) $97 \times 28 =$



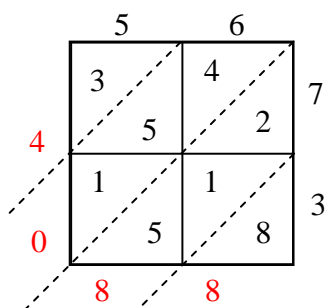
4) $75 \times 91 =$



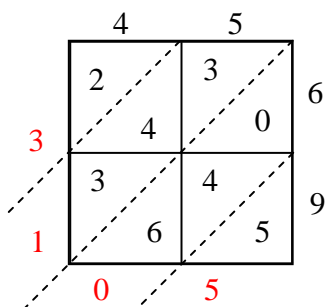
5) $48 \times 79 =$



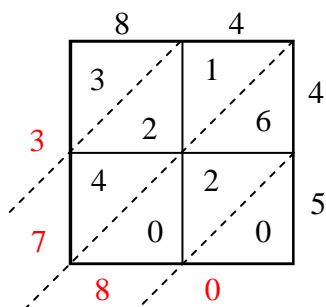
6) $56 \times 73 =$



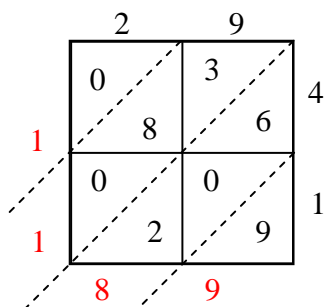
7) $45 \times 69 =$



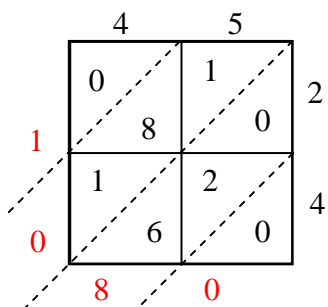
8) $84 \times 45 =$



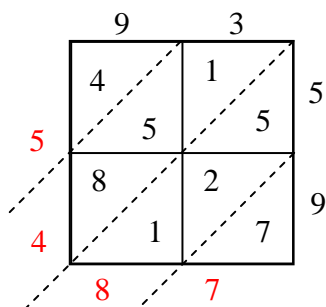
9) $29 \times 41 =$



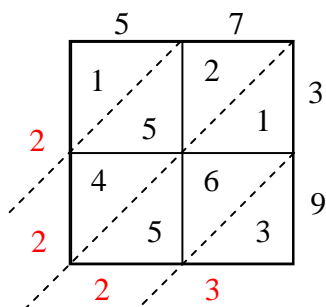
10) $45 \times 24 =$



11) $93 \times 59 =$



12) $57 \times 39 =$



Answers

1. 3,072
2. 3,726
3. 2,716
4. 6,825
5. 3,792
6. 4,088
7. 3,105
8. 3,780
9. 1,189
10. 1,080
11. 5,487
12. 2,223