



Use lattice multiplication to solve each problem.

1) $88 \times 14 =$



2) $68 \times 34 =$



3) $13 \times 37 =$



4) $81 \times 34 =$



5) $25 \times 82 =$



6) $44 \times 99 =$



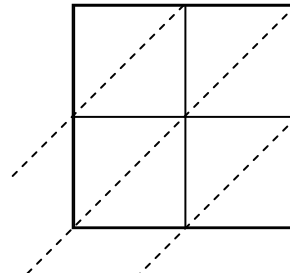
7) $20 \times 70 =$



8) $34 \times 98 =$



9) $11 \times 53 =$



10) $80 \times 53 =$



11) $14 \times 75 =$



12) $15 \times 51 =$



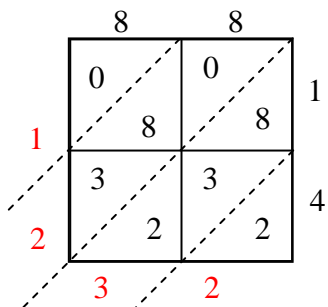
Answers

1. _____
2. _____
3. _____
4. _____
5. _____
6. _____
7. _____
8. _____
9. _____
10. _____
11. _____
12. _____

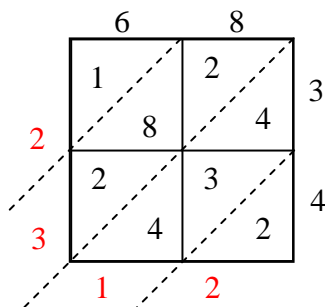


Use lattice multiplication to solve each problem.

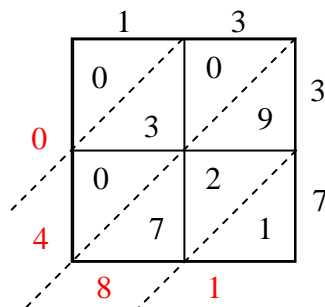
1) $88 \times 14 =$



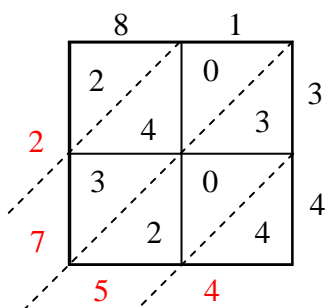
2) $68 \times 34 =$



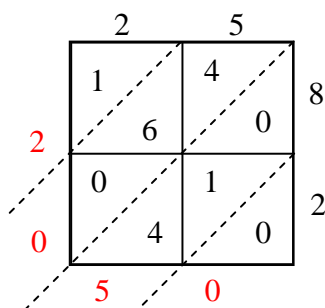
3) $13 \times 37 =$



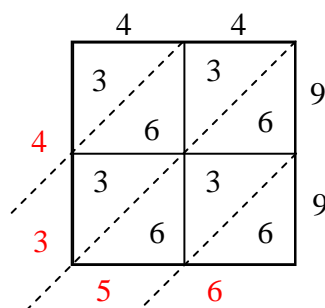
4) $81 \times 34 =$



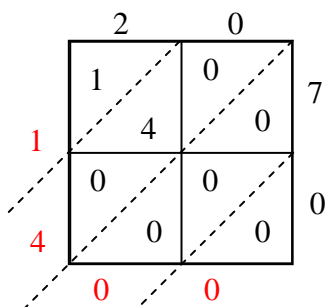
5) $25 \times 82 =$



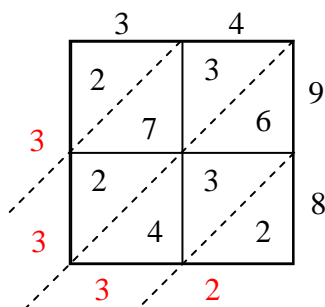
6) $44 \times 99 =$



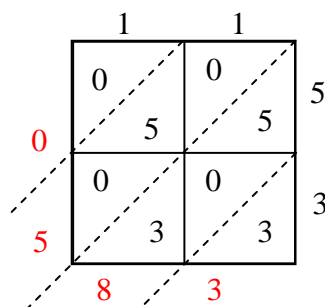
7) $20 \times 70 =$



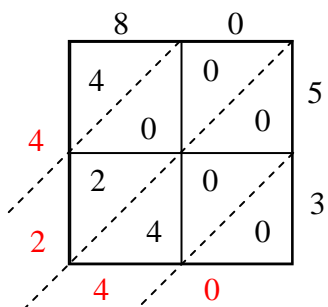
8) $34 \times 98 =$



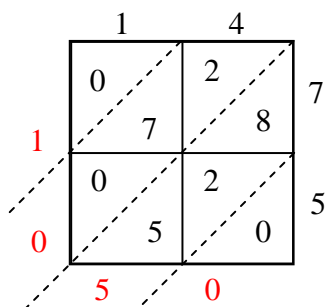
9) $11 \times 53 =$



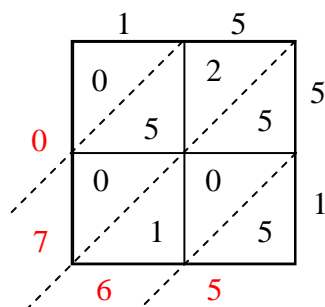
10) $80 \times 53 =$



11) $14 \times 75 =$



12) $15 \times 51 =$



Answers

1. **1,232**
2. **2,312**
3. **481**
4. **2,754**
5. **2,050**
6. **4,356**
7. **1,400**
8. **3,332**
9. **583**
10. **4,240**
11. **1,050**
12. **765**