





Use the array provided to solve each problem.

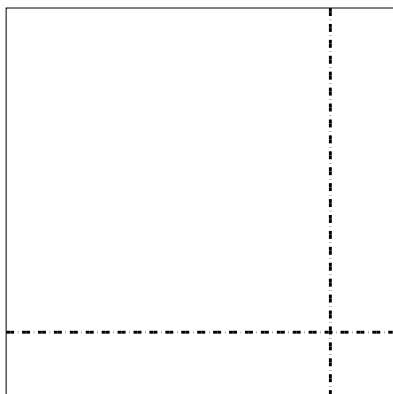
1) $43 \times 28 =$



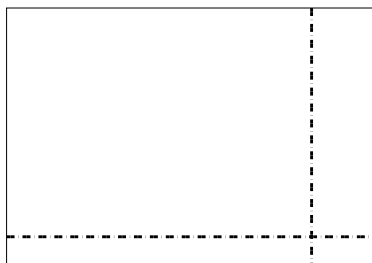
2) $37 \times 18 =$




3) $36 \times 36 =$




4) $34 \times 49 =$



5) $46 \times 54 =$



6) $44 \times 52 =$



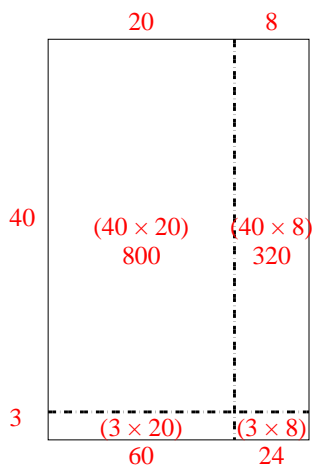
Answers

- 1. _____
- 2. _____
- 3. _____
- 4. _____
- 5. _____
- 6. _____

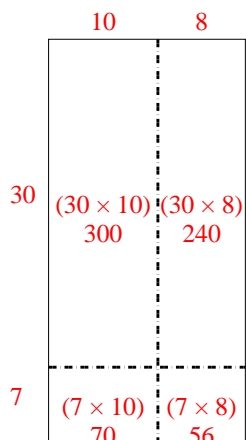


Use the array provided to solve each problem.

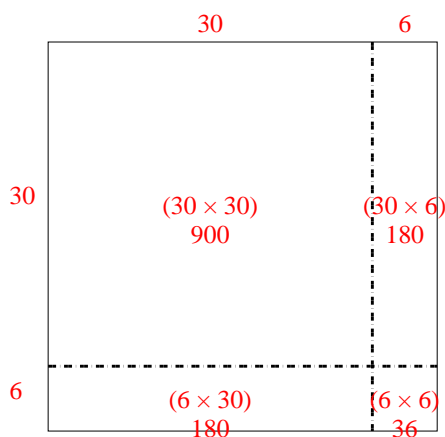
1) $43 \times 28 =$



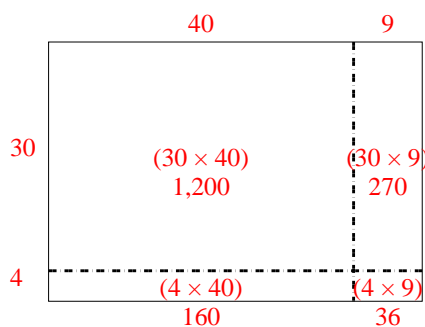
2) $37 \times 18 =$



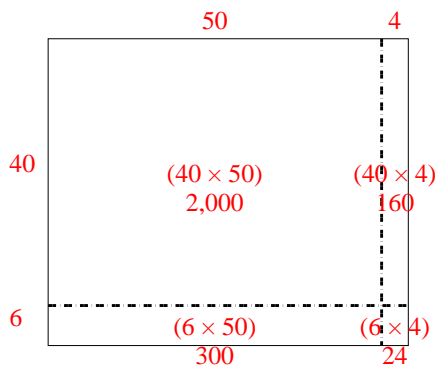
3) $36 \times 36 =$



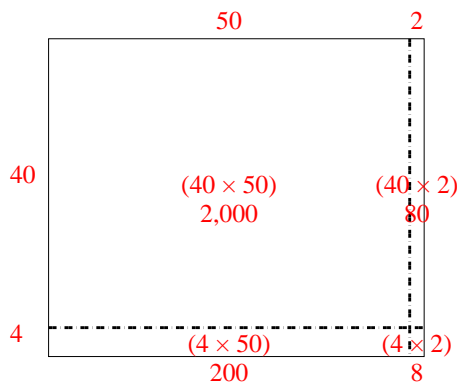
4) $34 \times 49 =$



5) $46 \times 54 =$



6) $44 \times 52 =$



Answers

1. **1,204**

2. **666**

3. **1,296**

4. **1,666**

5. **2,484**

6. **2,288**