





Use the array provided to solve each problem.


1)  $59 \times 68 =$




2)  $67 \times 75 =$




3)  $53 \times 36 =$




4)  $42 \times 55 =$



5)  $43 \times 66 =$



6)  $44 \times 28 =$



Answers

1. \_\_\_\_\_

2. \_\_\_\_\_

3. \_\_\_\_\_

4. \_\_\_\_\_

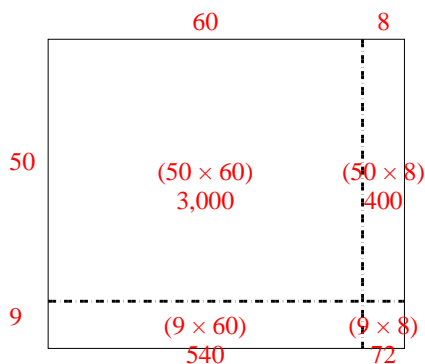
5. \_\_\_\_\_

6. \_\_\_\_\_

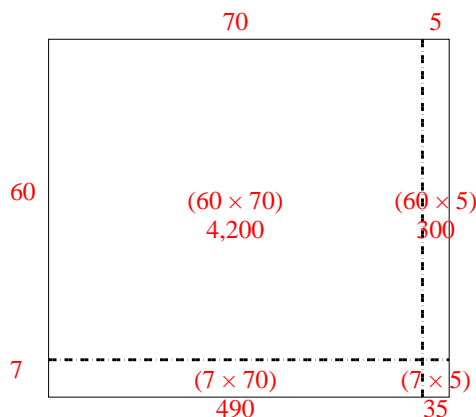


Use the array provided to solve each problem.

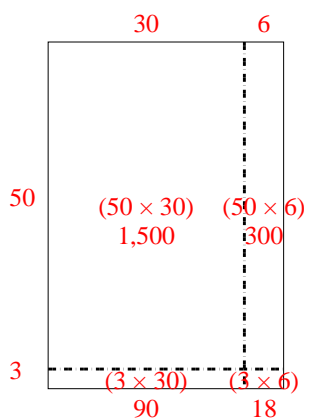
1)  $59 \times 68 =$



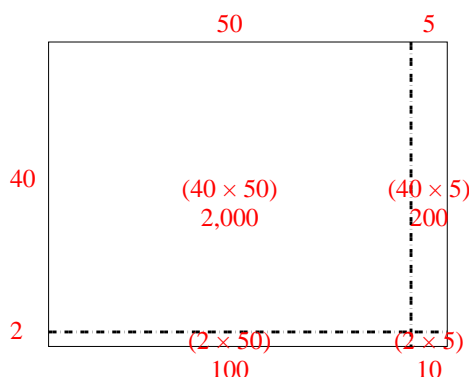
2)  $67 \times 75 =$



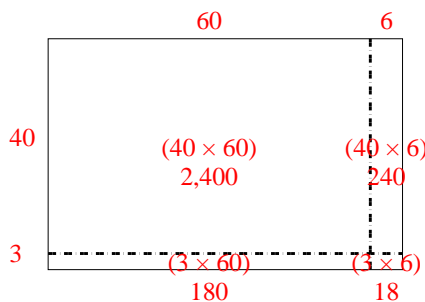
3)  $53 \times 36 =$



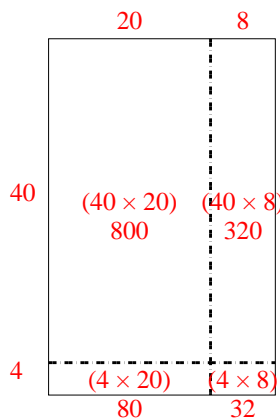
4)  $42 \times 55 =$



5)  $43 \times 66 =$



6)  $44 \times 28 =$



Answers

1. **4,012**

2. **5,025**

3. **1,908**

4. **2,310**

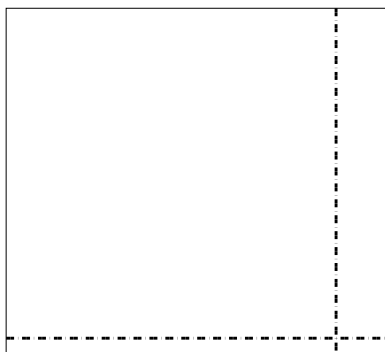
5. **2,838**

6. **1,232**




Use the array provided to solve each problem.


1)  $63 \times 69 =$




2)  $66 \times 53 =$




3)  $42 \times 53 =$




4)  $53 \times 72 =$



5)  $62 \times 75 =$



6)  $74 \times 88 =$



Answers

1. \_\_\_\_\_

2. \_\_\_\_\_

3. \_\_\_\_\_

4. \_\_\_\_\_

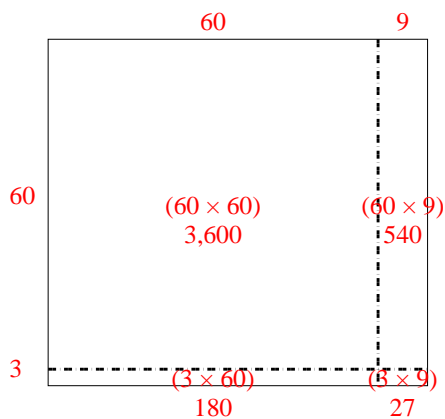
5. \_\_\_\_\_

6. \_\_\_\_\_

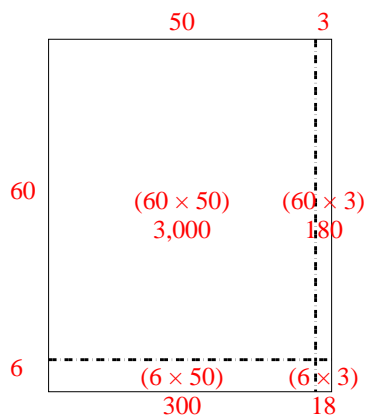


Use the array provided to solve each problem.

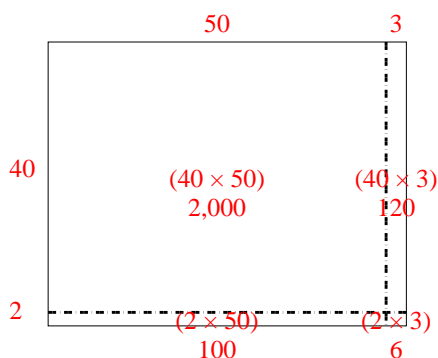
1)  $63 \times 69 =$



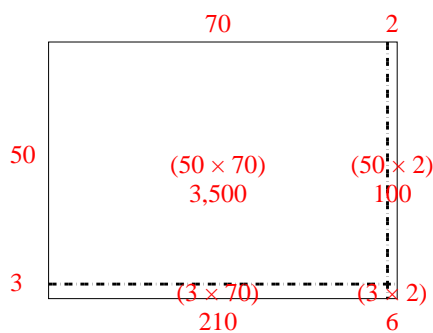
2)  $66 \times 53 =$



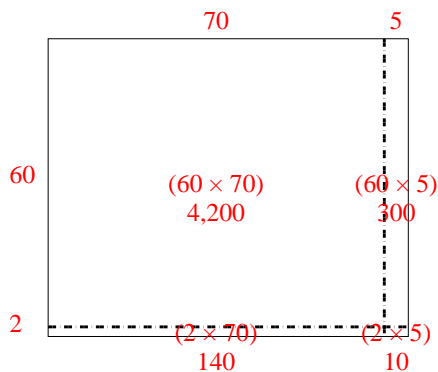
3)  $42 \times 53 =$



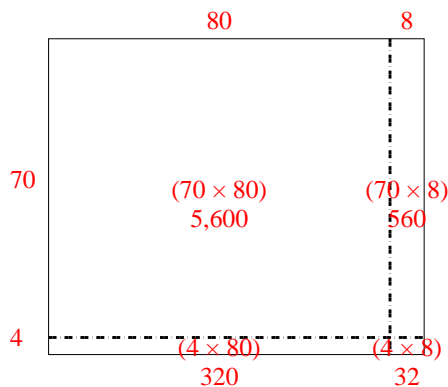
4)  $53 \times 72 =$



5)  $62 \times 75 =$



6)  $74 \times 88 =$



Answers

1. **4,347**

2. **3,498**

3. **2,226**

4. **3,816**

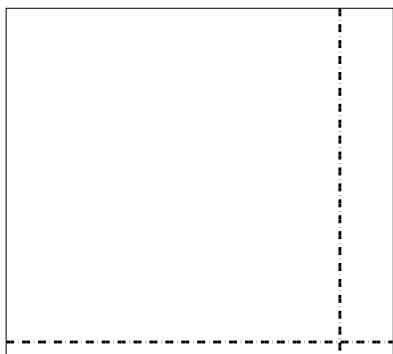
5. **4,650**

6. **6,512**




Use the array provided to solve each problem.


1)  $52 \times 58 =$



2)  $36 \times 33 =$



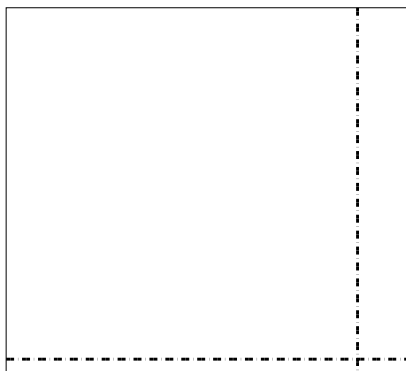
3)  $33 \times 46 =$




4)  $45 \times 68 =$



5)  $52 \times 57 =$



6)  $42 \times 37 =$



Answers

1. \_\_\_\_\_

2. \_\_\_\_\_

3. \_\_\_\_\_

4. \_\_\_\_\_

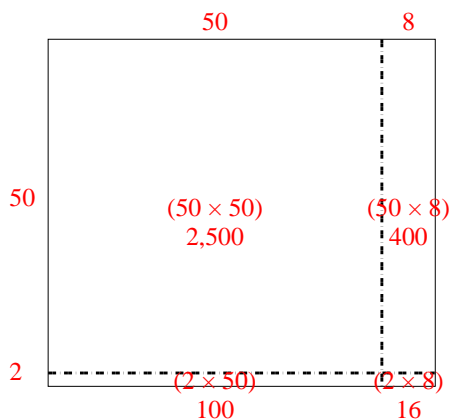
5. \_\_\_\_\_

6. \_\_\_\_\_

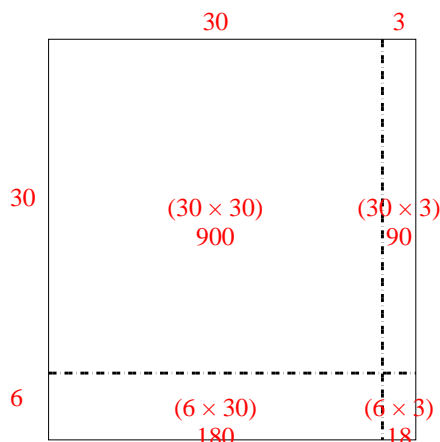


Use the array provided to solve each problem.

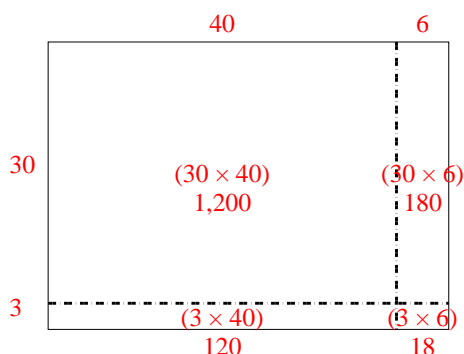
1)  $52 \times 58 =$



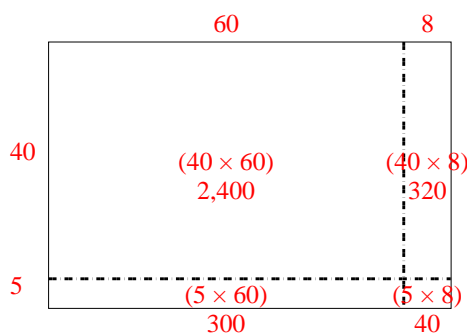
2)  $36 \times 33 =$



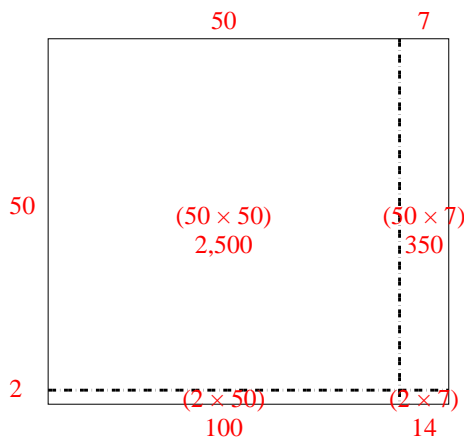
3)  $33 \times 46 =$



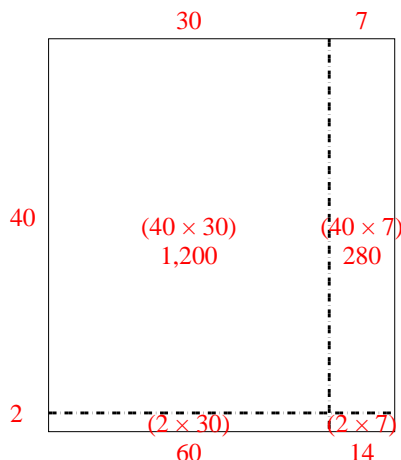
4)  $45 \times 68 =$



5)  $52 \times 57 =$



6)  $42 \times 37 =$



Answers

1. **3,016**

2. **1,188**

3. **1,518**

4. **3,060**


5. **2,964**

6. **1,554**




Use the array provided to solve each problem.

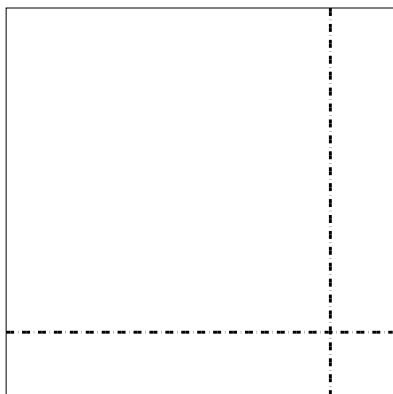
1)  $43 \times 28 =$



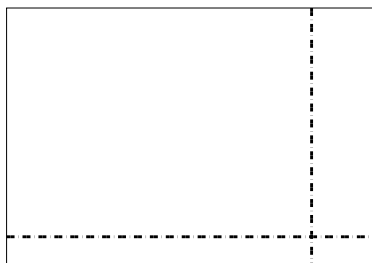
2)  $37 \times 18 =$




3)  $36 \times 36 =$




4)  $34 \times 49 =$



5)  $46 \times 54 =$



6)  $44 \times 52 =$



Answers

1. \_\_\_\_\_

2. \_\_\_\_\_

3. \_\_\_\_\_

4. \_\_\_\_\_

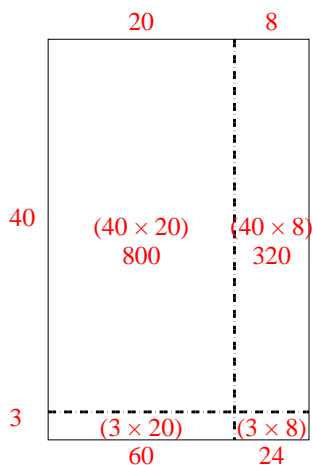
5. \_\_\_\_\_

6. \_\_\_\_\_

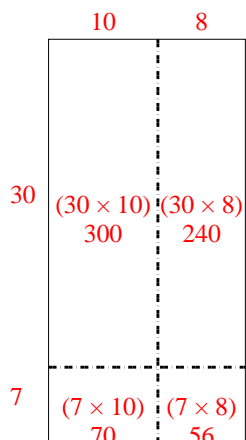


Use the array provided to solve each problem.

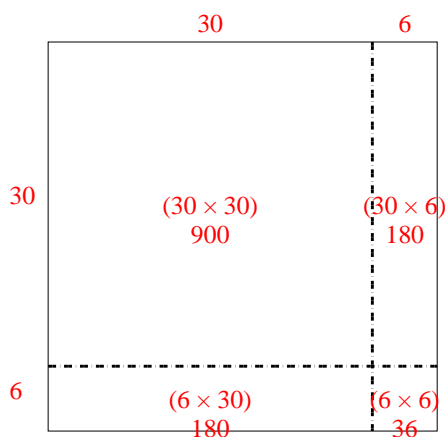
1)  $43 \times 28 =$



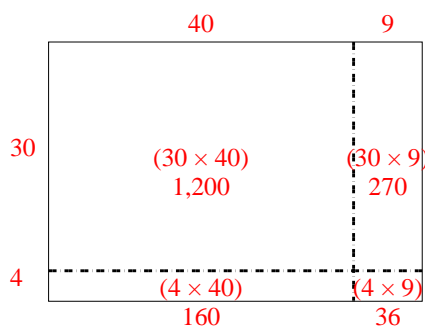
2)  $37 \times 18 =$



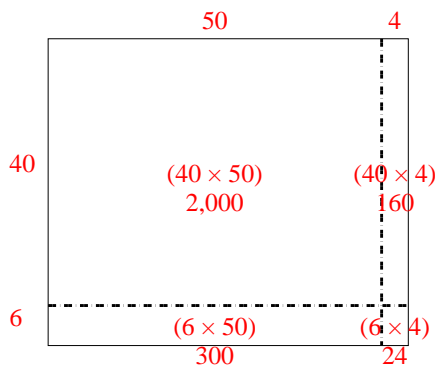
3)  $36 \times 36 =$



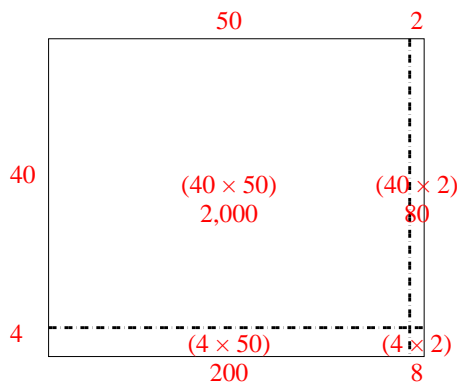
4)  $34 \times 49 =$



5)  $46 \times 54 =$



6)  $44 \times 52 =$



Answers

1. **1,204**

2. **666**

3. **1,296**

4. **1,666**

5. **2,484**


6. **2,288**






Use the array provided to solve each problem.


1)  $62 \times 69 =$




2)  $53 \times 39 =$




3)  $57 \times 66 =$




4)  $54 \times 57 =$



5)  $46 \times 42 =$



6)  $34 \times 27 =$



Answers

1. \_\_\_\_\_

2. \_\_\_\_\_

3. \_\_\_\_\_

4. \_\_\_\_\_

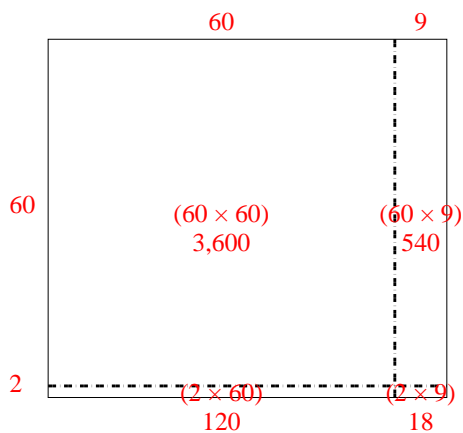
5. \_\_\_\_\_

6. \_\_\_\_\_

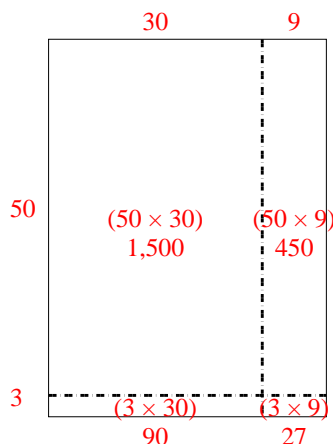


Use the array provided to solve each problem.

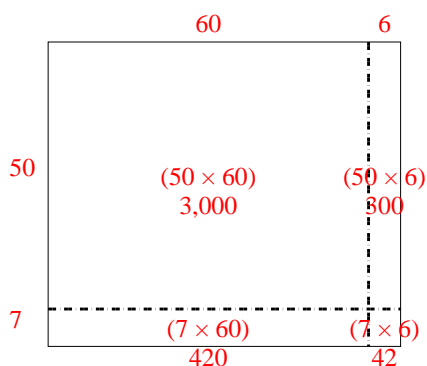
1)  $62 \times 69 =$



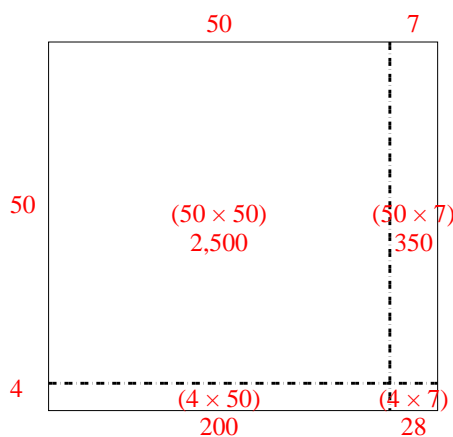
2)  $53 \times 39 =$



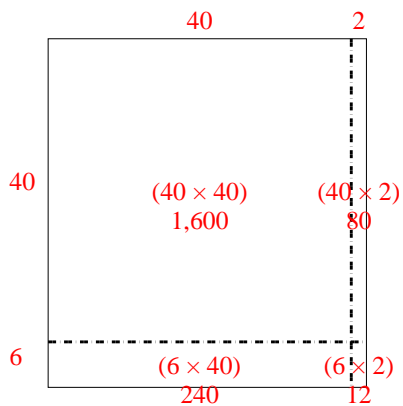
3)  $57 \times 66 =$



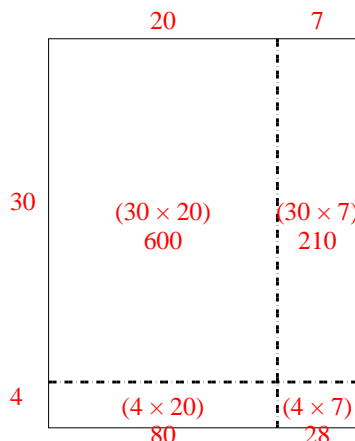
4)  $54 \times 57 =$



5)  $46 \times 42 =$



6)  $34 \times 27 =$



Answers

1. **4,278**

2. **2,067**

3. **3,762**

4. **3,078**


5. **1,932**

6. **918**




Use the array provided to solve each problem.


1)  $38 \times 22 =$




2)  $36 \times 44 =$




3)  $48 \times 45 =$




4)  $49 \times 54 =$



5)  $43 \times 29 =$



6)  $39 \times 23 =$



Answers

1. \_\_\_\_\_

2. \_\_\_\_\_

3. \_\_\_\_\_

4. \_\_\_\_\_

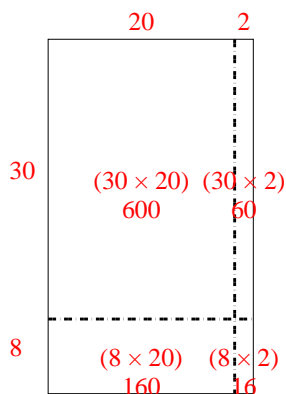
5. \_\_\_\_\_

6. \_\_\_\_\_

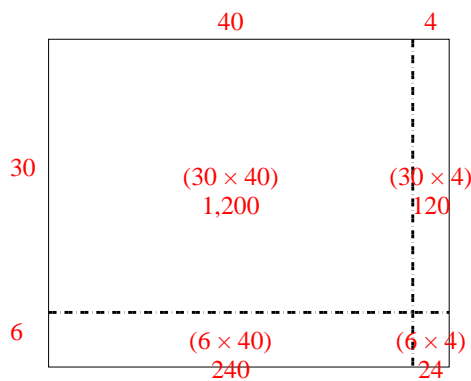


Use the array provided to solve each problem.

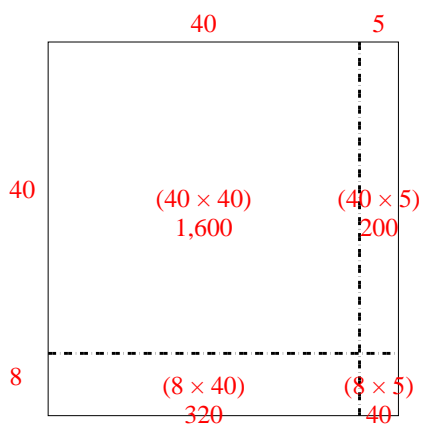
1)  $38 \times 22 =$



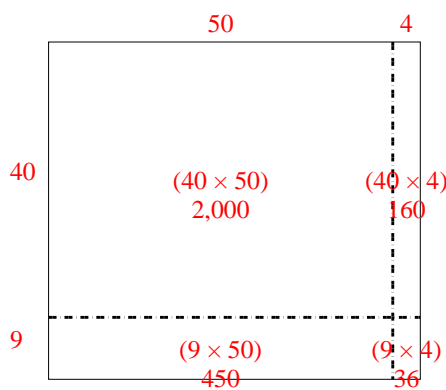
2)  $36 \times 44 =$



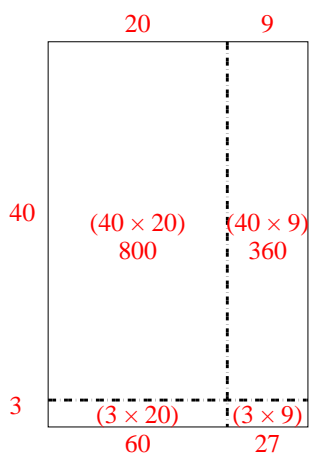
3)  $48 \times 45 =$



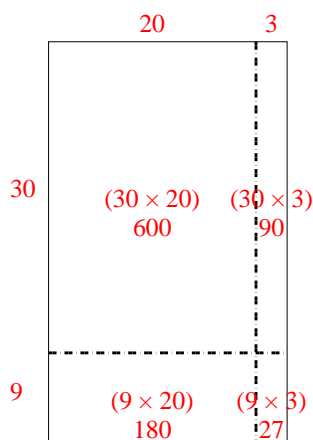
4)  $49 \times 54 =$



5)  $43 \times 29 =$



6)  $39 \times 23 =$



Answers

1. **836**

2. **1,584**

3. **2,160**

4. **2,646**


5. **1,247**

6. **897**




Use the array provided to solve each problem.


1)  $36 \times 55 =$




2)  $42 \times 26 =$




3)  $37 \times 48 =$




4)  $44 \times 59 =$



5)  $46 \times 39 =$



6)  $47 \times 59 =$



Answers

1. \_\_\_\_\_

2. \_\_\_\_\_

3. \_\_\_\_\_

4. \_\_\_\_\_

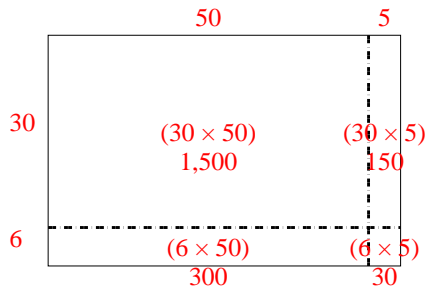
5. \_\_\_\_\_

6. \_\_\_\_\_

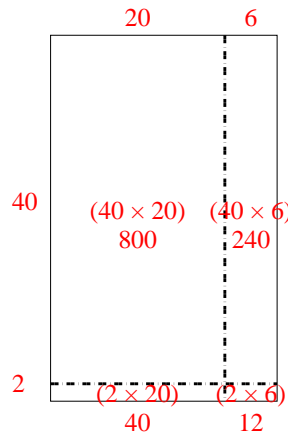


Use the array provided to solve each problem.

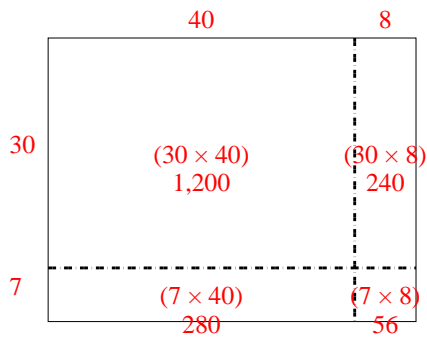
1)  $36 \times 55 =$



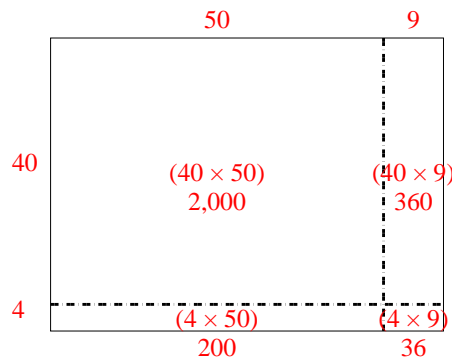
2)  $42 \times 26 =$



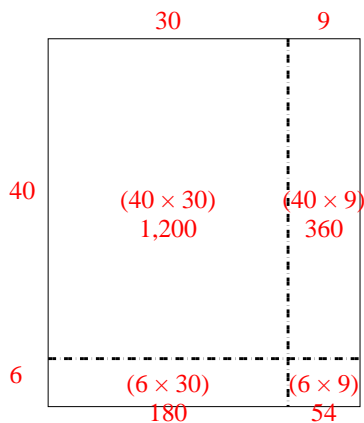
3)  $37 \times 48 =$



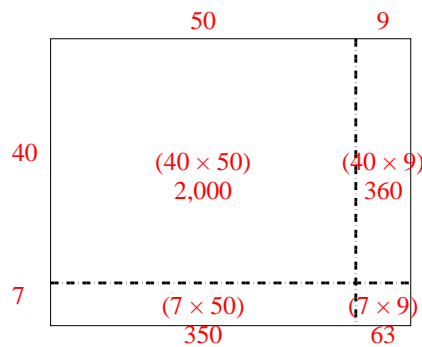
4)  $44 \times 59 =$



5)  $46 \times 39 =$



6)  $47 \times 59 =$



Answers

1. **1,980**

2. **1,092**

3. **1,776**

4. **2,596**


5. **1,794**

6. **2,773**




Use the array provided to solve each problem.

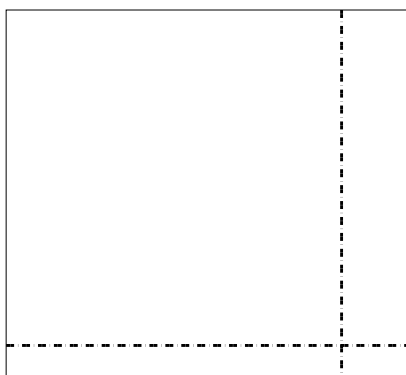
1)  $48 \times 23 =$




2)  $45 \times 44 =$




3)  $33 \times 36 =$




4)  $37 \times 24 =$



5)  $39 \times 14 =$



6)  $35 \times 12 =$



Answers

1. \_\_\_\_\_

2. \_\_\_\_\_

3. \_\_\_\_\_

4. \_\_\_\_\_

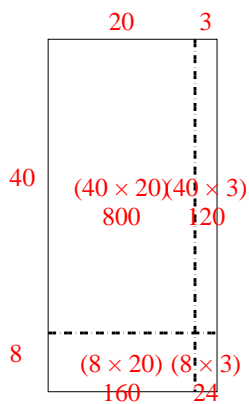
5. \_\_\_\_\_

6. \_\_\_\_\_

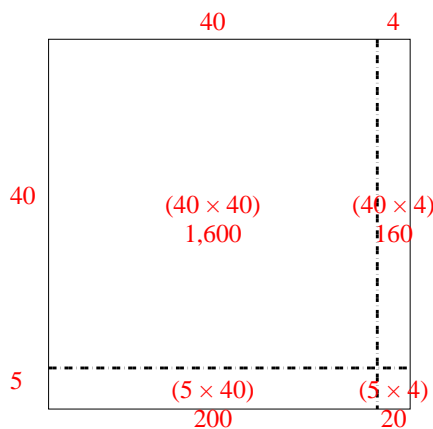


Use the array provided to solve each problem.

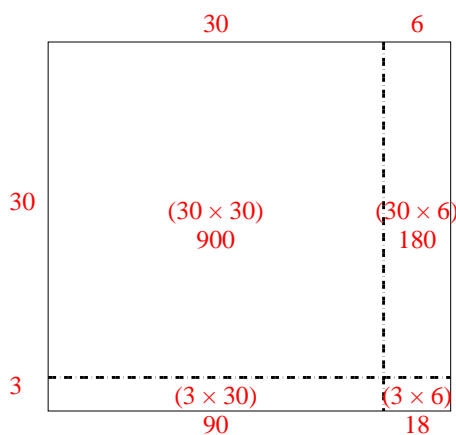
1)  $48 \times 23 =$



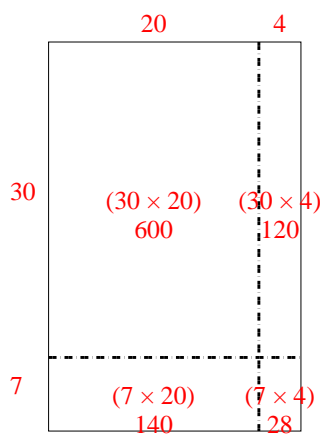
2)  $45 \times 44 =$



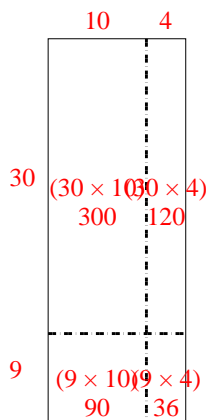
3)  $33 \times 36 =$



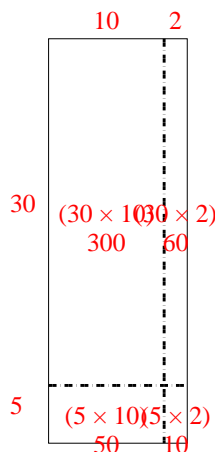
4)  $37 \times 24 =$



5)  $39 \times 14 =$



6)  $35 \times 12 =$



Answers

1. **1,104**

2. **1,980**

3. **1,188**

4. **888**

5. **546**


6. **420**






Use the array provided to solve each problem.


1)  $43 \times 36 =$




2)  $37 \times 43 =$




3)  $33 \times 22 =$




4)  $34 \times 45 =$



5)  $39 \times 46 =$



6)  $36 \times 35 =$



Answers

1. \_\_\_\_\_

2. \_\_\_\_\_

3. \_\_\_\_\_

4. \_\_\_\_\_

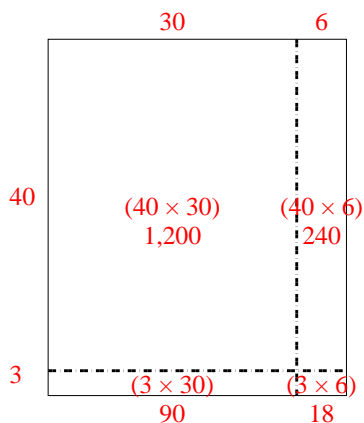
5. \_\_\_\_\_

6. \_\_\_\_\_

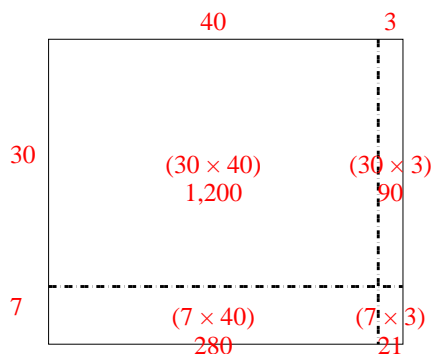


Use the array provided to solve each problem.

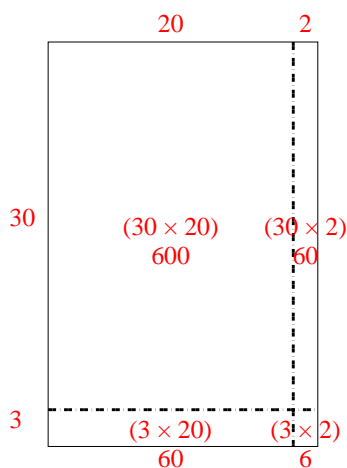
1)  $43 \times 36 =$



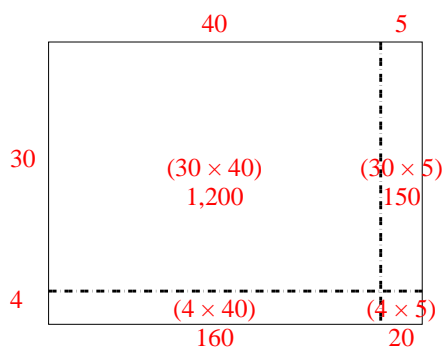
2)  $37 \times 43 =$



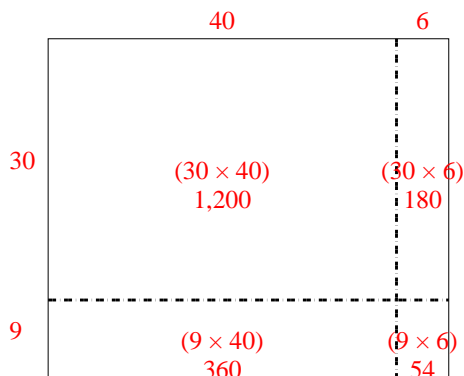
3)  $33 \times 22 =$



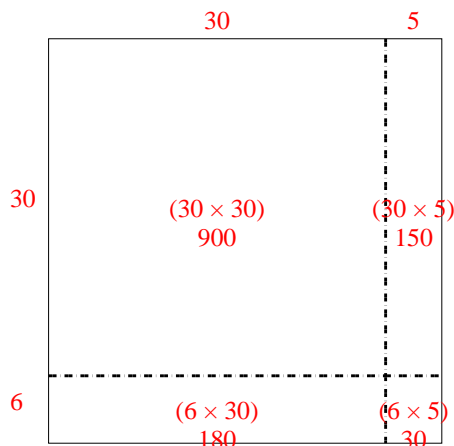
4)  $34 \times 45 =$



5)  $39 \times 46 =$



6)  $36 \times 35 =$



Answers

1. **1,548**

2. **1,591**

3. **726**

4. **1,530**


5. **1,794**

6. **1,260**




Use the array provided to solve each problem.


1)  $45 \times 59 =$




2)  $49 \times 59 =$




3)  $39 \times 16 =$




4)  $37 \times 13 =$



5)  $37 \times 48 =$



6)  $37 \times 14 =$



Answers

1. \_\_\_\_\_

2. \_\_\_\_\_

3. \_\_\_\_\_

4. \_\_\_\_\_

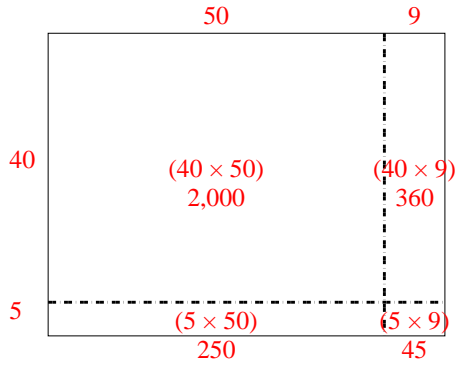
5. \_\_\_\_\_

6. \_\_\_\_\_

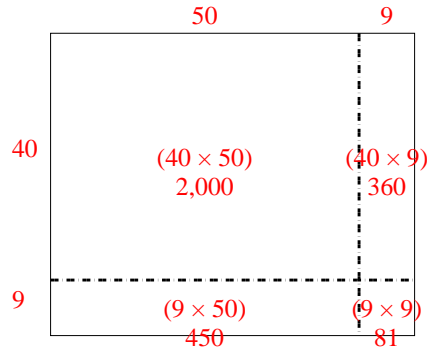


Use the array provided to solve each problem.

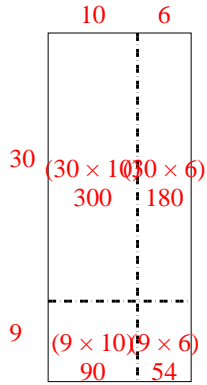
1)  $45 \times 59 =$



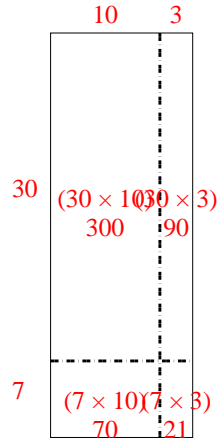
2)  $49 \times 59 =$



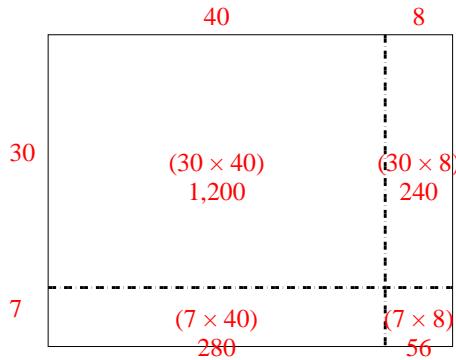
3)  $39 \times 16 =$



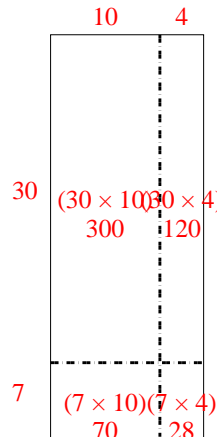
4)  $37 \times 13 =$



5)  $37 \times 48 =$



6)  $37 \times 14 =$



Answers

1. 2,655

2. 2,891

3. 624

4. 481

5. 1,776

6. 518