


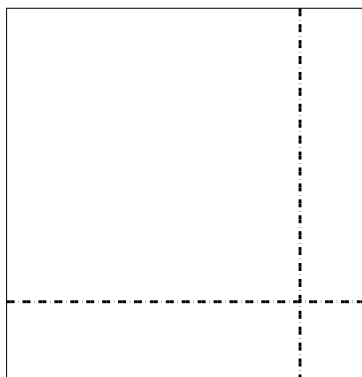


Use the array provided to solve each problem.


1) $63 \times 45 =$



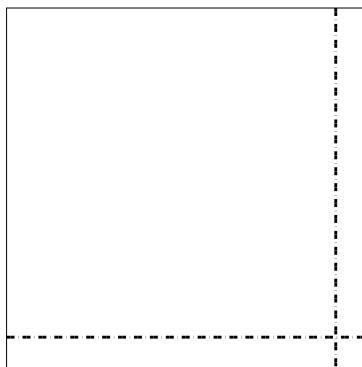
2) $38 \times 37 =$




3) $36 \times 17 =$




4) $33 \times 33 =$



5) $32 \times 35 =$



6) $33 \times 32 =$



Answers

1. _____

2. _____

3. _____

4. _____

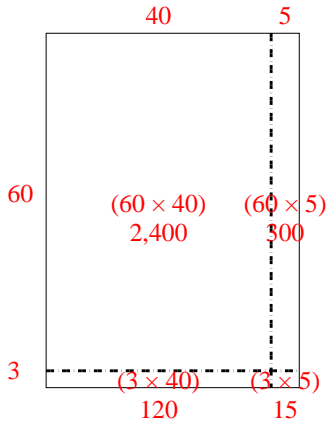
5. _____

6. _____

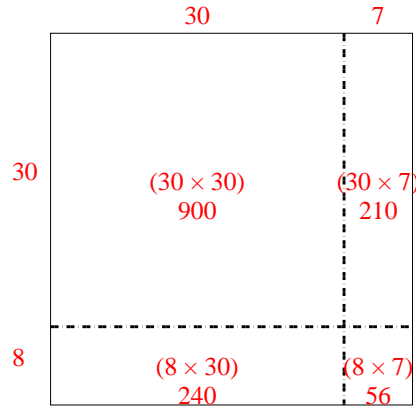


Use the array provided to solve each problem.

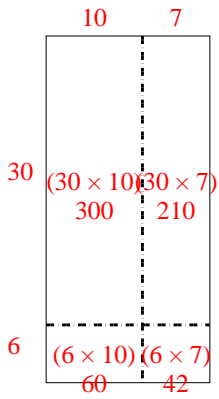
1) $63 \times 45 =$



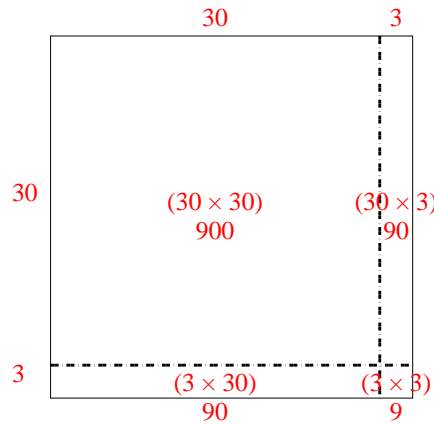
2) $38 \times 37 =$



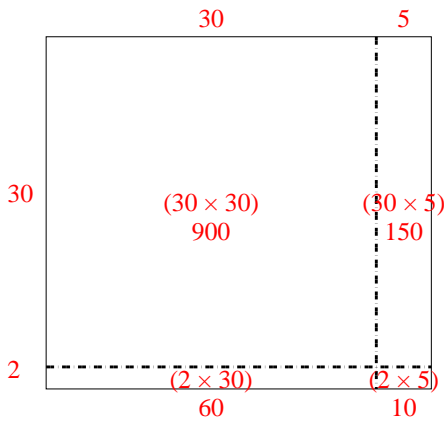
3) $36 \times 17 =$



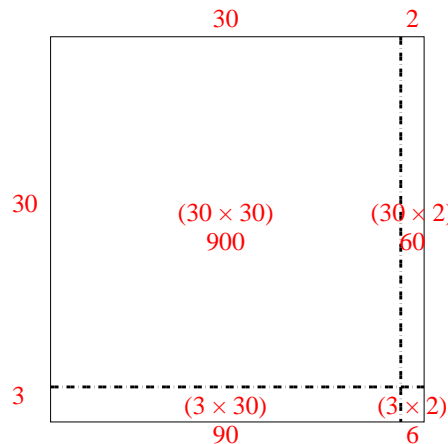
4) $33 \times 33 =$



5) $32 \times 35 =$



6) $33 \times 32 =$



Answers

1. **2,835**

2. **1,406**

3. **612**

4. **1,089**

5. **1,120**

6. **1,056**