





Use the array provided to solve each problem.


1)  $21 \times 20 =$




2)  $27 \times 20 =$




3)  $20 \times 23 =$



4)  $20 \times 27 =$



5)  $20 \times 29 =$



6)  $20 \times 25 =$



Answers

1. \_\_\_\_\_

2. \_\_\_\_\_

3. \_\_\_\_\_

4. \_\_\_\_\_

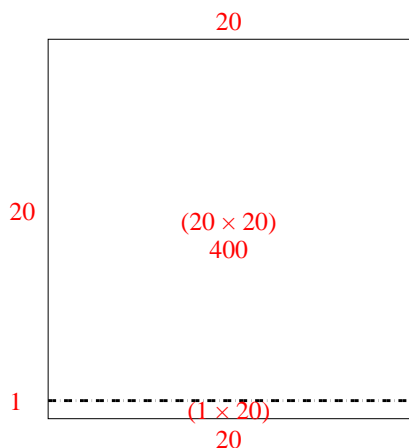
5. \_\_\_\_\_

6. \_\_\_\_\_

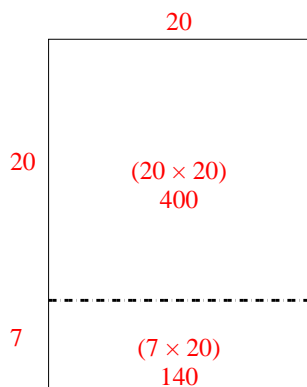


Use the array provided to solve each problem.

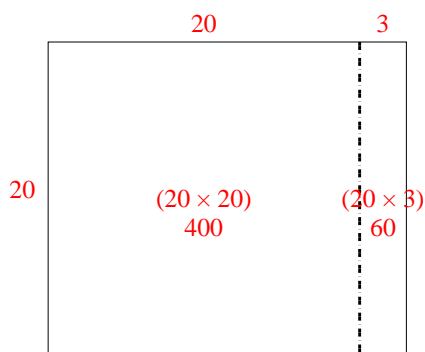
1)  $21 \times 20 =$



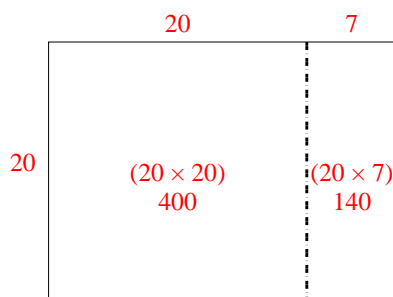
2)  $27 \times 20 =$



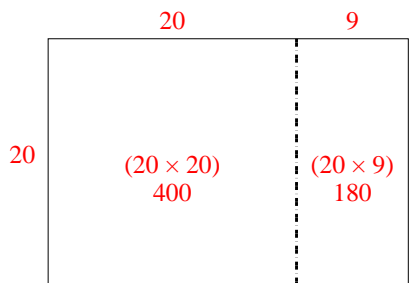
3)  $20 \times 23 =$



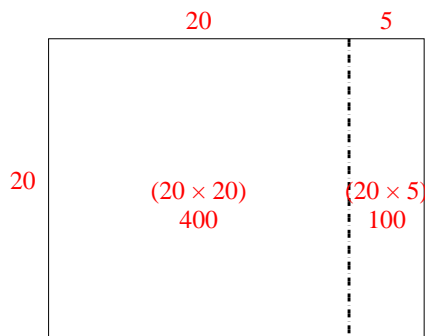
4)  $20 \times 27 =$



5)  $20 \times 29 =$



6)  $20 \times 25 =$



Answers

1. 420

2. 540

3. 460

4. 540

5. 580

6. 500