




Use the array provided to solve each problem.


1)  $20 \times 35 =$




2)  $25 \times 20 =$




3)  $24 \times 20 =$




4)  $20 \times 29 =$



5)  $20 \times 25 =$



6)  $20 \times 21 =$



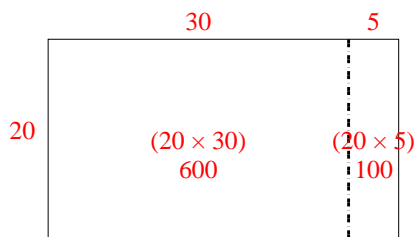
Answers

- 1. \_\_\_\_\_
- 2. \_\_\_\_\_
- 3. \_\_\_\_\_
- 4. \_\_\_\_\_
- 5. \_\_\_\_\_
- 6. \_\_\_\_\_

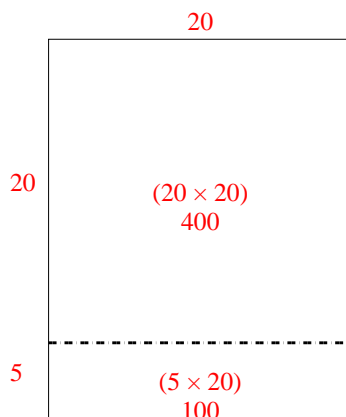


Use the array provided to solve each problem.

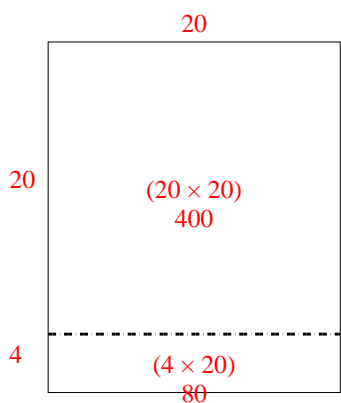
1)  $20 \times 35 =$



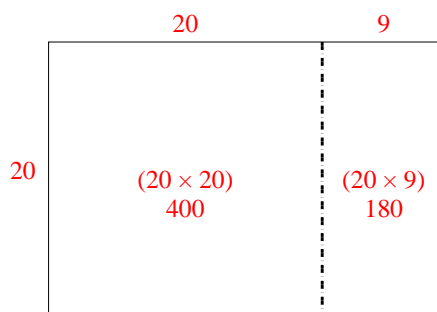
2)  $25 \times 20 =$



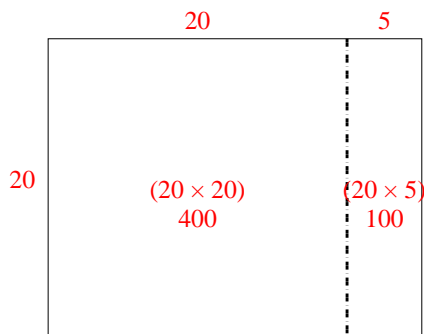
3)  $24 \times 20 =$



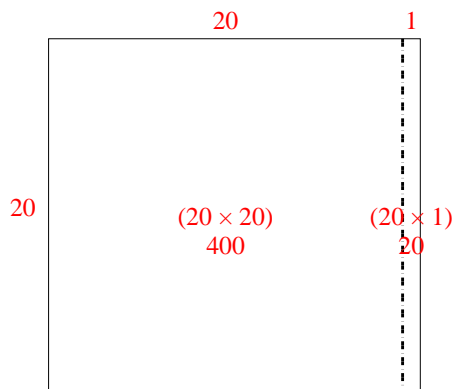
4)  $20 \times 29 =$



5)  $20 \times 25 =$



6)  $20 \times 21 =$



Answers

1. 700

2. 500

3. 480

4. 580

5. 500

6. 420