



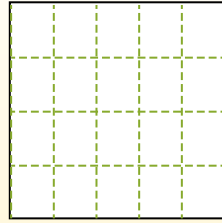
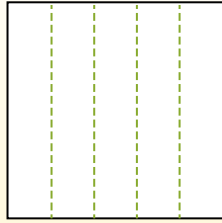
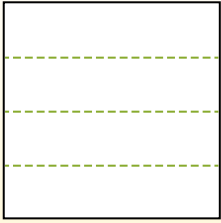
Partition the shape as described and then count to find the number of boxes.

Answers

Rows go left to right.

Columns go up and down.

This has 4 rows and 5 columns.  
There are 20 boxes total.



1. \_\_\_\_\_
2. \_\_\_\_\_
3. \_\_\_\_\_
4. \_\_\_\_\_
5. \_\_\_\_\_
6. \_\_\_\_\_
7. \_\_\_\_\_
8. \_\_\_\_\_
9. \_\_\_\_\_


1) 2 rows  
5 columns



2) 3 rows  
5 columns



3) 5 rows  
5 columns




4) 4 rows  
3 columns



5) 5 rows  
3 columns



6) 2 rows  
3 columns




7) 5 rows  
4 columns



8) 2 rows  
2 columns



9) 4 rows  
4 columns



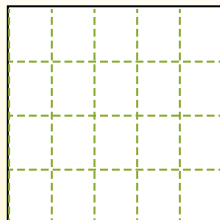
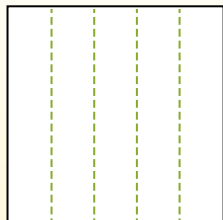
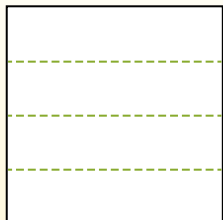


Partition the shape as described and then count to find the number of boxes.

Rows go left to right.

Columns go up and down.

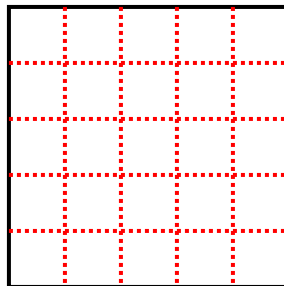
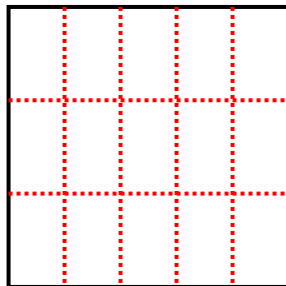
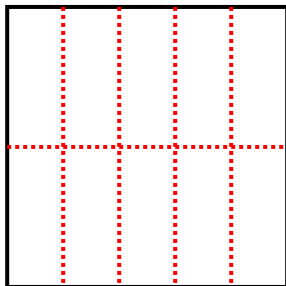
This has 4 rows and 5 columns.  
There are 20 boxes total.



1) 2 rows  
5 columns

2) 3 rows  
5 columns

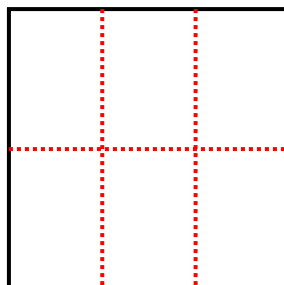
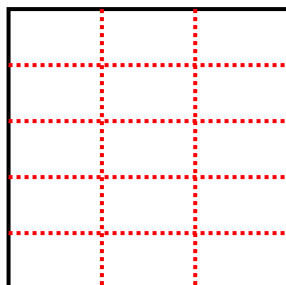
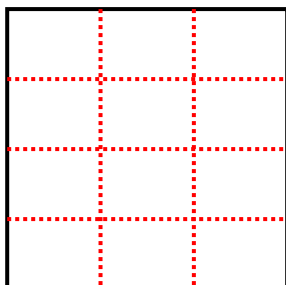
3) 5 rows  
5 columns



4) 4 rows  
3 columns

5) 5 rows  
3 columns


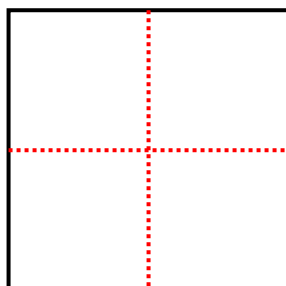
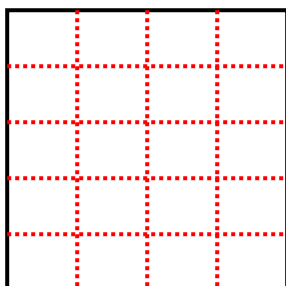
6) 2 rows  
3 columns



7) 5 rows  
4 columns

8) 2 rows  
2 columns

9) 4 rows  
4 columns



Answers

1. 10

2. 15

3. 25

4. 12

5. 15

6. 6

7. 20

8. 4

9. 16