



Express each set as a multiplication problem.

Ex)

Answers

Ex. $5 \times 8 = 40$

1)

1. _____

2. _____

3. _____

2)

4. _____

5. _____

6. _____

3)

7. _____

8. _____

4)

5)


6)

7)

8)

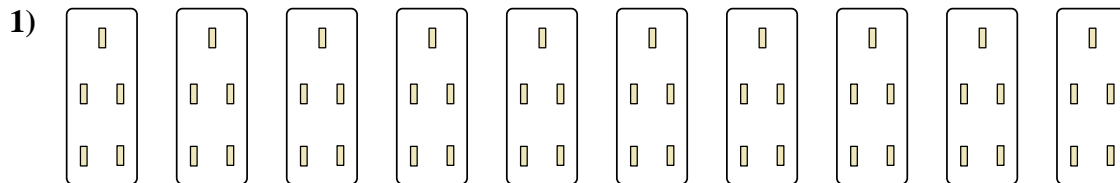


Express each set as a multiplication problem.



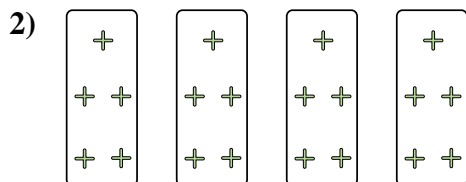
Answers

Ex. 5×8=40




1. 10×5=50

2. 4×5=20



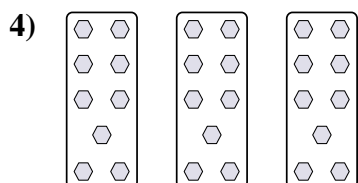
3. 2×8=16

4. 3×9=27



5. 7×2=14

6. 4×4=16



7. 2×2=4

8. 8×2=16

