



Express each set as a multiplication problem.

Answers

Ex)

Ex. $8 \times 5 = 40$

1)

1. _____

2. _____

2)

3. _____

4. _____

5. _____

3)

6. _____

7. _____

8. _____

4)

5)


6)

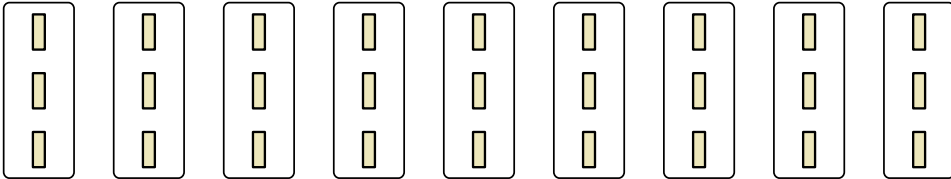
7)

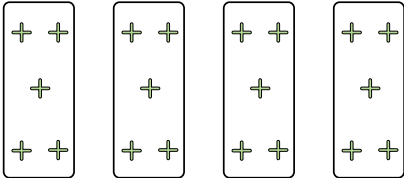
8)




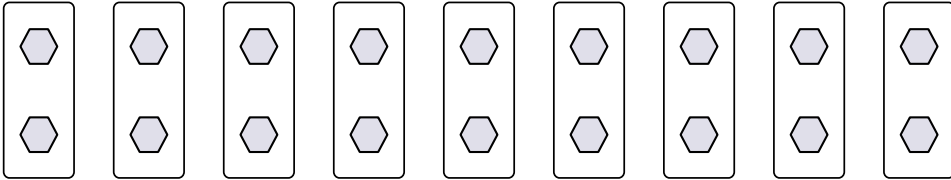
Express each set as a multiplication problem.

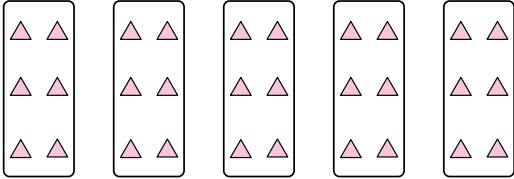
Ex) 

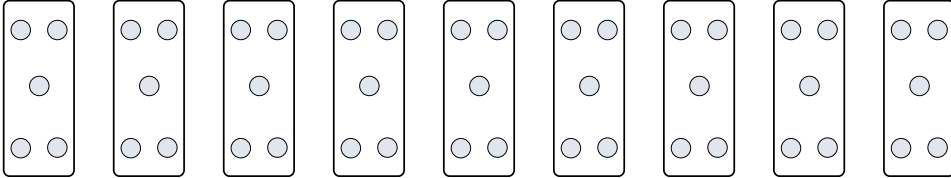
1) 


2) 


3) 

4) 

5) 

6) 

7) 

8) 

Answers

- Ex. 8×5=40
1. 9×3=27
2. 4×5=20
3. 5×8=40
4. 10×2=20
5. 5×6=30
6. 9×5=45
7. 8×2=16
8. 7×8=56