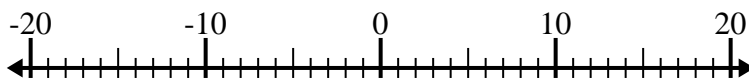


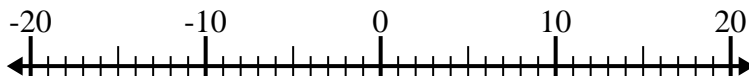


Solve each problem. Use the numberline if needed.

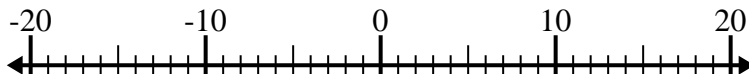
1) $8 - (-12) =$ _____



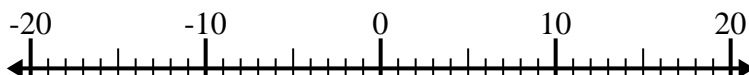
2) $(-8) + (-6) =$ _____



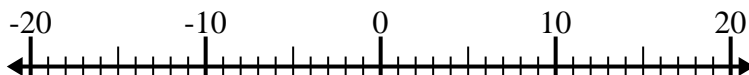
3) $12 + (-2) =$ _____



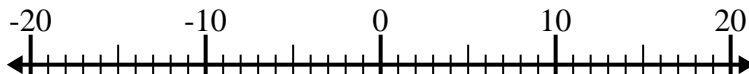
4) $(-2) + (-13) =$ _____



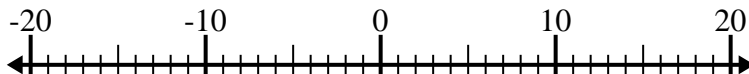
5) $(-6) + 8 =$ _____



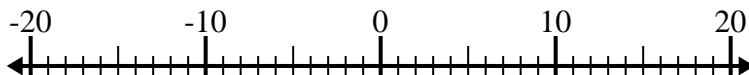
6) $(-5) - 10 =$ _____



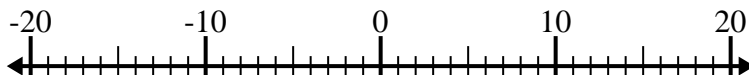
7) $(-14) - (-8) =$ _____



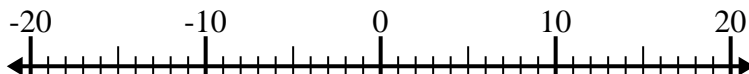
8) $5 - (-2) =$ _____



9) $(-11) - (-14) =$ _____



10) $14 + (-10) =$ _____

**Answers**

1. _____

2. _____

3. _____

4. _____

5. _____

6. _____

7. _____

8. _____

9. _____

10. _____

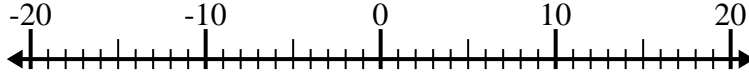


Solve each problem. Use the numberline if needed.

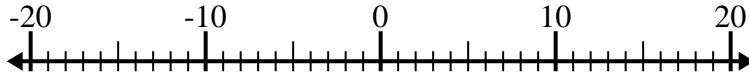
1) $8 - (-12) = \underline{20}$



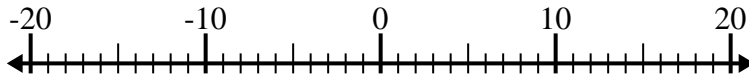
2) $(-8) + (-6) = \underline{-14}$



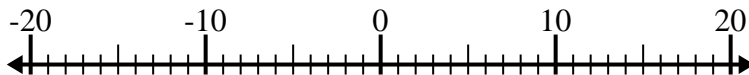
3) $12 + (-2) = \underline{10}$



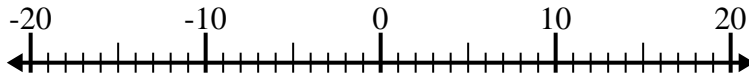
4) $(-2) + (-13) = \underline{-15}$



5) $(-6) + 8 = \underline{2}$



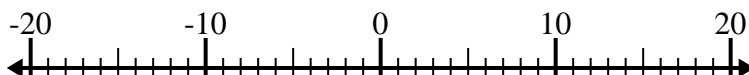
6) $(-5) - 10 = \underline{-15}$



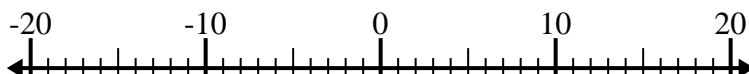
7) $(-14) - (-8) = \underline{-6}$



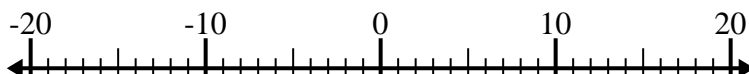
8) $5 - (-2) = \underline{7}$



9) $(-11) - (-14) = \underline{3}$



10) $14 + (-10) = \underline{4}$

**Answers**1. **20**2. **-14**3. **10**4. **-15**5. **2**6. **-15**7. **-6**8. **7**9. **3**10. **4**