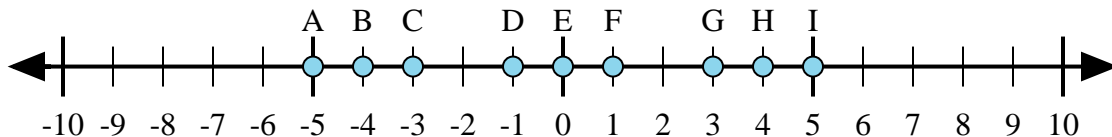




Determine which letter in the numberline best represents the answer to each problem.

Answers



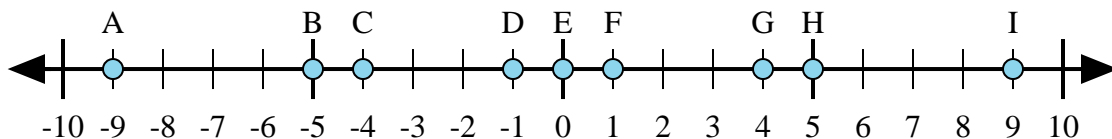
1) $4 + 1 =$

2) $4 + (-1) =$

3) $1 + (-4) =$

4) $(-4) + (-1) =$

5) $(-1) + 4 =$



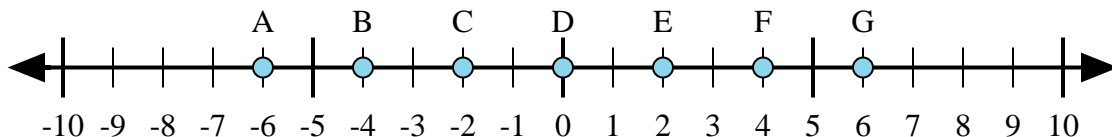
6) $(-4) + 5 =$

7) $4 + (-5) =$

8) $4 + 5 =$

9) $(-4) + (-5) =$

10) $(-5) + 4 =$



11) $(-4) + (-2) =$

12) $2 + (-4) =$

13) $4 + 2 =$

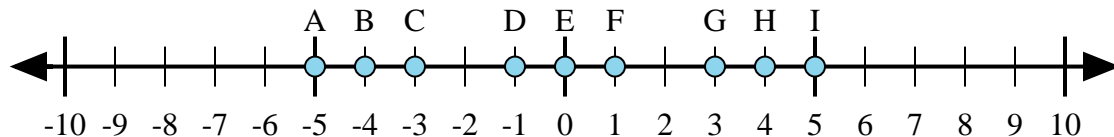
14) $(-2) + 4 =$

15) $4 + (-2) =$

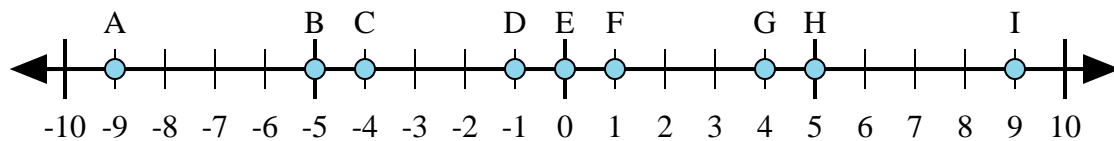
1. _____
2. _____
3. _____
4. _____
5. _____
6. _____
7. _____
8. _____
9. _____
10. _____
11. _____
12. _____
13. _____
14. _____
15. _____



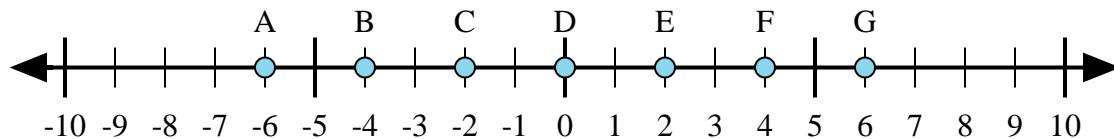
Determine which letter in the numberline best represents the answer to each problem.



- 1) $4 + 1 =$
- 2) $4 + (-1) =$
- 3) $1 + (-4) =$
- 4) $(-4) + (-1) =$
- 5) $(-1) + 4 =$



- 6) $(-4) + 5 =$
- 7) $4 + (-5) =$
- 8) $4 + 5 =$
- 9) $(-4) + (-5) =$
- 10) $(-5) + 4 =$



- 11) $(-4) + (-2) =$
- 12) $2 + (-4) =$
- 13) $4 + 2 =$
- 14) $(-2) + 4 =$
- 15) $4 + (-2) =$

Answers

1. I
2. G
3. C
4. A
5. G
6. F
7. D
8. I
9. A
10. D
11. A
12. C
13. G
14. E
15. E