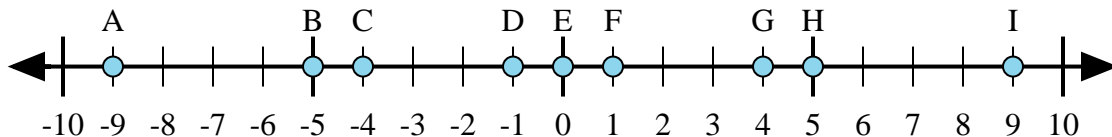




Determine which letter in the numberline best represents the answer to each problem.

Answers



1) $(-5) + 4 =$

2) $(-4) + (-5) =$

3) $4 + 5 =$

4) $(-4) + 5 =$

5) $5 + (-4) =$

1. _____

2. _____

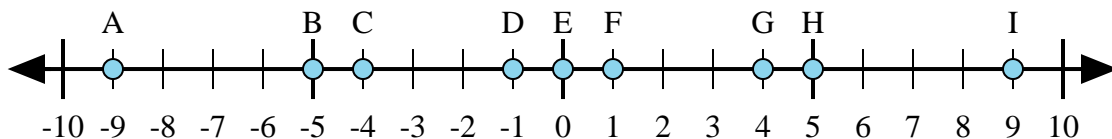
3. _____

4. _____

5. _____

6. _____

7. _____



6) $(-5) + (-4) =$

7) $5 + (-4) =$

8) $4 + (-5) =$

9) $(-5) + 4 =$

10) $5 + 4 =$

8. _____

9. _____

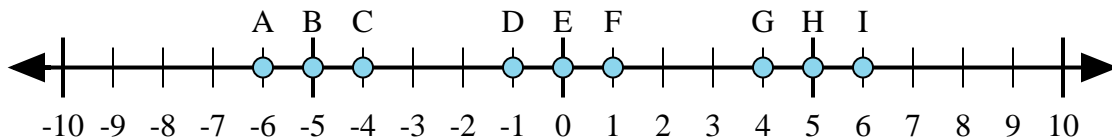
10. _____

11. _____

12. _____

13. _____

14. _____



11) $(-5) + (-1) =$

12) $(-5) + 1 =$

13) $5 + 1 =$

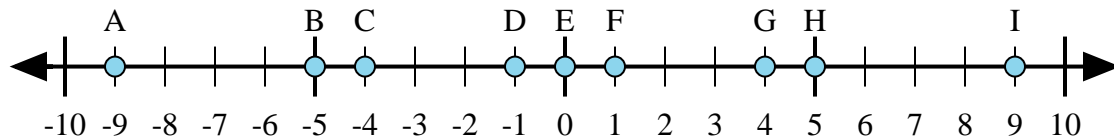
14) $1 + (-5) =$

15) $(-1) + 5 =$

15. _____



Determine which letter in the numberline best represents the answer to each problem.



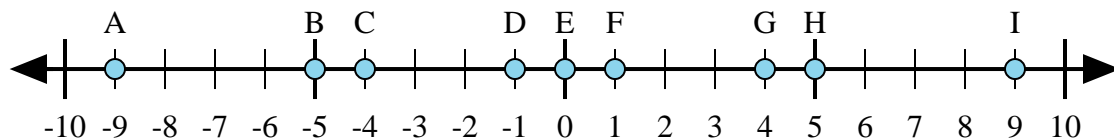
1) $(-5) + 4 =$

2) $(-4) + (-5) =$

3) $4 + 5 =$

4) $(-4) + 5 =$

5) $5 + (-4) =$



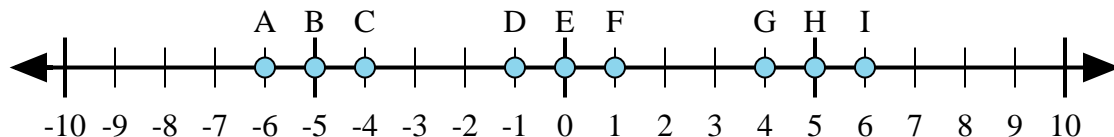
6) $(-5) + (-4) =$

7) $5 + (-4) =$

8) $4 + (-5) =$

9) $(-5) + 4 =$

10) $5 + 4 =$



11) $(-5) + (-1) =$

12) $(-5) + 1 =$

13) $5 + 1 =$

14) $1 + (-5) =$

15) $(-1) + 5 =$

Answers

1. D

2. A

3. I

4. F

5. F

6. A

7. F

8. D

9. D

10. I

11. A

12. C

13. I

14. C

15. G