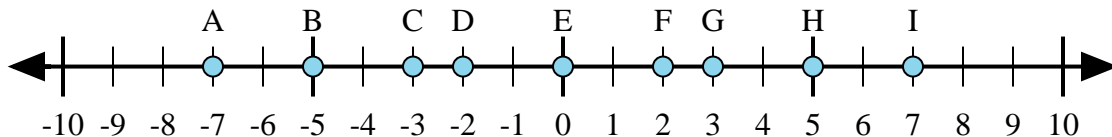




Determine which letter in the numberline best represents the answer to each problem.

Answers



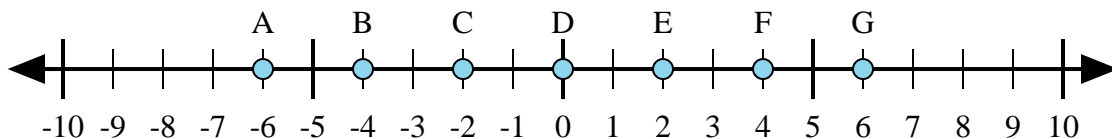
1) $(-5) + 2 =$

2) $(-2) + (-5) =$

3) $2 + 5 =$

4) $(-2) + 5 =$

5) $2 + (-5) =$



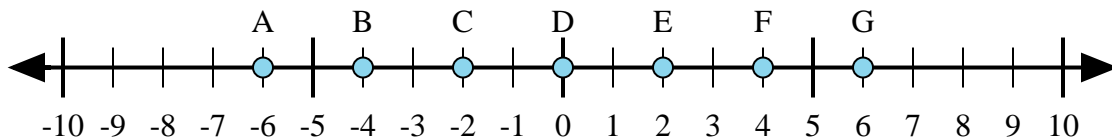
6) $(-2) + 4 =$

7) $(-4) + 2 =$

8) $(-2) + (-4) =$

9) $2 + (-4) =$

10) $2 + 4 =$



11) $4 + 2 =$

12) $(-4) + (-2) =$

13) $(-2) + 4 =$

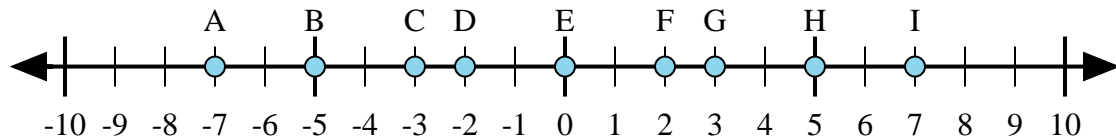
14) $(-4) + 2 =$

15) $2 + (-4) =$

1. _____
2. _____
3. _____
4. _____
5. _____
6. _____
7. _____
8. _____
9. _____
10. _____
11. _____
12. _____
13. _____
14. _____
15. _____



Determine which letter in the numberline best represents the answer to each problem.



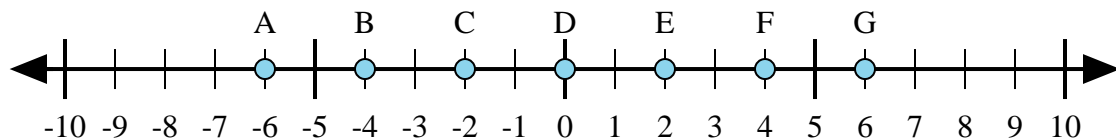
1) $(-5) + 2 =$

2) $(-2) + (-5) =$

3) $2 + 5 =$

4) $(-2) + 5 =$

5) $2 + (-5) =$



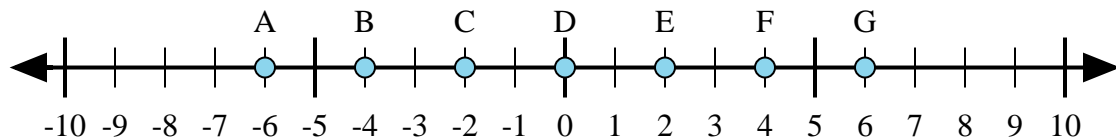
6) $(-2) + 4 =$

7) $(-4) + 2 =$

8) $(-2) + (-4) =$

9) $2 + (-4) =$

10) $2 + 4 =$



11) $4 + 2 =$

12) $(-4) + (-2) =$

13) $(-2) + 4 =$

14) $(-4) + 2 =$

15) $2 + (-4) =$

Answers

1. **C**

2. **A**

3. **I**

4. **G**

5. **C**

6. **E**

7. **C**

8. **A**

9. **C**

10. **G**

11. **G**

12. **A**

13. **E**

14. **C**

15. **C**