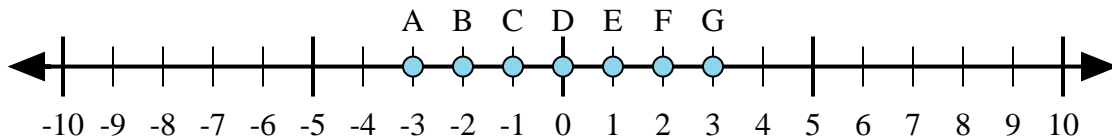




Determine which letter in the numberline best represents the answer to each problem.

Answers



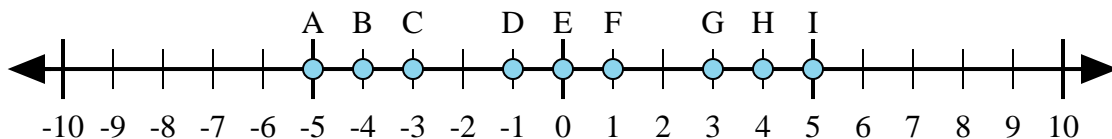
1) $1 + 2 =$

2) $(-1) + (-2) =$

3) $(-2) + 1 =$

4) $2 + (-1) =$

5) $1 + (-2) =$



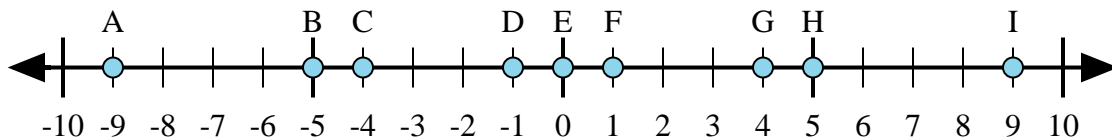
6) $4 + (-1) =$

7) $(-4) + (-1) =$

8) $(-4) + 1 =$

9) $(-1) + 4 =$

10) $1 + (-4) =$



11) $5 + (-4) =$

12) $4 + (-5) =$

13) $(-5) + 4 =$

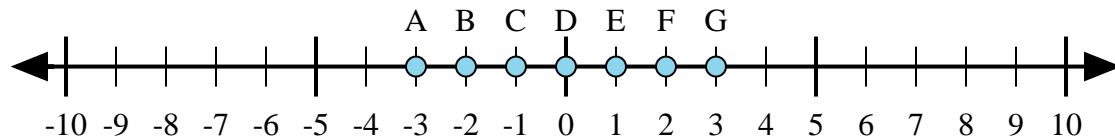
14) $5 + 4 =$

15) $(-4) + 5 =$

1. _____
2. _____
3. _____
4. _____
5. _____
6. _____
7. _____
8. _____
9. _____
10. _____
11. _____
12. _____
13. _____
14. _____
15. _____



Determine which letter in the numberline best represents the answer to each problem.



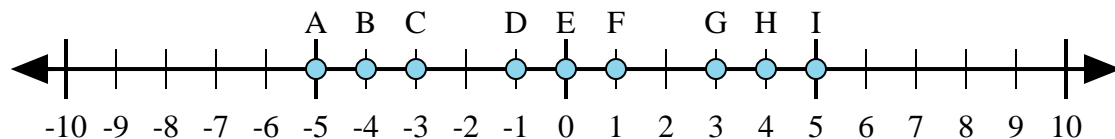
1) $1 + 2 =$

2) $(-1) + (-2) =$

3) $(-2) + 1 =$

4) $2 + (-1) =$

5) $1 + (-2) =$



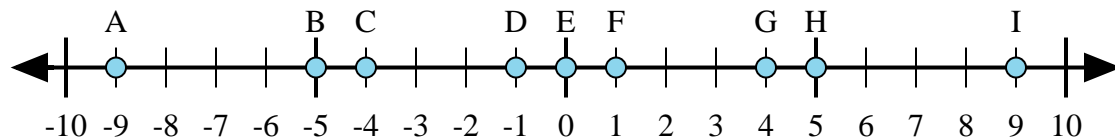
6) $4 + (-1) =$

7) $(-4) + (-1) =$

8) $(-4) + 1 =$

9) $(-1) + 4 =$

10) $1 + (-4) =$



11) $5 + (-4) =$

12) $4 + (-5) =$

13) $(-5) + 4 =$

14) $5 + 4 =$

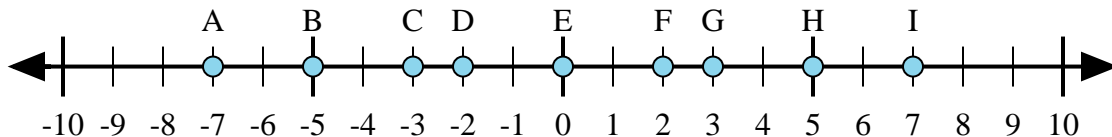
15) $(-4) + 5 =$

Answers1. **G** 2. **A** 3. **C** 4. **E** 5. **C** 6. **G** 7. **A** 8. **C** 9. **G** 10. **C** 11. **F** 12. **D** 13. **D** 14. **I** 15. **F**



Determine which letter in the numberline best represents the answer to each problem.

Answers



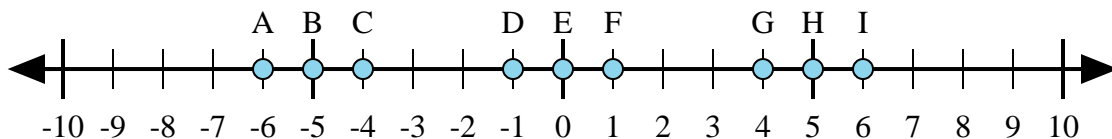
1) $2 + (-5) =$

2) $(-5) + (-2) =$

3) $(-5) + 2 =$

4) $5 + (-2) =$

5) $(-2) + 5 =$



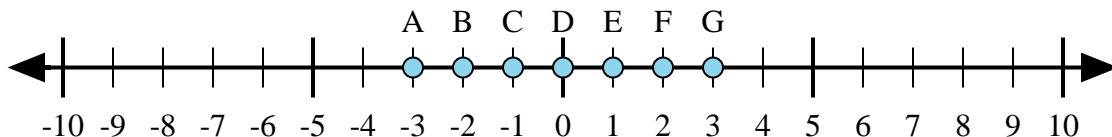
6) $1 + 5 =$

7) $(-1) + 5 =$

8) $5 + (-1) =$

9) $(-1) + (-5) =$

10) $(-5) + 1 =$



11) $(-1) + 2 =$

12) $1 + (-2) =$

13) $2 + 1 =$

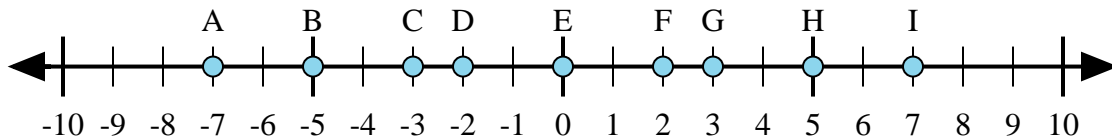
14) $2 + (-1) =$

15) $(-2) + 1 =$

1. _____
2. _____
3. _____
4. _____
5. _____
6. _____
7. _____
8. _____
9. _____
10. _____
11. _____
12. _____
13. _____
14. _____
15. _____



Determine which letter in the numberline best represents the answer to each problem.



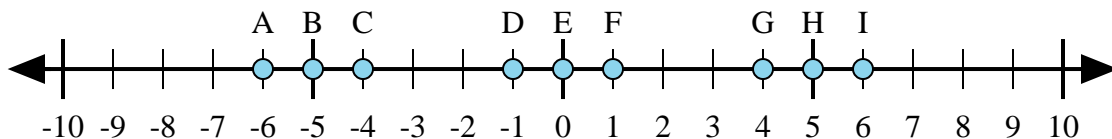
1) $2 + (-5) =$

2) $(-5) + (-2) =$

3) $(-5) + 2 =$

4) $5 + (-2) =$

5) $(-2) + 5 =$



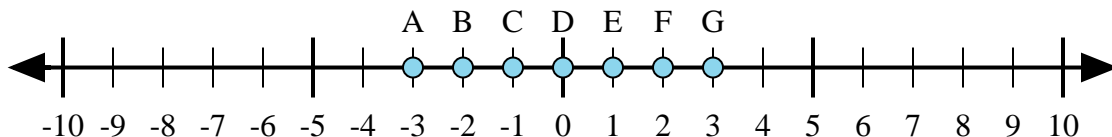
6) $1 + 5 =$

7) $(-1) + 5 =$

8) $5 + (-1) =$

9) $(-1) + (-5) =$

10) $(-5) + 1 =$



11) $(-1) + 2 =$

12) $1 + (-2) =$

13) $2 + 1 =$

14) $2 + (-1) =$

15) $(-2) + 1 =$

Answers

1. C

2. A

3. C

4. G

5. G

6. I

7. G

8. G

9. A

10. C

11. E

12. C

13. G

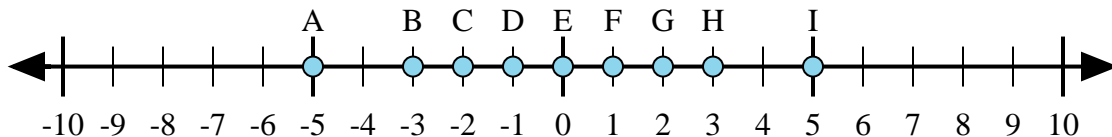
14. E

15. C



Determine which letter in the numberline best represents the answer to each problem.

Answers



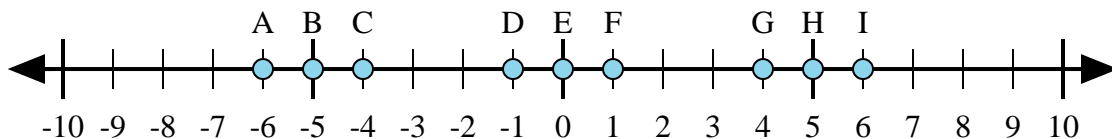
1) $2 + (-3) =$

2) $(-3) + (-2) =$

3) $3 + (-2) =$

4) $3 + 2 =$

5) $(-2) + 3 =$



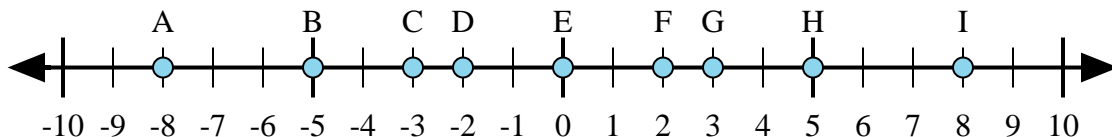
6) $(-1) + 5 =$

7) $(-5) + (-1) =$

8) $5 + (-1) =$

9) $1 + (-5) =$

10) $5 + 1 =$



11) $5 + 3 =$

12) $(-5) + 3 =$

13) $5 + (-3) =$

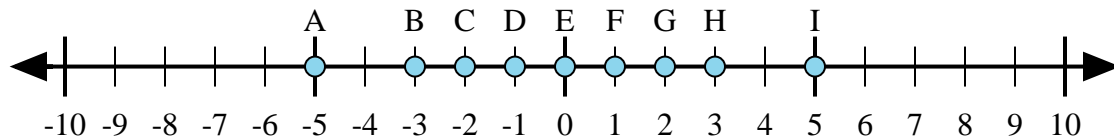
14) $3 + (-5) =$

15) $(-3) + 5 =$

1. _____
2. _____
3. _____
4. _____
5. _____
6. _____
7. _____
8. _____
9. _____
10. _____
11. _____
12. _____
13. _____
14. _____
15. _____



Determine which letter in the numberline best represents the answer to each problem.



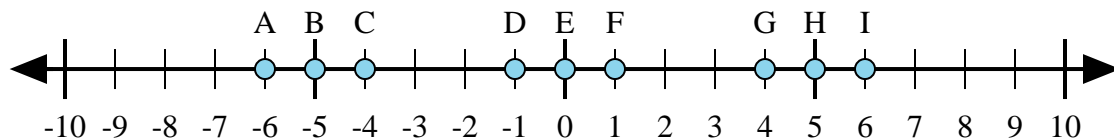
1) $2 + (-3) =$

2) $(-3) + (-2) =$

3) $3 + (-2) =$

4) $3 + 2 =$

5) $(-2) + 3 =$



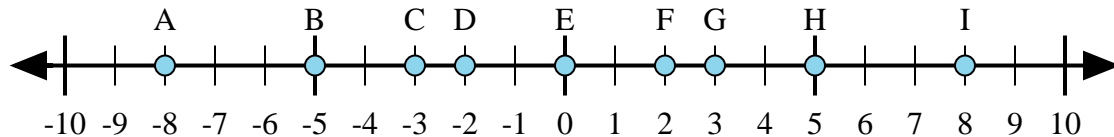
6) $(-1) + 5 =$

7) $(-5) + (-1) =$

8) $5 + (-1) =$

9) $1 + (-5) =$

10) $5 + 1 =$



11) $5 + 3 =$

12) $(-5) + 3 =$

13) $5 + (-3) =$

14) $3 + (-5) =$

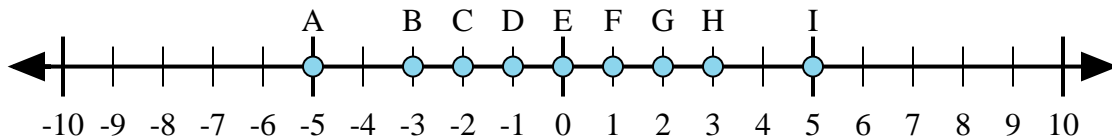
15) $(-3) + 5 =$

Answers1. **D**2. **A**3. **F**4. **I**5. **F**6. **G**7. **A**8. **G**9. **C**10. **I**11. **I**12. **D**13. **F**14. **D**15. **F**



Determine which letter in the numberline best represents the answer to each problem.

Answers



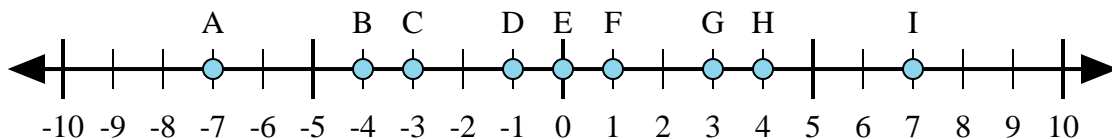
1) $3 + (-2) =$

2) $(-2) + 3 =$

3) $2 + 3 =$

4) $(-2) + (-3) =$

5) $2 + (-3) =$



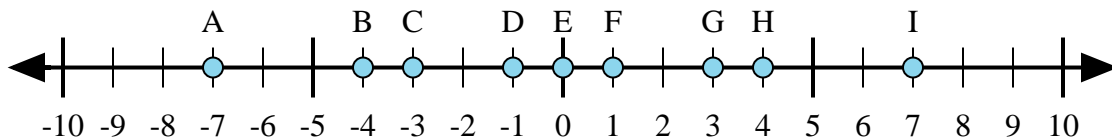
6) $4 + (-3) =$

7) $3 + 4 =$

8) $(-4) + 3 =$

9) $(-3) + 4 =$

10) $(-3) + (-4) =$



11) $4 + 3 =$

12) $4 + (-3) =$

13) $(-4) + 3 =$

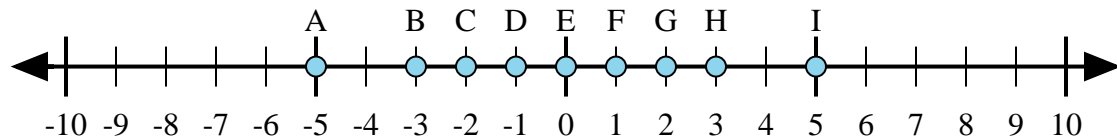
14) $(-3) + 4 =$

15) $(-4) + (-3) =$

1. _____
2. _____
3. _____
4. _____
5. _____
6. _____
7. _____
8. _____
9. _____
10. _____
11. _____
12. _____
13. _____
14. _____
15. _____



Determine which letter in the numberline best represents the answer to each problem.



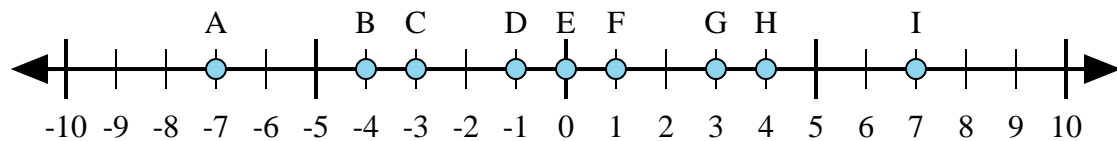
1) $3 + (-2) =$

2) $(-2) + 3 =$

3) $2 + 3 =$

4) $(-2) + (-3) =$

5) $2 + (-3) =$



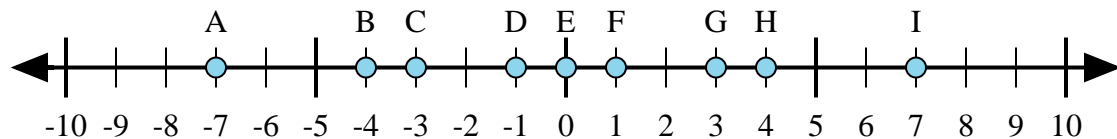
6) $4 + (-3) =$

7) $3 + 4 =$

8) $(-4) + 3 =$

9) $(-3) + 4 =$

10) $(-3) + (-4) =$



11) $4 + 3 =$

12) $4 + (-3) =$

13) $(-4) + 3 =$

14) $(-3) + 4 =$

15) $(-4) + (-3) =$

Answers

1. F

2. F

3. I

4. A

5. D

6. F

7. I

8. D

9. F

10. A

11. I

12. F

13. D

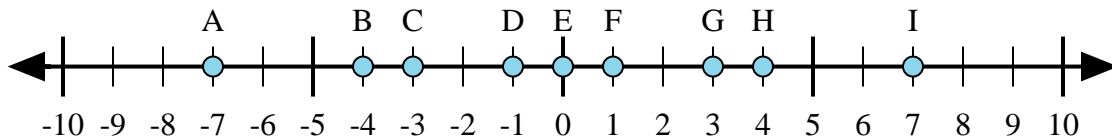
14. F

15. A



Determine which letter in the numberline best represents the answer to each problem.

Answers



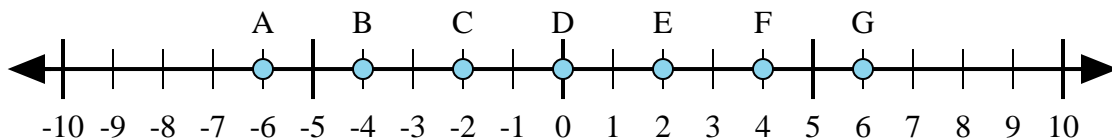
1) $4 + (-3) =$

2) $3 + (-4) =$

3) $(-3) + (-4) =$

4) $(-4) + 3 =$

5) $3 + 4 =$



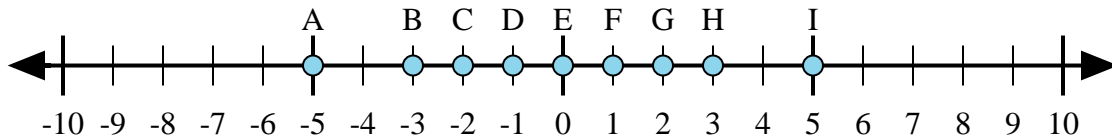
6) $(-4) + 2 =$

7) $(-2) + 4 =$

8) $4 + 2 =$

9) $(-4) + (-2) =$

10) $2 + (-4) =$



11) $(-3) + 2 =$

12) $2 + (-3) =$

13) $(-2) + 3 =$

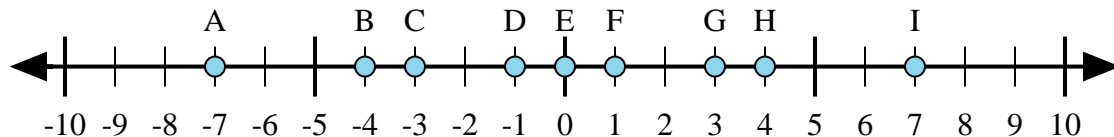
14) $(-3) + (-2) =$

15) $3 + (-2) =$

1. _____
2. _____
3. _____
4. _____
5. _____
6. _____
7. _____
8. _____
9. _____
10. _____
11. _____
12. _____
13. _____
14. _____
15. _____



Determine which letter in the numberline best represents the answer to each problem.



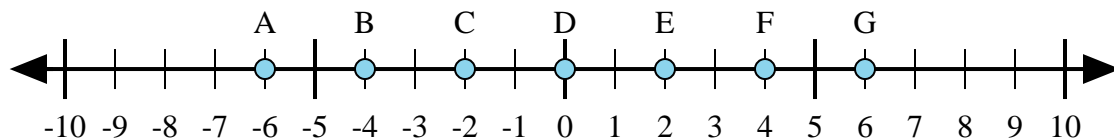
1) $4 + (-3) =$

2) $3 + (-4) =$

3) $(-3) + (-4) =$

4) $(-4) + 3 =$

5) $3 + 4 =$



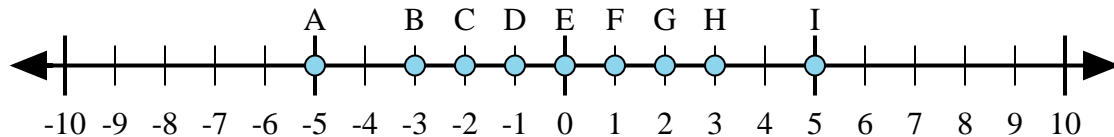
6) $(-4) + 2 =$

7) $(-2) + 4 =$

8) $4 + 2 =$

9) $(-4) + (-2) =$

10) $2 + (-4) =$



11) $(-3) + 2 =$

12) $2 + (-3) =$

13) $(-2) + 3 =$

14) $(-3) + (-2) =$

15) $3 + (-2) =$

Answers

1. F

2. D

3. A

4. D

5. I

6. C

7. E

8. G

9. A

10. C

11. D

12. D

13. F

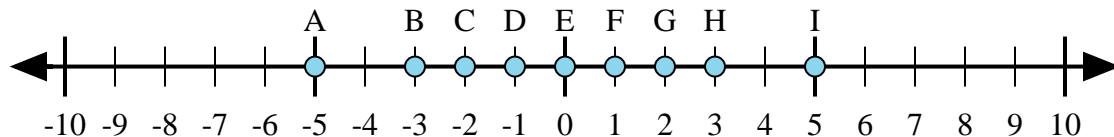
14. A

15. F



Determine which letter in the numberline best represents the answer to each problem.

Answers



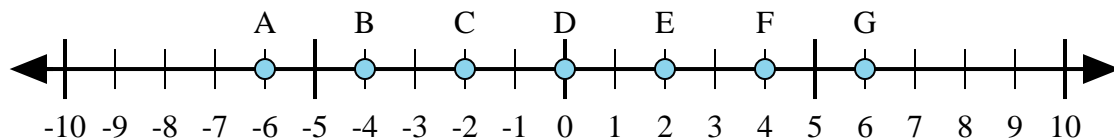
1) $2 + 3 =$

2) $2 + (-3) =$

3) $3 + (-2) =$

4) $(-2) + 3 =$

5) $(-3) + 2 =$



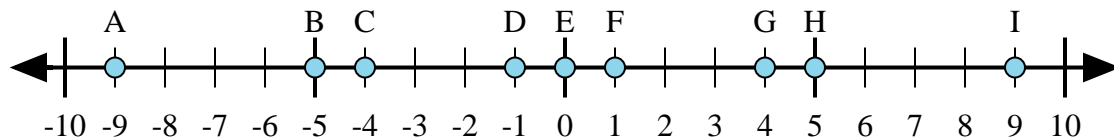
6) $4 + (-2) =$

7) $2 + 4 =$

8) $(-2) + 4 =$

9) $(-4) + 2 =$

10) $(-2) + (-4) =$



11) $5 + (-4) =$

12) $4 + (-5) =$

13) $4 + 5 =$

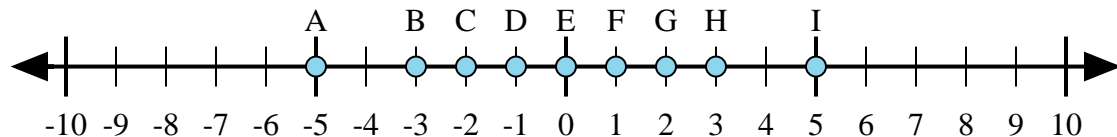
14) $(-5) + 4 =$

15) $(-4) + 5 =$

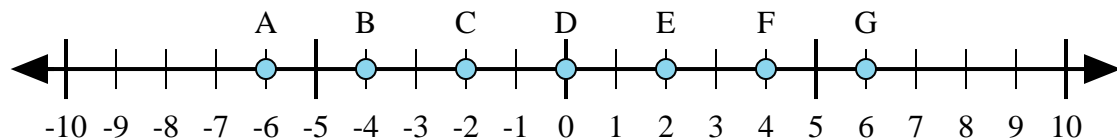
1. _____
2. _____
3. _____
4. _____
5. _____
6. _____
7. _____
8. _____
9. _____
10. _____
11. _____
12. _____
13. _____
14. _____
15. _____



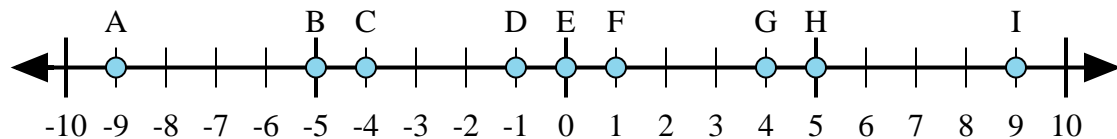
Determine which letter in the numberline best represents the answer to each problem.



- 1) $2 + 3 =$
- 2) $2 + (-3) =$
- 3) $3 + (-2) =$
- 4) $(-2) + 3 =$
- 5) $(-3) + 2 =$



- 6) $4 + (-2) =$
- 7) $2 + 4 =$
- 8) $(-2) + 4 =$
- 9) $(-4) + 2 =$
- 10) $(-2) + (-4) =$



- 11) $5 + (-4) =$
- 12) $4 + (-5) =$
- 13) $4 + 5 =$
- 14) $(-5) + 4 =$
- 15) $(-4) + 5 =$

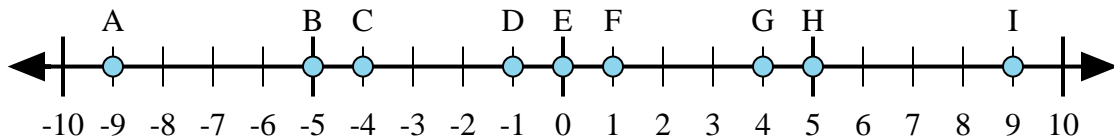
Answers

1. I
2. D
3. F
4. F
5. D
6. E
7. G
8. E
9. C
10. A
11. F
12. D
13. I
14. D
15. F



Determine which letter in the numberline best represents the answer to each problem.

Answers



1) $(-5) + 4 =$

2) $(-4) + (-5) =$

3) $4 + 5 =$

4) $(-4) + 5 =$

5) $5 + (-4) =$

1. _____

2. _____

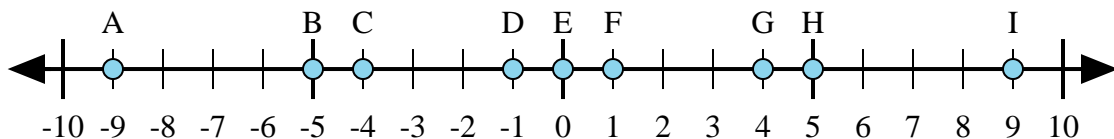
3. _____

4. _____

5. _____

6. _____

7. _____



6) $(-5) + (-4) =$

7) $5 + (-4) =$

8) $4 + (-5) =$

9) $(-5) + 4 =$

10) $5 + 4 =$

8. _____

9. _____

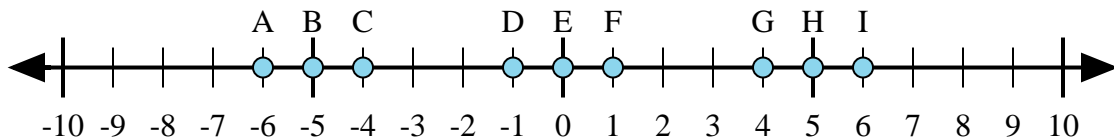
10. _____

11. _____

12. _____

13. _____

14. _____



11) $(-5) + (-1) =$

12) $(-5) + 1 =$

13) $5 + 1 =$

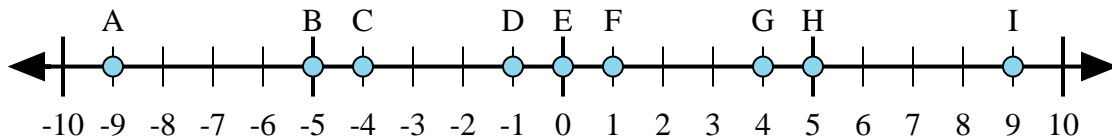
14) $1 + (-5) =$

15) $(-1) + 5 =$

15. _____



Determine which letter in the numberline best represents the answer to each problem.



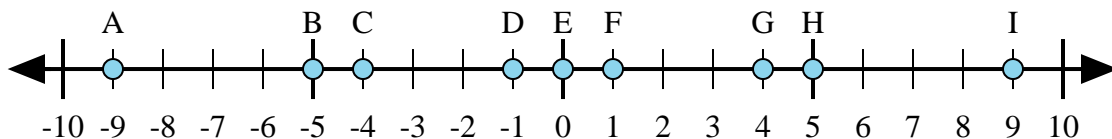
1) $(-5) + 4 =$

2) $(-4) + (-5) =$

3) $4 + 5 =$

4) $(-4) + 5 =$

5) $5 + (-4) =$



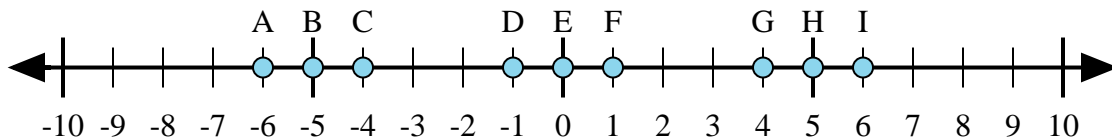
6) $(-5) + (-4) =$

7) $5 + (-4) =$

8) $4 + (-5) =$

9) $(-5) + 4 =$

10) $5 + 4 =$



11) $(-5) + (-1) =$

12) $(-5) + 1 =$

13) $5 + 1 =$

14) $1 + (-5) =$

15) $(-1) + 5 =$

Answers

1. D

2. A

3. I

4. F

5. F

6. A

7. F

8. D

9. D

10. I

11. A

12. C

13. I

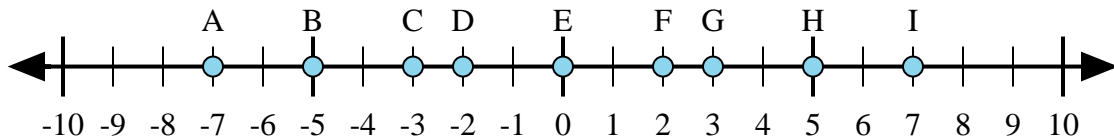
14. C

15. G



Determine which letter in the numberline best represents the answer to each problem.

Answers



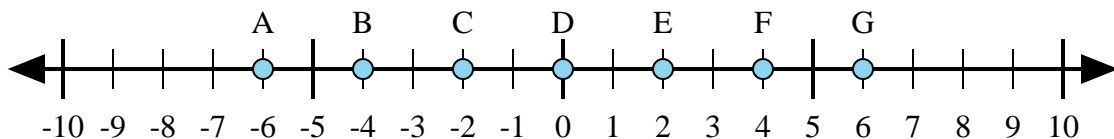
1) $(-5) + 2 =$

2) $(-2) + (-5) =$

3) $2 + 5 =$

4) $(-2) + 5 =$

5) $2 + (-5) =$



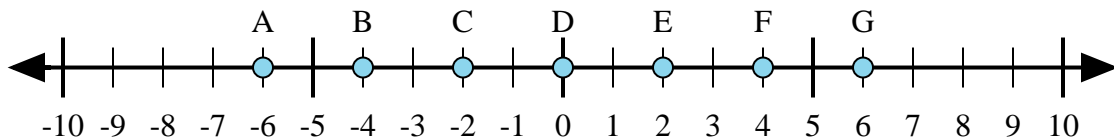
6) $(-2) + 4 =$

7) $(-4) + 2 =$

8) $(-2) + (-4) =$

9) $2 + (-4) =$

10) $2 + 4 =$



11) $4 + 2 =$

12) $(-4) + (-2) =$

13) $(-2) + 4 =$

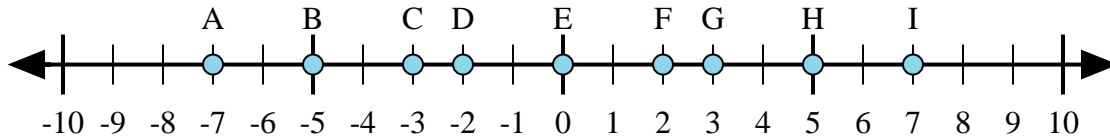
14) $(-4) + 2 =$

15) $2 + (-4) =$

1. _____
2. _____
3. _____
4. _____
5. _____
6. _____
7. _____
8. _____
9. _____
10. _____
11. _____
12. _____
13. _____
14. _____
15. _____



Determine which letter in the numberline best represents the answer to each problem.



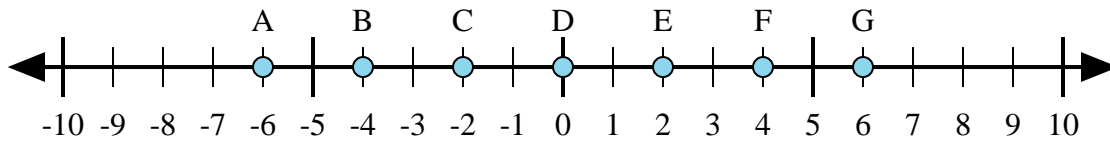
1) $(-5) + 2 =$

2) $(-2) + (-5) =$

3) $2 + 5 =$

4) $(-2) + 5 =$

5) $2 + (-5) =$



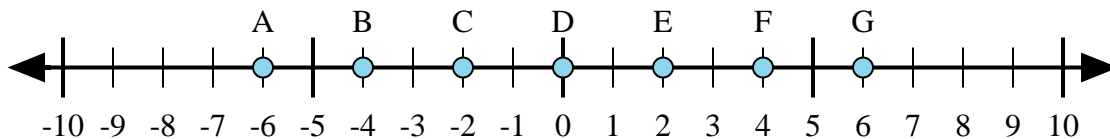
6) $(-2) + 4 =$

7) $(-4) + 2 =$

8) $(-2) + (-4) =$

9) $2 + (-4) =$

10) $2 + 4 =$



11) $4 + 2 =$

12) $(-4) + (-2) =$

13) $(-2) + 4 =$

14) $(-4) + 2 =$

15) $2 + (-4) =$

Answers

1. C

2. A

3. I

4. G

5. C

6. E

7. C

8. A

9. C

10. G

11. G

12. A

13. E

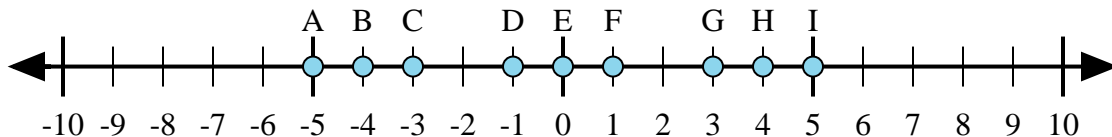
14. C

15. C



Determine which letter in the numberline best represents the answer to each problem.

Answers



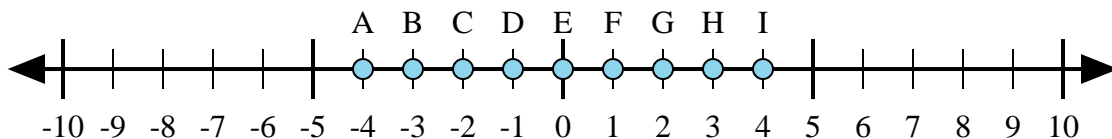
1) $4 + (-1) =$

2) $4 + 1 =$

3) $1 + (-4) =$

4) $(-4) + (-1) =$

5) $(-4) + 1 =$



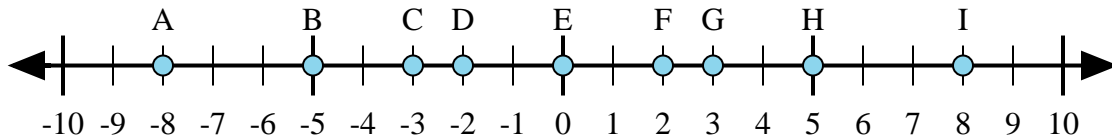
6) $(-3) + (-1) =$

7) $(-3) + 1 =$

8) $3 + 1 =$

9) $1 + (-3) =$

10) $(-1) + 3 =$



11) $3 + (-5) =$

12) $(-5) + 3 =$

13) $5 + 3 =$

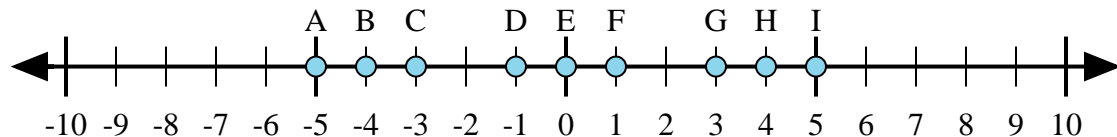
14) $(-3) + 5 =$

15) $(-5) + (-3) =$

1. _____
2. _____
3. _____
4. _____
5. _____
6. _____
7. _____
8. _____
9. _____
10. _____
11. _____
12. _____
13. _____
14. _____
15. _____



Determine which letter in the numberline best represents the answer to each problem.



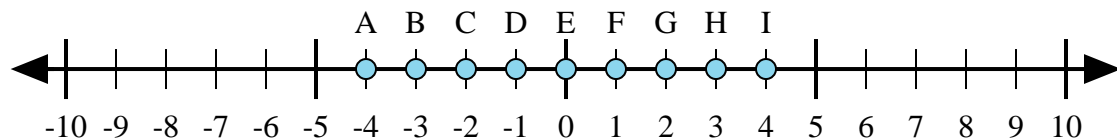
1) $4 + (-1) =$

2) $4 + 1 =$

3) $1 + (-4) =$

4) $(-4) + (-1) =$

5) $(-4) + 1 =$



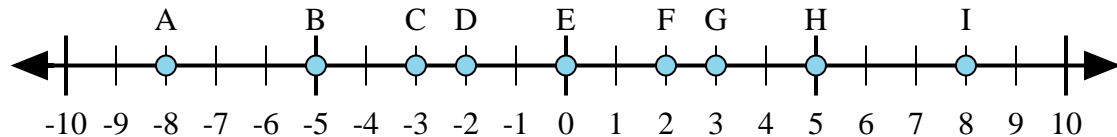
6) $(-3) + (-1) =$

7) $(-3) + 1 =$

8) $3 + 1 =$

9) $1 + (-3) =$

10) $(-1) + 3 =$



11) $3 + (-5) =$

12) $(-5) + 3 =$

13) $5 + 3 =$

14) $(-3) + 5 =$

15) $(-5) + (-3) =$

Answers

1. **G**

2. **I**

3. **C**

4. **A**

5. **C**

6. **A**

7. **C**

8. **I**

9. **C**

10. **G**

11. **D**

12. **D**

13. **I**

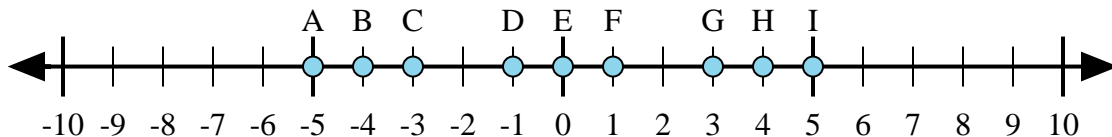
14. **F**

15. **A**



Determine which letter in the numberline best represents the answer to each problem.

Answers



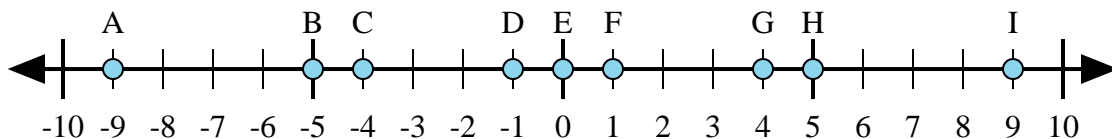
1) $4 + 1 =$

2) $4 + (-1) =$

3) $1 + (-4) =$

4) $(-4) + (-1) =$

5) $(-1) + 4 =$



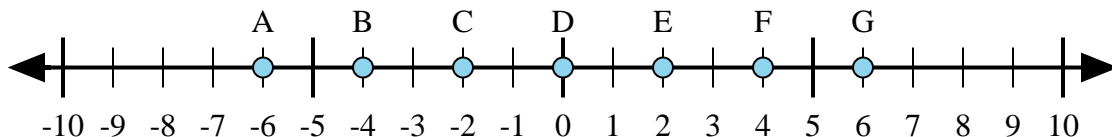
6) $(-4) + 5 =$

7) $4 + (-5) =$

8) $4 + 5 =$

9) $(-4) + (-5) =$

10) $(-5) + 4 =$



11) $(-4) + (-2) =$

12) $2 + (-4) =$

13) $4 + 2 =$

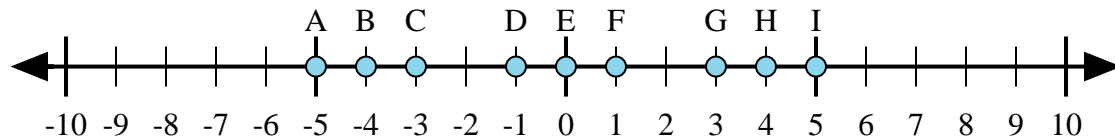
14) $(-2) + 4 =$

15) $4 + (-2) =$

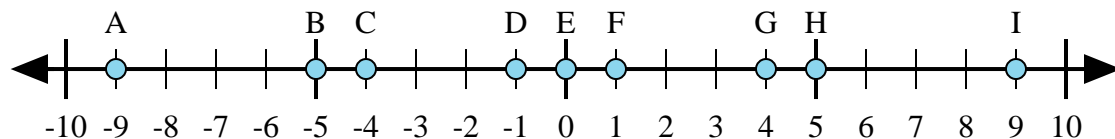
1. _____
2. _____
3. _____
4. _____
5. _____
6. _____
7. _____
8. _____
9. _____
10. _____
11. _____
12. _____
13. _____
14. _____
15. _____



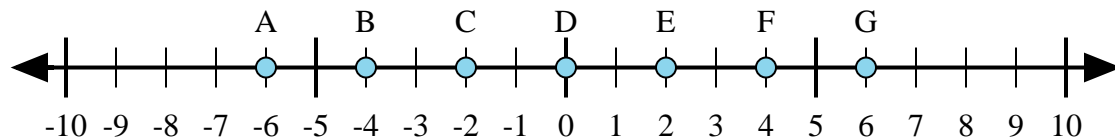
Determine which letter in the numberline best represents the answer to each problem.



- 1) $4 + 1 =$
- 2) $4 + (-1) =$
- 3) $1 + (-4) =$
- 4) $(-4) + (-1) =$
- 5) $(-1) + 4 =$



- 6) $(-4) + 5 =$
- 7) $4 + (-5) =$
- 8) $4 + 5 =$
- 9) $(-4) + (-5) =$
- 10) $(-5) + 4 =$



- 11) $(-4) + (-2) =$
- 12) $2 + (-4) =$
- 13) $4 + 2 =$
- 14) $(-2) + 4 =$
- 15) $4 + (-2) =$

Answers

1. I
2. G
3. C
4. A
5. G
6. F
7. D
8. I
9. A
10. D
11. A
12. C
13. G
14. E
15. E