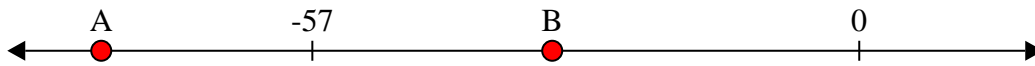




Solve each problem.


Answers

- 1) Which letter best shows -32?



1. _____


- 2) Which letter best shows -114?



2. _____

3. _____


- 3) Which letter best shows -117?



4. _____

5. _____

- 4) Which letter best shows -111?



6. _____

7. _____

- 5) Which letter best shows -33?



8. _____

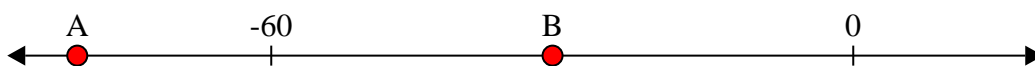
9. _____

- 6) Which letter best shows -29?




10. _____

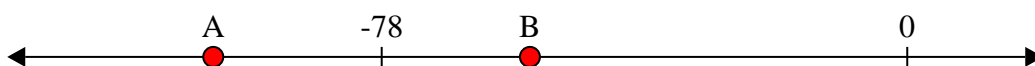
- 7) Which letter best shows -80?




- 8) Which letter best shows -86?



- 9) Which letter best shows -56?



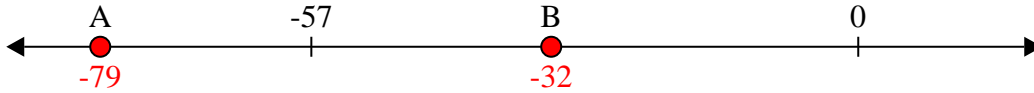
- 10) Which letter best shows -24?



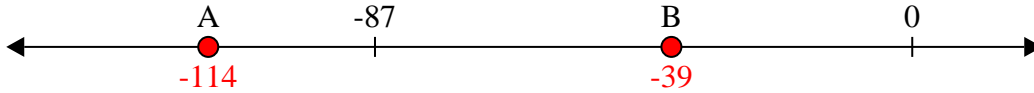


Solve each problem.

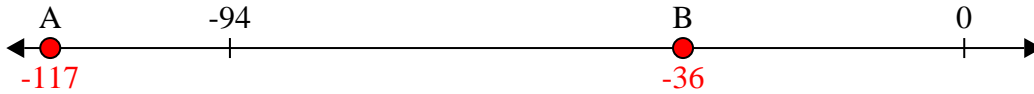
1) Which letter best shows -32?



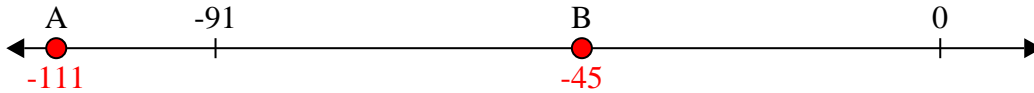
2) Which letter best shows -114?



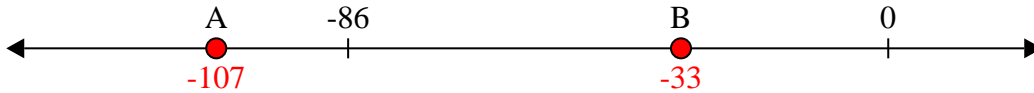
3) Which letter best shows -117?



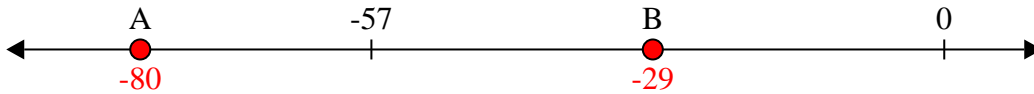
4) Which letter best shows -111?



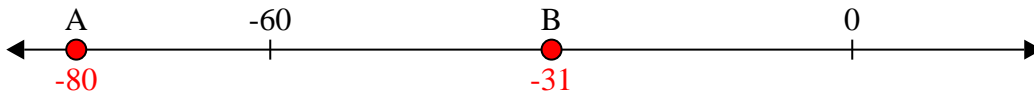
5) Which letter best shows -33?



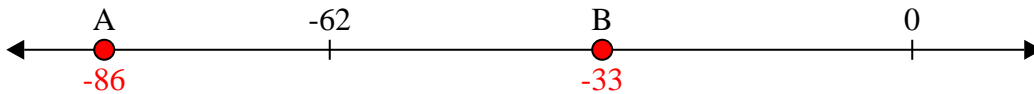
6) Which letter best shows -29?



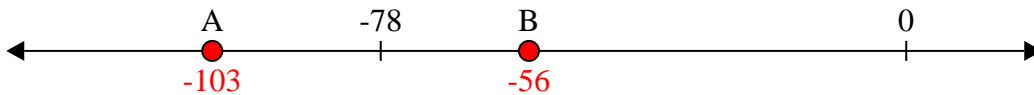
7) Which letter best shows -80?



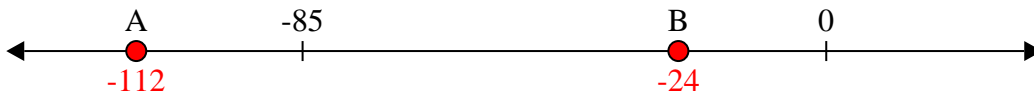
8) Which letter best shows -86?



9) Which letter best shows -56?



10) Which letter best shows -24?



Answers

1. **B**

2. **A**

3. **A**

4. **A**

5. **B**

6. **B**

7. **A**

8. **A**

9. **B**

10. **B**