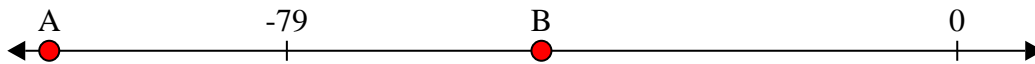




Solve each problem.

Answers

- 1) Which letter best shows -49?




1. _____

- 2) Which letter best shows -40?




2. _____

- 3) Which letter best shows -36?



3. _____

- 4) Which letter best shows -117?



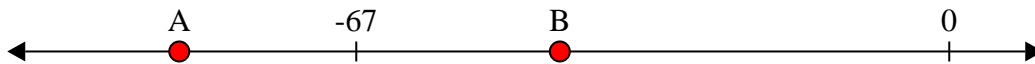
4. _____

- 5) Which letter best shows -13?




5. _____

- 6) Which letter best shows -87?




6. _____

- 7) Which letter best shows -12?




7. _____

- 8) Which letter best shows -26?




8. _____

- 9) Which letter best shows -23?



9. _____

- 10) Which letter best shows -121?

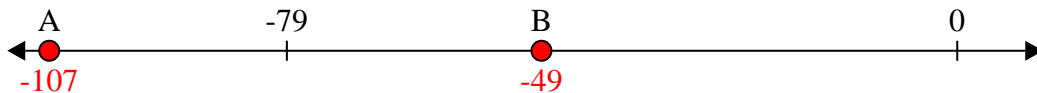


10. _____

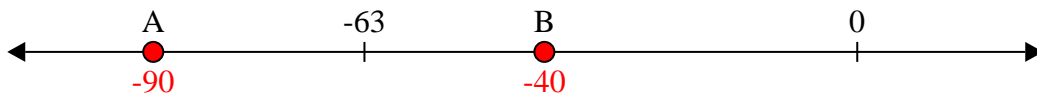


Solve each problem.

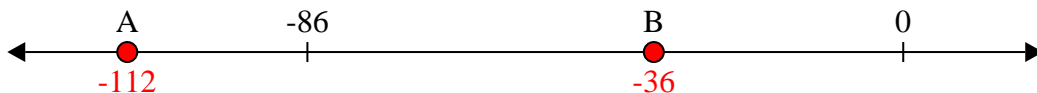
1) Which letter best shows -49?




2) Which letter best shows -40?




3) Which letter best shows -36?



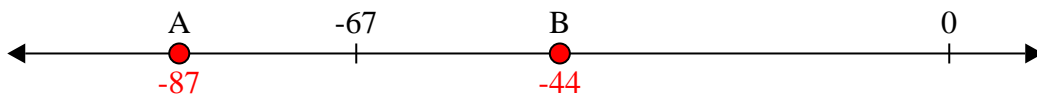
4) Which letter best shows -117?




5) Which letter best shows -13?




6) Which letter best shows -87?




7) Which letter best shows -12?



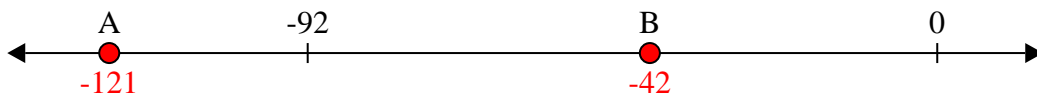
8) Which letter best shows -26?



9) Which letter best shows -23?



10) Which letter best shows -121?



Answers

1. **B**

2. **B**

3. **B**

4. **A**

5. **B**

6. **A**

7. **B**

8. **B**

9. **B**

10. **A**