



Use the numberlines to show each expression and solve.

Ex) Start at 0 and add -2



Ex. $0 + -2 = -2$

1) Start at 0 and add -5



1. _____

2) Start at 0 and add 7



2. _____

3) Start at -6 and add 12



3. _____

4) Start at -2 and add -2



4. _____

5) Start at 2 and add -8



5. _____

6) Start at 3 and add -11



6. _____

7) Start at -7 and add 16



7. _____

8) Start at -9 and add 7



8. _____

9) Start at -8 and add 3



9. _____

10) Start at 5 and add -15



10. _____

11) Start at -8 and add 4



11. _____

12) Start at 5 and add -6



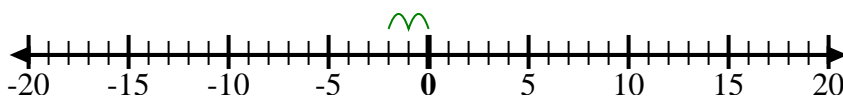
12. _____

Answers



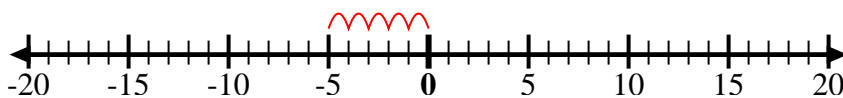
Use the numberlines to show each expression and solve.

Ex) Start at 0 and add -2



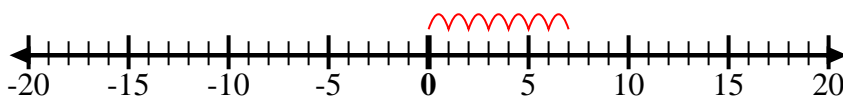
Ex. $0 + -2 = -2$

1) Start at 0 and add -5



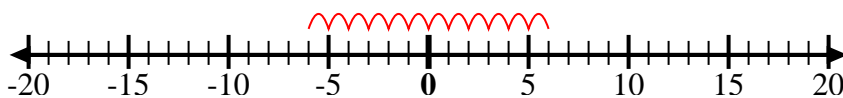
1. $0 + -5 = -5$

2) Start at 0 and add 7



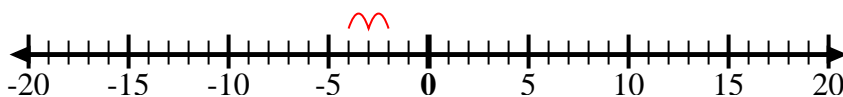
2. $0 + 7 = 7$

3) Start at -6 and add 12



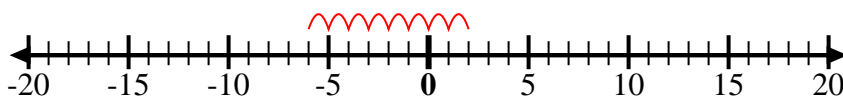
3. $-6 + 12 = 6$

4) Start at -2 and add -2



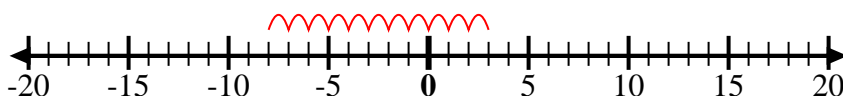
4. $-2 + -2 = -4$

5) Start at 2 and add -8



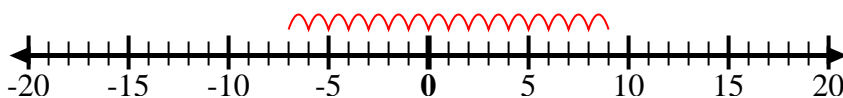
5. $2 + -8 = -6$

6) Start at 3 and add -11



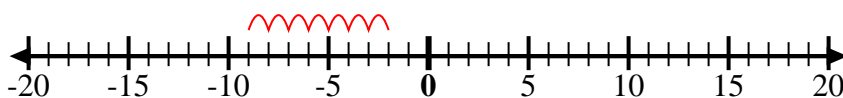
6. $3 + -11 = -8$

7) Start at -7 and add 16



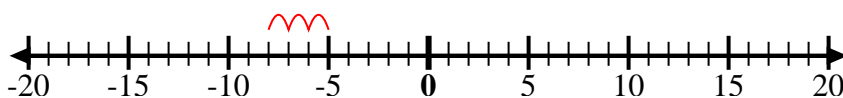
7. $-7 + 16 = 9$

8) Start at -9 and add 7



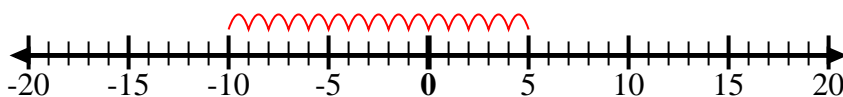
8. $-9 + 7 = -2$

9) Start at -8 and add 3



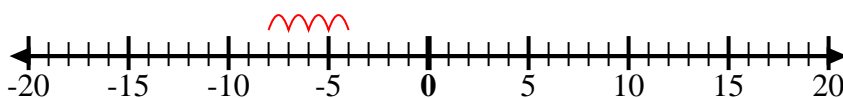
9. $-8 + 3 = -5$

10) Start at 5 and add -15



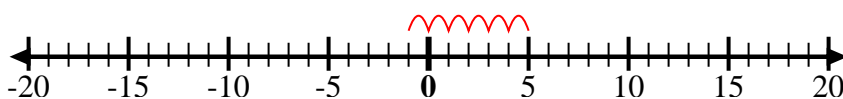
10. $5 + -15 = -10$

11) Start at -8 and add 4



11. $-8 + 4 = -4$

12) Start at 5 and add -6



12. $5 + -6 = -1$

Answers