



Use the numberlines to show each expression and solve.

Ex) Start at 9 and add -4



Ex. $9 + -4 = 5$

1) Start at 5 and add -11



1. _____

2) Start at 2 and add -8



2. _____

3) Start at -5 and add -4



3. _____

4) Start at 0 and add 8



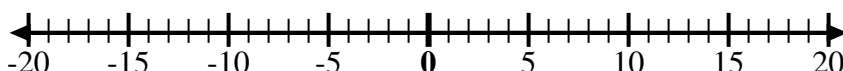
4. _____

5) Start at 5 and add -8



5. _____

6) Start at -7 and add 15



6. _____

7) Start at -9 and add 8



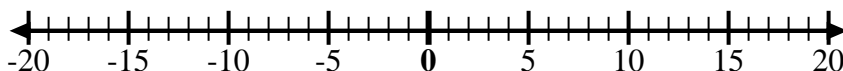
7. _____

8) Start at -2 and add -6



8. _____

9) Start at -5 and add 5



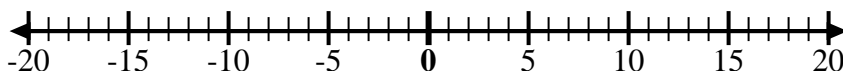
9. _____

10) Start at -1 and add -8



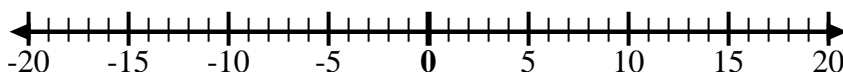
10. _____

11) Start at -1 and add 7



11. _____

12) Start at -10 and add 14



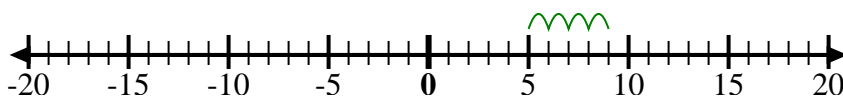
12. _____

Answers



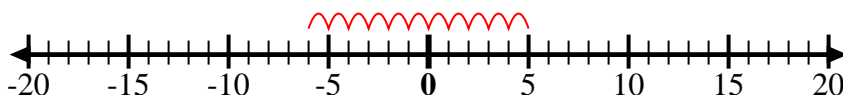
Use the numberlines to show each expression and solve.

Ex) Start at 9 and add -4



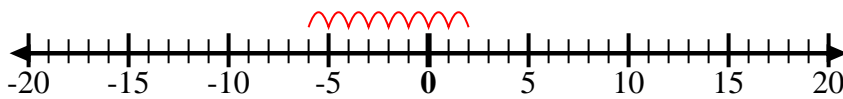
Ex. $9 + -4 = 5$

1) Start at 5 and add -11



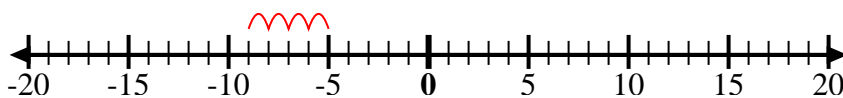
1. $5 + -11 = -6$

2) Start at 2 and add -8



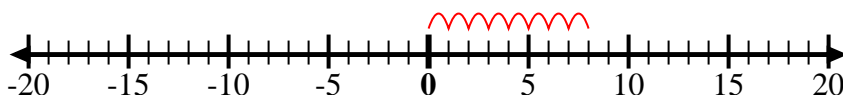
2. $2 + -8 = -6$

3) Start at -5 and add -4



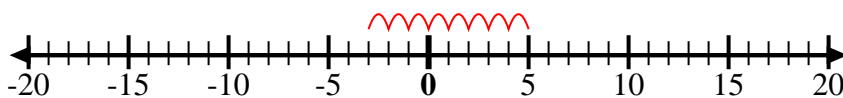
3. $-5 + -4 = -9$

4) Start at 0 and add 8



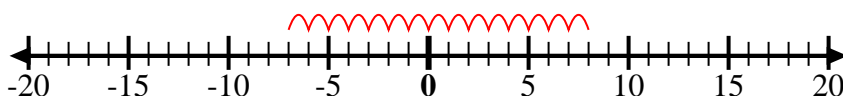
4. $0 + 8 = 8$

5) Start at 5 and add -8



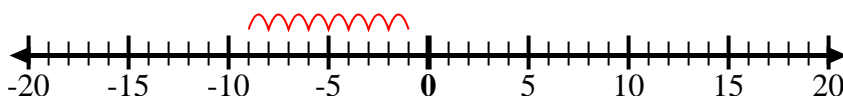
5. $5 + -8 = -3$

6) Start at -7 and add 15



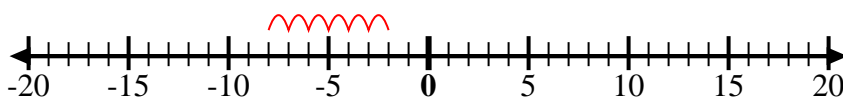
6. $-7 + 15 = 8$

7) Start at -9 and add 8



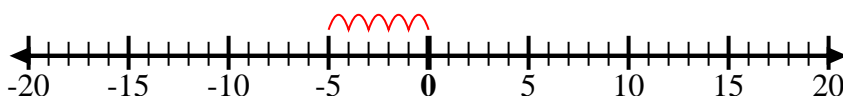
7. $-9 + 8 = -1$

8) Start at -2 and add -6



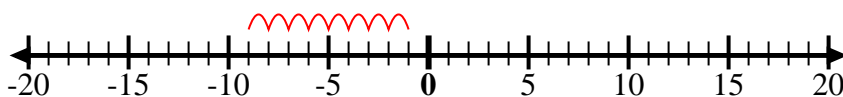
8. $-2 + -6 = -8$

9) Start at -5 and add 5



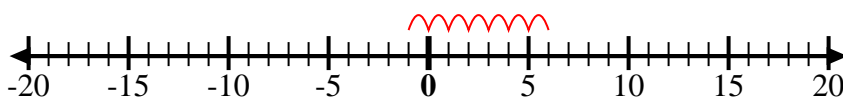
9. $-5 + 5 = 0$

10) Start at -1 and add -8



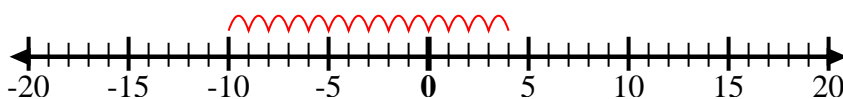
10. $-1 + -8 = -9$

11) Start at -1 and add 7



11. $-1 + 7 = 6$

12) Start at -10 and add 14



12. $-10 + 14 = 4$

Answers