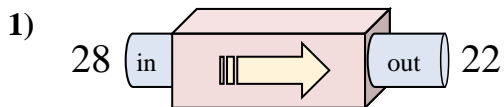


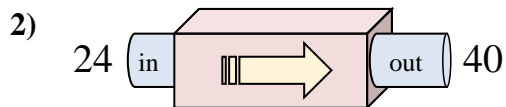


Determine which rule the function machine is using.

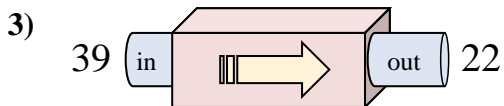
Answers



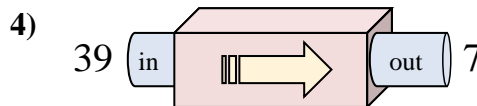
- A. Subtract 5
- B. Subtract 11
- C. Subtract 6
- D. Add 5



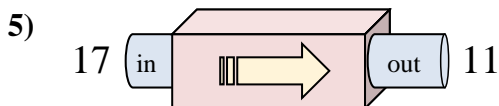
- A. Add 20
- B. Add 17
- C. Subtract 19
- D. Add 16



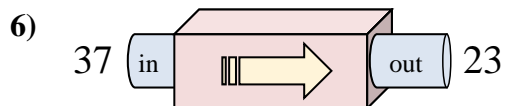
- A. Add 17
- B. Subtract 17
- C. Subtract 20
- D. Subtract 19



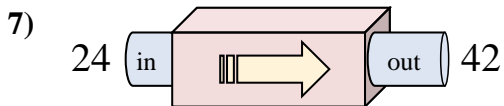
- A. Subtract 30
- B. Subtract 35
- C. Subtract 32
- D. Subtract 34



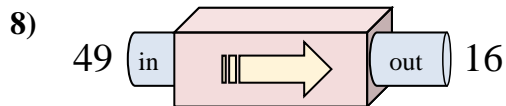
- A. Add 9
- B. Subtract 8
- C. Subtract 6
- D. Subtract 2



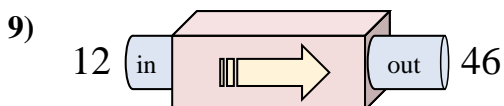
- A. Subtract 12
- B. Add 10
- C. Subtract 14
- D. Subtract 15



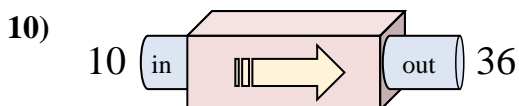
- A. Add 18
- B. Add 15
- C. Add 22
- D. Add 14



- A. Subtract 33
- B. Subtract 32
- C. Add 32
- D. Add 30



- A. Add 37
- B. Add 32
- C. Add 34
- D. Add 38

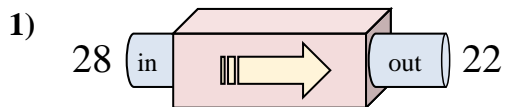


- A. Add 29
- B. Add 26
- C. Subtract 29
- D. Add 30

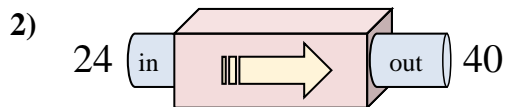
1. _____
2. _____
3. _____
4. _____
5. _____
6. _____
7. _____
8. _____
9. _____
10. _____



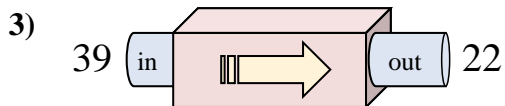
Determine which rule the function machine is using.



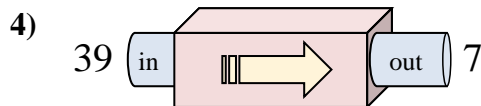
- A. Subtract 5
- B. Subtract 11
- C. Subtract 6
- D. Add 5



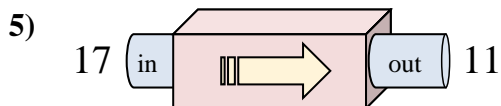
- A. Add 20
- B. Add 17
- C. Subtract 19
- D. Add 16



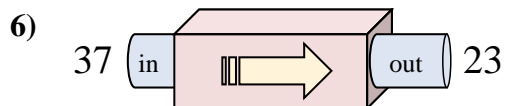
- A. Add 17
- B. Subtract 17
- C. Subtract 20
- D. Subtract 19



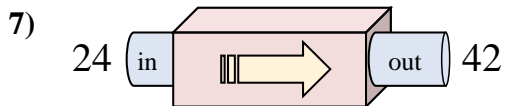
- A. Subtract 30
- B. Subtract 35
- C. Subtract 32
- D. Subtract 34



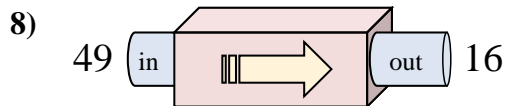
- A. Add 9
- B. Subtract 8
- C. Subtract 6
- D. Subtract 2



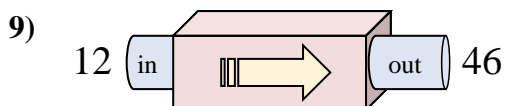
- A. Subtract 12
- B. Add 10
- C. Subtract 14
- D. Subtract 15



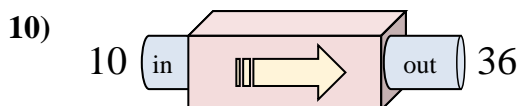
- A. Add 18
- B. Add 15
- C. Add 22
- D. Add 14



- A. Subtract 33
- B. Subtract 32
- C. Add 32
- D. Add 30



- A. Add 37
- B. Add 32
- C. Add 34
- D. Add 38



- A. Add 29
- B. Add 26
- C. Subtract 29
- D. Add 30

Answers1. **C**2. **D**3. **B**4. **C**5. **C**6. **C**7. **A**8. **A**9. **C**10. **B**