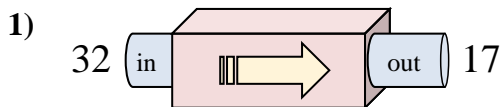


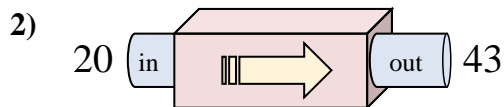


Determine which rule the function machine is using.

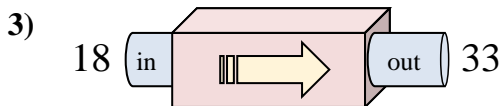
Answers



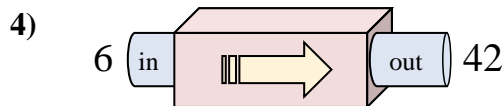
- A. Subtract 20
- B. Subtract 14
- C. Add 12
- D. Subtract 15



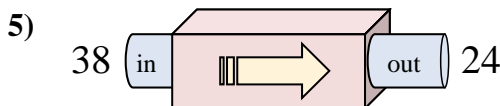
- A. Add 24
- B. Add 21
- C. Add 20
- D. Add 23



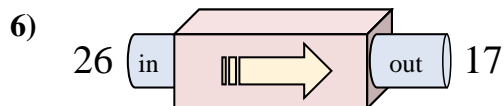
- A. Add 15
- B. Subtract 19
- C. Add 17
- D. Add 10



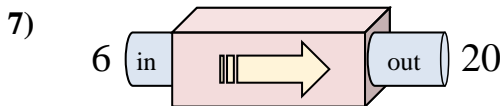
- A. Add 31
- B. Subtract 31
- C. Add 36
- D. Subtract 40



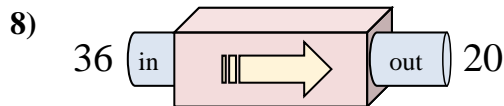
- A. Subtract 12
- B. Subtract 14
- C. Subtract 13
- D. Add 11



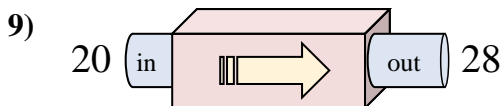
- A. Add 6
- B. Subtract 8
- C. Subtract 9
- D. Subtract 4



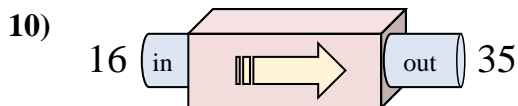
- A. Subtract 13
- B. Subtract 14
- C. Add 18
- D. Add 14



- A. Subtract 16
- B. Subtract 11
- C. Add 16
- D. Subtract 13



- A. Add 5
- B. Add 8
- C. Subtract 11
- D. Add 7

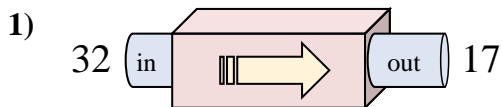


- A. Add 24
- B. Add 19
- C. Subtract 16
- D. Subtract 24

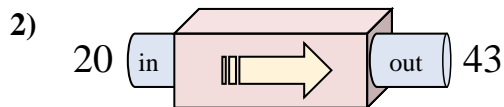
1. _____
2. _____
3. _____
4. _____
5. _____
6. _____
7. _____
8. _____
9. _____
10. _____



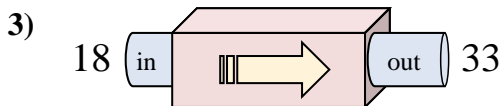
Determine which rule the function machine is using.



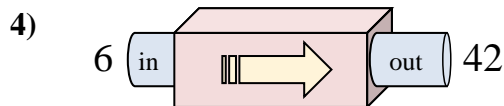
- A. Subtract 20
- B. Subtract 14
- C. Add 12
- D. Subtract 15



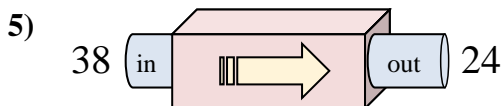
- A. Add 24
- B. Add 21
- C. Add 20
- D. Add 23



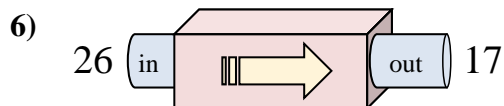
- A. Add 15
- B. Subtract 19
- C. Add 17
- D. Add 10



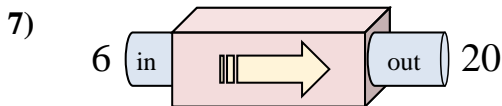
- A. Add 31
- B. Subtract 31
- C. Add 36
- D. Subtract 40



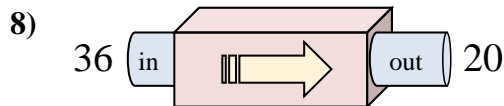
- A. Subtract 12
- B. Subtract 14
- C. Subtract 13
- D. Add 11



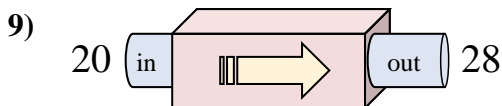
- A. Add 6
- B. Subtract 8
- C. Subtract 9
- D. Subtract 4



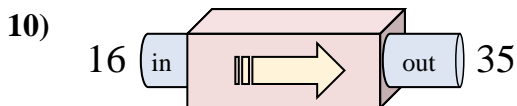
- A. Subtract 13
- B. Subtract 14
- C. Add 18
- D. Add 14



- A. Subtract 16
- B. Subtract 11
- C. Add 16
- D. Subtract 13



- A. Add 5
- B. Add 8
- C. Subtract 11
- D. Add 7



- A. Add 24
- B. Add 19
- C. Subtract 16
- D. Subtract 24

Answers

- 1. **D**
- 2. **D**
- 3. **A**
- 4. **C**
- 5. **B**
- 6. **C**
- 7. **D**
- 8. **A**
- 9. **B**
- 10. **B**