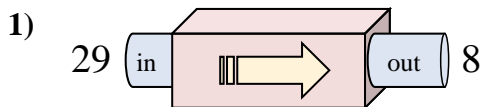


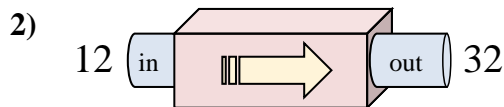


Determine which rule the function machine is using.

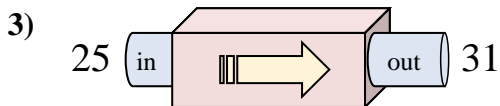
Answers



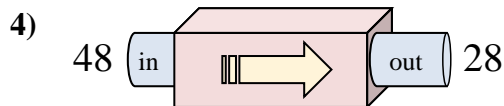
- A. Subtract 21
- B. Subtract 22
- C. Subtract 26
- D. Subtract 18



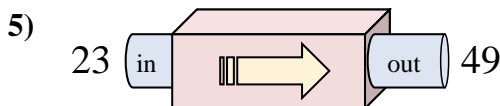
- A. Add 15
- B. Add 16
- C. Add 17
- D. Add 20



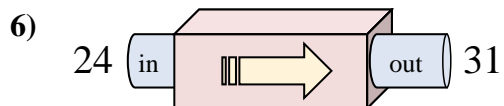
- A. Add 11
- B. Subtract 7
- C. Add 6
- D. Subtract 4



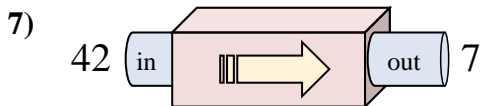
- A. Subtract 23
- B. Subtract 20
- C. Subtract 21
- D. Subtract 15



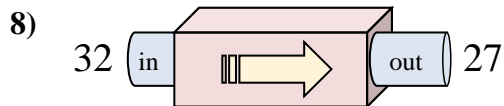
- A. Add 31
- B. Subtract 21
- C. Add 28
- D. Add 26



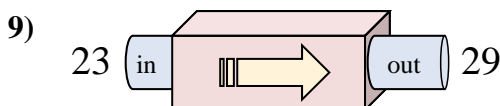
- A. Subtract 5
- B. Add 8
- C. Subtract 11
- D. Add 7



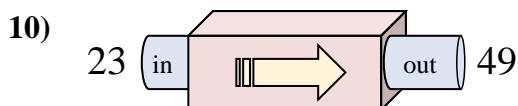
- A. Add 37
- B. Subtract 35
- C. Subtract 32
- D. Add 38



- A. Add 4
- B. Subtract 5
- C. Subtract 8
- D. Subtract 6



- A. Add 10
- B. Add 11
- C. Add 6
- D. Subtract 9

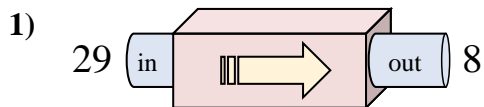


- A. Add 31
- B. Add 29
- C. Add 26
- D. Subtract 21

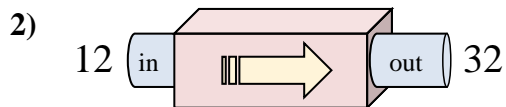
1. _____
2. _____
3. _____
4. _____
5. _____
6. _____
7. _____
8. _____
9. _____
10. _____



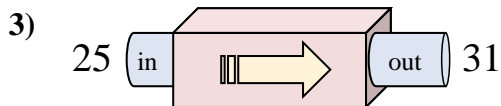
Determine which rule the function machine is using.



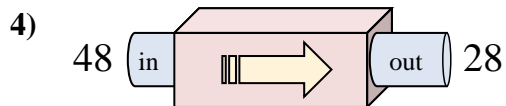
- A. Subtract 21
- B. Subtract 22
- C. Subtract 26
- D. Subtract 18



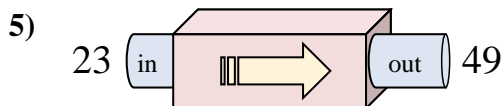
- A. Add 15
- B. Add 16
- C. Add 17
- D. Add 20



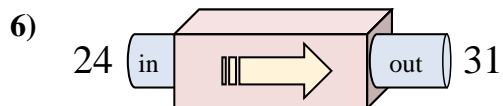
- A. Add 11
- B. Subtract 7
- C. Add 6
- D. Subtract 4



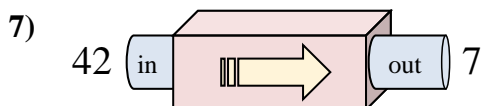
- A. Subtract 23
- B. Subtract 20
- C. Subtract 21
- D. Subtract 15



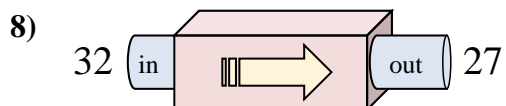
- A. Add 31
- B. Subtract 21
- C. Add 28
- D. Add 26



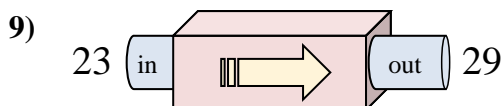
- A. Subtract 5
- B. Add 8
- C. Subtract 11
- D. Add 7



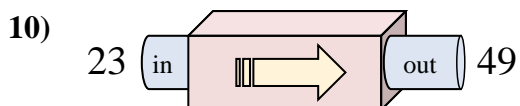
- A. Add 37
- B. Subtract 35
- C. Subtract 32
- D. Add 38



- A. Add 4
- B. Subtract 5
- C. Subtract 8
- D. Subtract 6



- A. Add 10
- B. Add 11
- C. Add 6
- D. Subtract 9



- A. Add 31
- B. Add 29
- C. Add 26
- D. Subtract 21

Answers1. **A**2. **D**3. **C**4. **B**5. **D**6. **D**7. **B**8. **B**9. **C**10. **C**