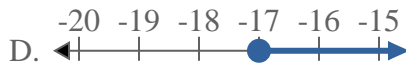
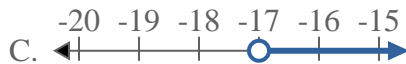




Solve each problem.


1) Which option best shows $X < -17$



2) Which option best shows $X \leq 20$



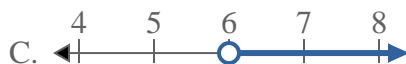
3) Which option best shows $X \geq 12$



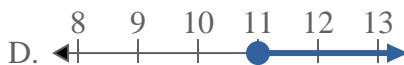
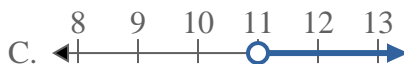
4) Which option best shows $X \geq -17$



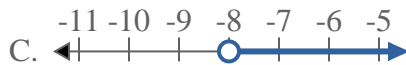
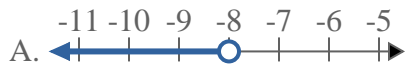
5) Which option best shows $X \geq 6$



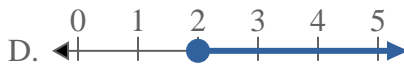
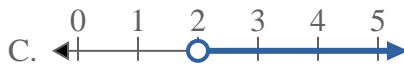
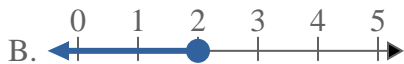
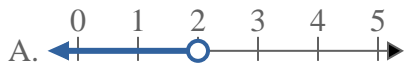
6) Which option best shows $X \leq 11$



7) Which option best shows $X \leq -8$



8) Which option best shows $X > 2$



Answers

1. _____

2. _____

3. _____

4. _____

5. _____

6. _____

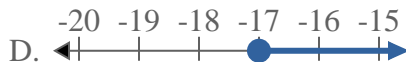
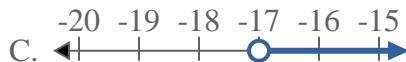
7. _____

8. _____




Solve each problem.

1) Which option best shows $X < -17$



2) Which option best shows $X \leq 20$



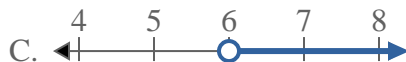
3) Which option best shows $X \geq 12$



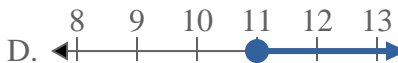
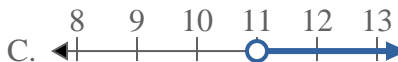
4) Which option best shows $X \geq -17$



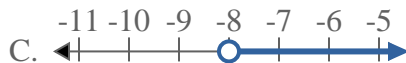
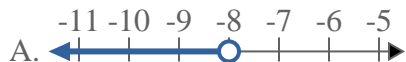
5) Which option best shows $X \geq 6$



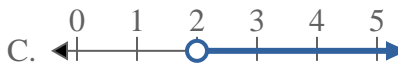
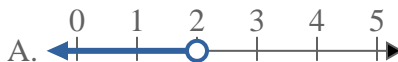
6) Which option best shows $X \leq 11$



7) Which option best shows $X \leq -8$



8) Which option best shows $X > 2$



Answers

1. **A**

2. **B**

3. **D**

4. **D**

5. **D**

6. **B**

7. **B**

8. **C**