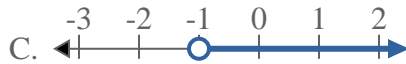
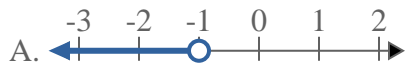




Solve each problem.

Answers

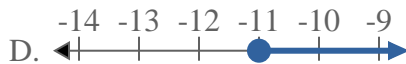
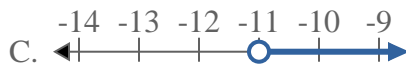
1) Which option best shows $X > -1$



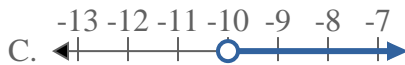
2) Which option best shows $X < -14$



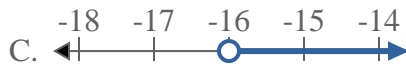
3) Which option best shows $X \leq -11$



4) Which option best shows $X < -10$



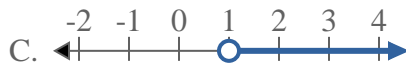
5) Which option best shows $X \leq -16$



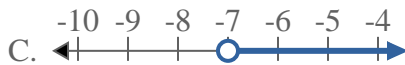
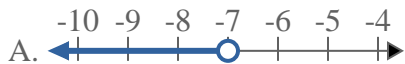
6) Which option best shows $X > 17$



7) Which option best shows $X > 1$



8) Which option best shows $X > -7$

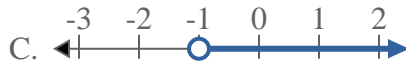
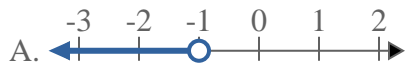


- 1. _____
- 2. _____
- 3. _____
- 4. _____
- 5. _____
- 6. _____
- 7. _____
- 8. _____

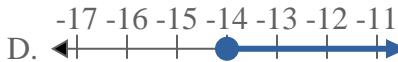
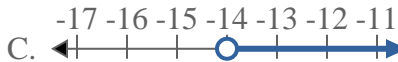


Solve each problem.

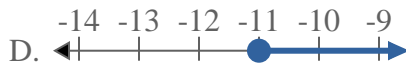
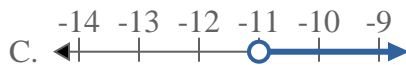
1) Which option best shows $X > -1$



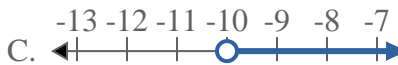
2) Which option best shows $X < -14$



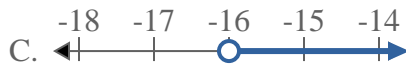
3) Which option best shows $X \leq -11$



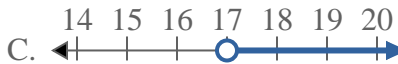
4) Which option best shows $X < -10$



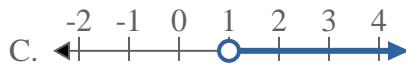
5) Which option best shows $X \leq -16$



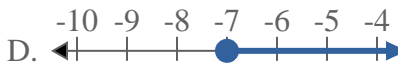
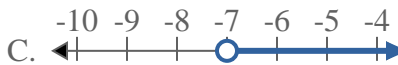
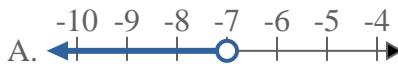
6) Which option best shows $X > 17$



7) Which option best shows $X > 1$



8) Which option best shows $X > -7$



Answers

1. **C**

2. **A**

3. **B**

4. **A**

5. **B**

6. **C**

7. **C**

8. **C**