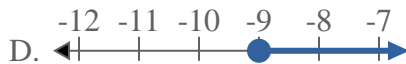
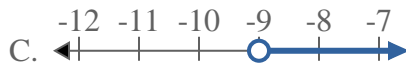




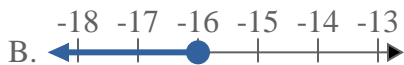
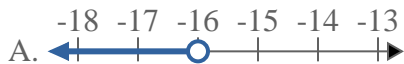
Solve each problem.

Answers

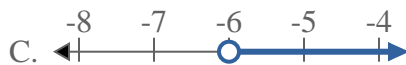
1) Which option best shows $X < -9$



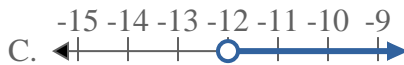
2) Which option best shows $X \leq -16$



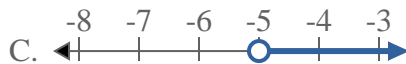
3) Which option best shows $X \geq -6$



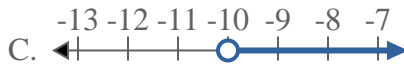
4) Which option best shows $X > -12$



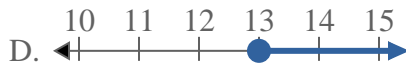
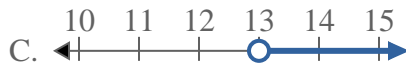
5) Which option best shows $X \leq -5$



6) Which option best shows $X < -10$



7) Which option best shows $X > 13$



8) Which option best shows $X < 11$

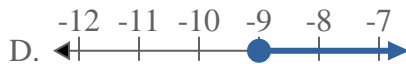
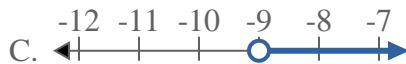


1. _____
2. _____
3. _____
4. _____
5. _____
6. _____
7. _____
8. _____

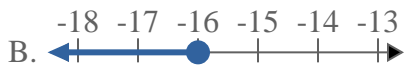
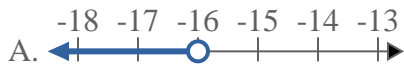


Solve each problem.

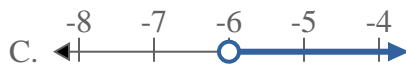
1) Which option best shows $X < -9$



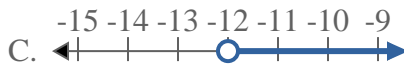
2) Which option best shows $X \leq -16$



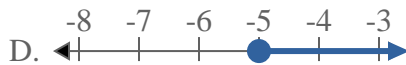
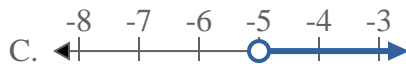
3) Which option best shows $X \geq -6$



4) Which option best shows $X > -12$



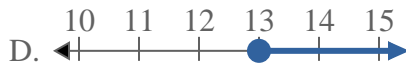
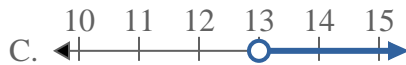
5) Which option best shows $X \leq -5$



6) Which option best shows $X < -10$



7) Which option best shows $X > 13$



8) Which option best shows $X < 11$



Answers

1. **A**

2. **B**

3. **D**

4. **C**

5. **B**

6. **A**

7. **C**

8. **A**