



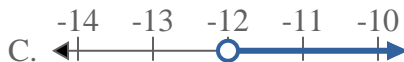
Solve each problem.

**Answers**

1) Which option best shows  $X < 12$



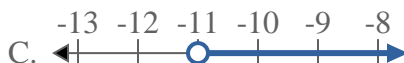
2) Which option best shows  $X > -12$



3) Which option best shows  $X > -16$



4) Which option best shows  $X < -11$



5) Which option best shows  $X \leq 13$



6) Which option best shows  $X \geq 13$



7) Which option best shows  $X < -7$



8) Which option best shows  $X \geq 18$



1. \_\_\_\_\_
2. \_\_\_\_\_
3. \_\_\_\_\_
4. \_\_\_\_\_
5. \_\_\_\_\_
6. \_\_\_\_\_
7. \_\_\_\_\_
8. \_\_\_\_\_

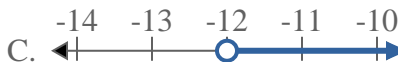


Solve each problem.

1) Which option best shows  $X < 12$



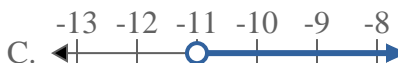
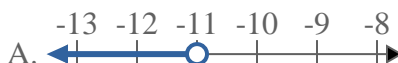
2) Which option best shows  $X > -12$



3) Which option best shows  $X > -16$



4) Which option best shows  $X < -11$



5) Which option best shows  $X \leq 13$



6) Which option best shows  $X \geq 13$



7) Which option best shows  $X < -7$



8) Which option best shows  $X \geq 18$



**Answers**

1.   **A**  

2.   **C**  

3.   **C**  

4.   **A**  

5.   **B**  

6.   **D**  

7.   **A**  

8.   **D**