




Determine which letter best completes the pattern.

Answers

1) Determine which letter best completes the pattern.




- A.
- B.
- C.
- D.

2) Determine which letter best completes the pattern.



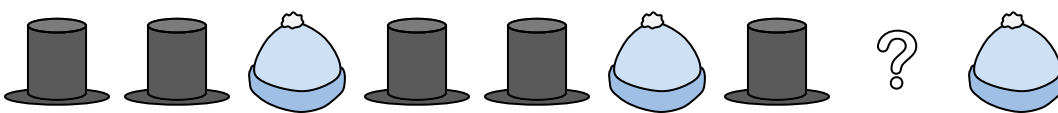
- A.
- B.
- C.
- D.

3) Determine which letter best completes the pattern.



- A.
- B.
- C.
- D.

4) Determine which letter best completes the pattern.



- A.
- B.
- C.
- D.

5) Determine which letter best completes the pattern.



- A.
- B.
- C.
- D.

- 1. _____
- 2. _____
- 3. _____
- 4. _____
- 5. _____



Determine which letter best completes the pattern.

1) Determine which letter best completes the pattern.



- A.
- B.
- C.
- D.

2) Determine which letter best completes the pattern.



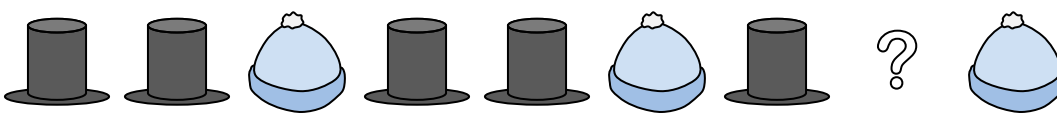
- A.
- B.
- C.
- D.

3) Determine which letter best completes the pattern.



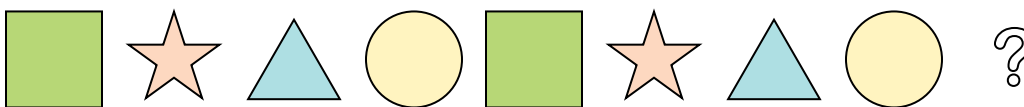
- A.
- B.
- C.
- D.

4) Determine which letter best completes the pattern.



- A.
- B.
- C.
- D.

5) Determine which letter best completes the pattern.



- A.
- B.
- C.
- D.

Answers

1. **D**

2. **C**

3. **C**

4. **D**

5. **C**