



Determine which letter best completes the pattern.

Answers

1) Determine which letter best completes the pattern.



- A. 
- B. 
- C. 
- D. 

1. _____

2. _____

3. _____

4. _____

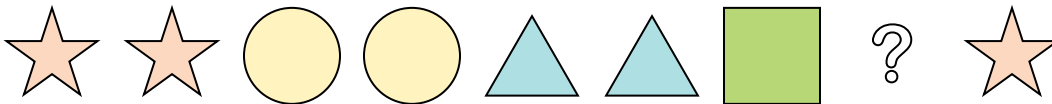
5. _____



2) Determine which letter best completes the pattern.



- A. 
- B. 
- C. 
- D. 





3) Determine which letter best completes the pattern.



- A. 
- B. 
- C. 
- D. 





4) Determine which letter best completes the pattern.



- A. 
- B. 
- C. 
- D. 

5) Determine which letter best completes the pattern.



- A. 
- B. 
- C. 
- D. 



Determine which letter best completes the pattern.

1) Determine which letter best completes the pattern.



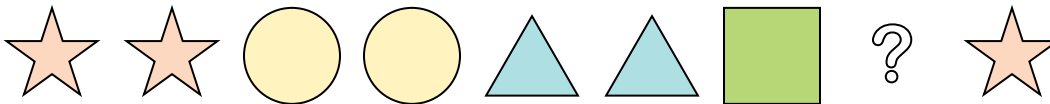
- A.
- B.
- C.
- D.

2) Determine which letter best completes the pattern.



- A.
- B.
- C.
- D.

3) Determine which letter best completes the pattern.



- A.
- B.
- C.
- D.

4) Determine which letter best completes the pattern.



- A.
- B.
- C.
- D.

5) Determine which letter best completes the pattern.



- A.
- B.
- C.
- D.

Answers

1. **A**

2. **B**

3. **B**

4. **B**

5. **C**