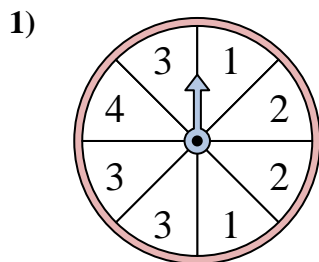


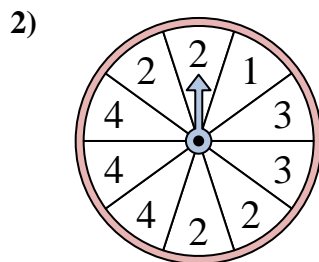


Solve each problem. Round your answer to the nearest tenth.

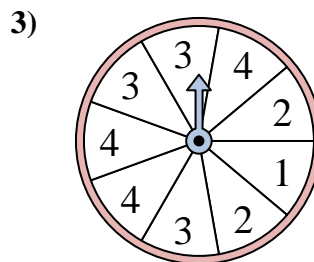
Answers



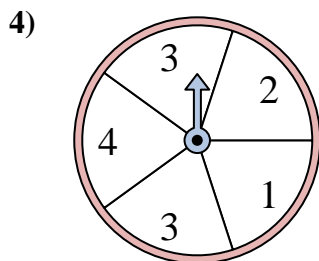
The spinner has a _____% chance of landing on a 3.



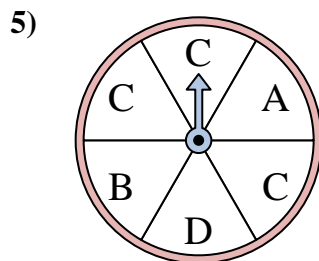
The spinner has a _____% chance of landing on a 4.



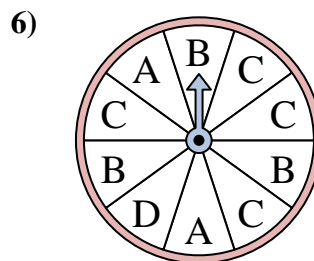
The spinner has a _____% chance of landing on a 3.



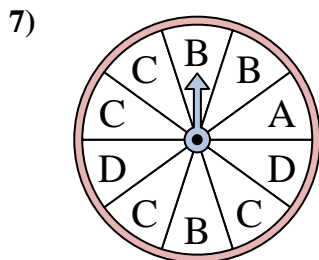
The spinner has a _____% chance of landing on a 1.



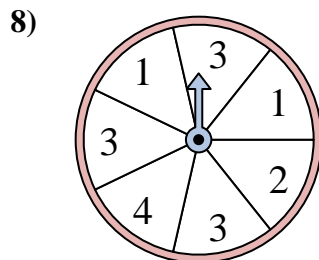
The spinner has a _____% chance of landing on a C.



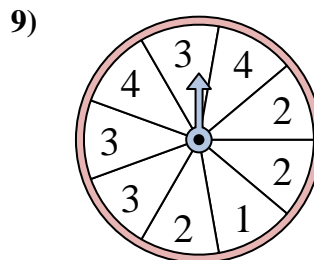
The spinner has a _____% chance of landing on a D.



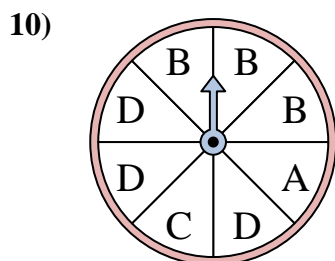
The spinner has a _____% chance of landing on a A.



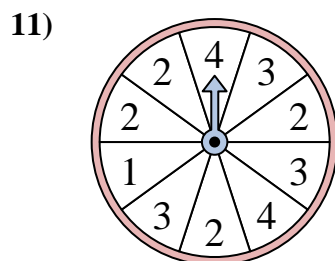
The spinner has a _____% chance of landing on a 3.



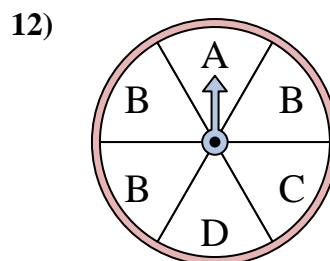
The spinner has a _____% chance of landing on a 4.



The spinner has a _____% chance of landing on a B.



The spinner has a _____% chance of landing on a 1.

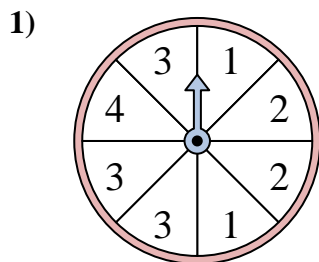


The spinner has a _____% chance of landing on a C.

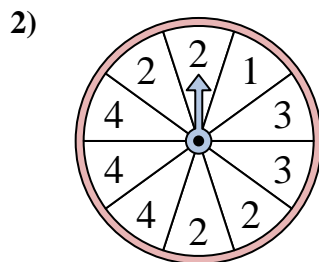
1. _____
2. _____
3. _____
4. _____
5. _____
6. _____
7. _____
8. _____
9. _____
10. _____
11. _____
12. _____



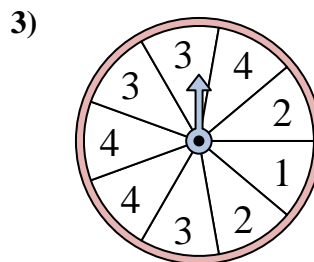
Solve each problem. Round your answer to the nearest tenth.



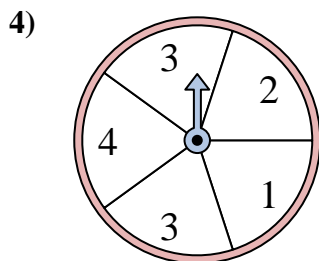
The spinner has a _____% chance of landing on a 3.



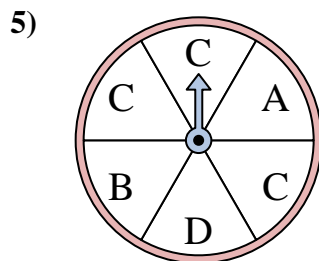
The spinner has a _____% chance of landing on a 4.



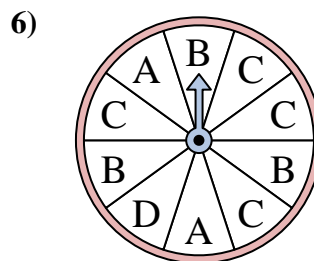
The spinner has a _____% chance of landing on a 3.



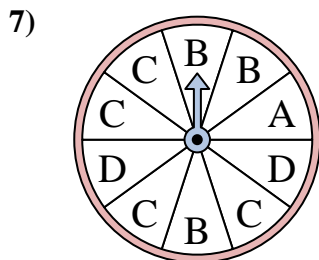
The spinner has a _____% chance of landing on a 1.



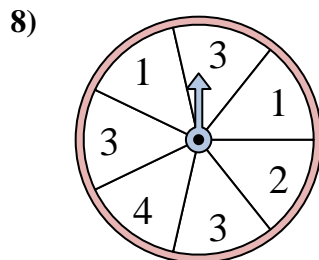
The spinner has a _____% chance of landing on a C.



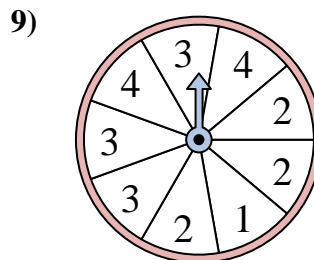
The spinner has a _____% chance of landing on a D.



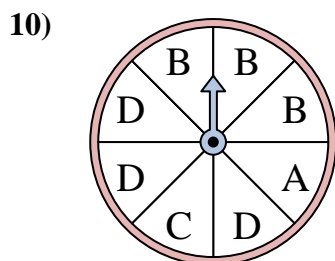
The spinner has a _____% chance of landing on a A.



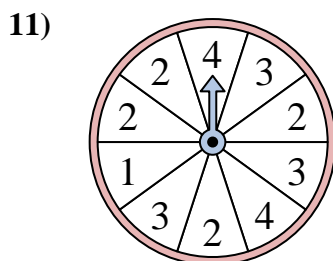
The spinner has a _____% chance of landing on a 3.



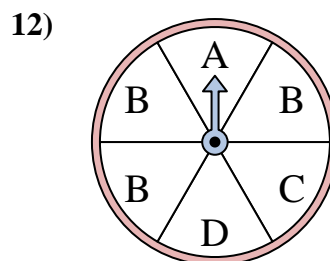
The spinner has a _____% chance of landing on a 4.



The spinner has a _____% chance of landing on a B.



The spinner has a _____% chance of landing on a 1.



The spinner has a _____% chance of landing on a C.

Answers

1. 37.5
2. 30
3. 33.3
4. 20
5. 50
6. 10
7. 10
8. 42.9
9. 22.2
10. 37.5
11. 10
12. 16.7