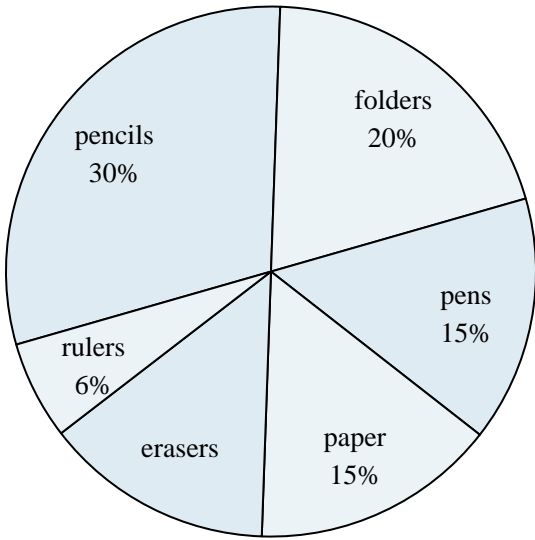




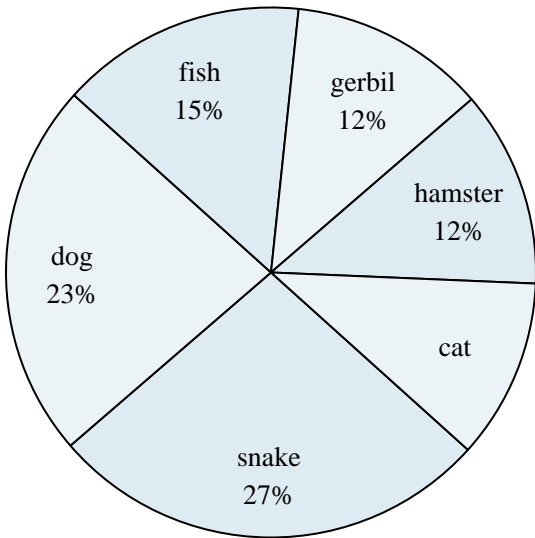
Use the graph to solve.

School Store Sales



- 1) Which product sold the best?
- 2) Which product sold the worst?
- 3) Which two products accounted for about half the sales?
- 4) What percent of the sales were pencils?
- 5) What is the combined amount of rulers and pens sold?

Favorite Pet



- 6) Which pet did the greatest number of people like?
- 7) Which pet did the least amount of people say was their favorite?
- 8) Which two pets did about half the people say was their favorite?
- 9) What percent of people said the gerbil was their favorite pet?
- 10) What percent of people preferred either the hamster or the fish?

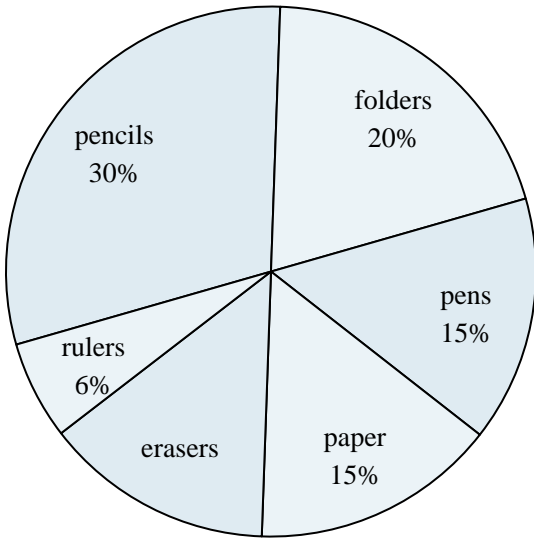
Answers

1. _____
2. _____
3. _____
4. _____
5. _____
6. _____
7. _____
8. _____
9. _____
10. _____



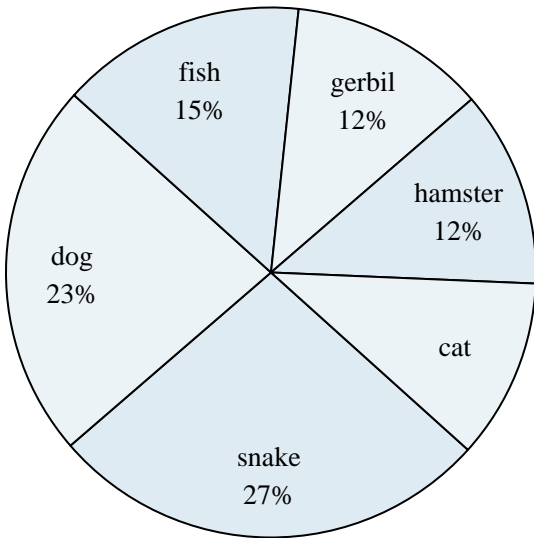
Use the graph to solve.

School Store Sales



- 1) Which product sold the best?
- 2) Which product sold the worst?
- 3) Which two products accounted for about half the sales?
- 4) What percent of the sales were pencils?
- 5) What is the combined amount of rulers and pens sold?

Favorite Pet



- 6) Which pet did the greatest number of people like?
- 7) Which pet did the least amount of people say was their favorite?
- 8) Which two pets did about half the people say was their favorite?
- 9) What percent of people said the gerbil was their favorite pet?
- 10) What percent of people preferred either the hamster or the fish?

Answers

1. pencils
2. rulers
3. pencils & folders
4. 30%
5. 21%
6. snake
7. cat
8. snake & dog
9. 12%
10. 27%