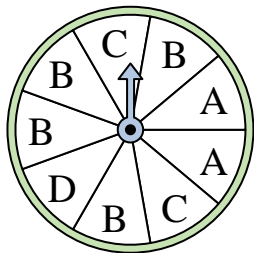





Solve each problem.

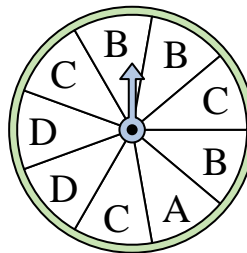
- 1) Which letter is the spinner most likely to land on?



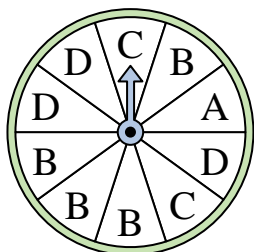
- 2) Which number is the spinner least likely to land on?



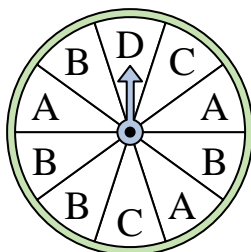
- 3) Which two letters is the spinner equally likely to land on?



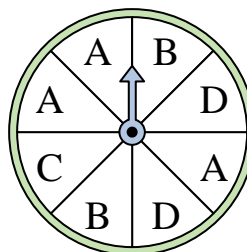
- 4) Which letter is the spinner most likely to land on?




- 5) Which letter is the spinner least likely to land on?




- 6) Which two letters is the spinner equally likely to land on?



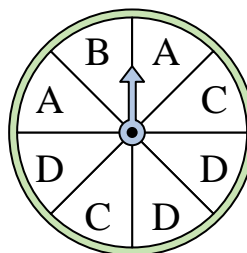
- 7) Which number is the spinner least likely to land on?



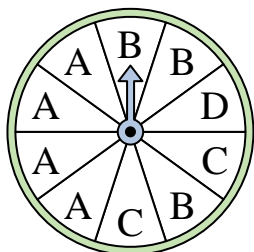
- 8) Which number is the spinner least likely to land on?



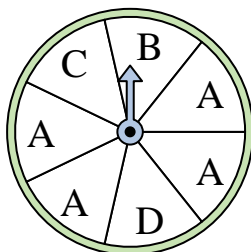
- 9) Which two letters is the spinner equally likely to land on?



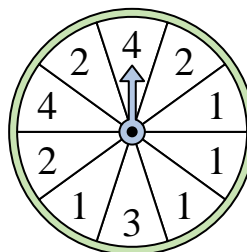
- 10) Which letter is the spinner most likely to land on?



- 11) Which letter is the spinner most likely to land on?



- 12) Which number is the spinner most likely to land on?



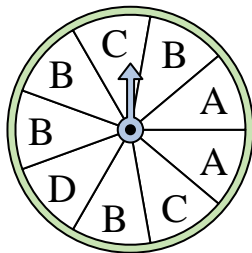
Answers

1. \_\_\_\_\_
2. \_\_\_\_\_
3. \_\_\_\_\_
4. \_\_\_\_\_
5. \_\_\_\_\_
6. \_\_\_\_\_
7. \_\_\_\_\_
8. \_\_\_\_\_
9. \_\_\_\_\_
10. \_\_\_\_\_
11. \_\_\_\_\_
12. \_\_\_\_\_




Solve each problem.

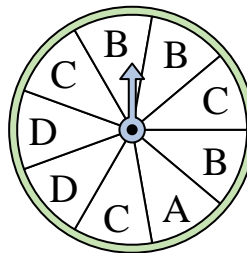
- 1) Which letter is the spinner most likely to land on?



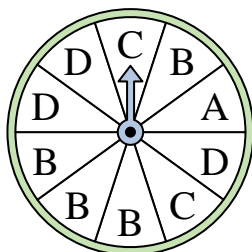
- 2) Which number is the spinner least likely to land on?



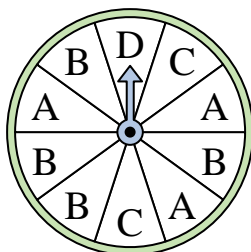
- 3) Which two letters is the spinner equally likely to land on?



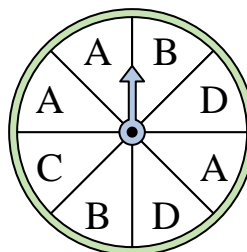
- 4) Which letter is the spinner most likely to land on?




- 5) Which letter is the spinner least likely to land on?




- 6) Which two letters is the spinner equally likely to land on?



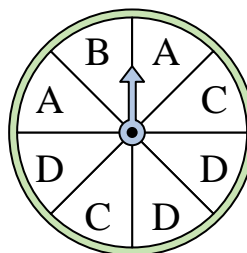
- 7) Which number is the spinner least likely to land on?



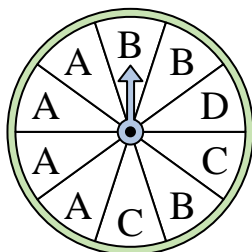
- 8) Which number is the spinner least likely to land on?



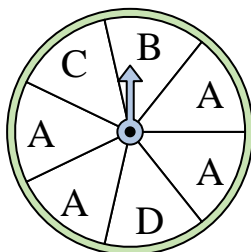
- 9) Which two letters is the spinner equally likely to land on?



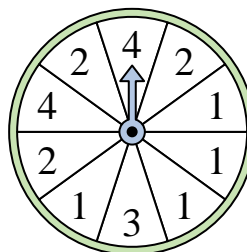
- 10) Which letter is the spinner most likely to land on?



- 11) Which letter is the spinner most likely to land on?



- 12) Which number is the spinner most likely to land on?



Answers

1. **B**

2. **4**

3. **B & C**

4. **B**

5. **D**

6. **B & D**

7. **1**

8. **1**

9. **A & C**

10. **A**

11. **A**

12. **1**