



Use the numberlines to round each number to the nearest 100.

Ex)

40,484



Answers

Ex. 40,500

1)

21,657



1. \_\_\_\_\_

2)

1,417



2. \_\_\_\_\_

3)

332



3. \_\_\_\_\_

4)

379



4. \_\_\_\_\_

5)

57,068



5. \_\_\_\_\_

6)

5,630



6. \_\_\_\_\_

7)

7,883



7. \_\_\_\_\_

8)

856



8. \_\_\_\_\_

9)

26,974



9. \_\_\_\_\_

10)

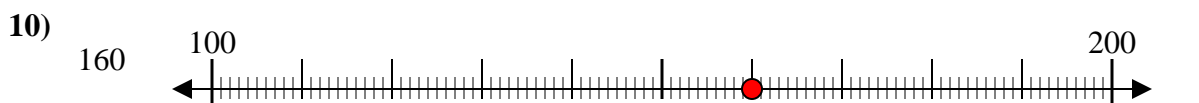
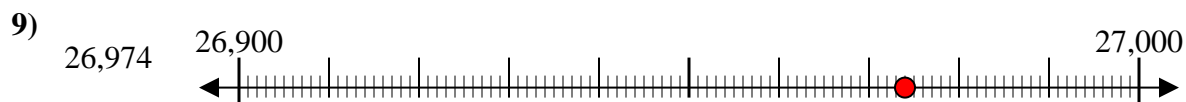
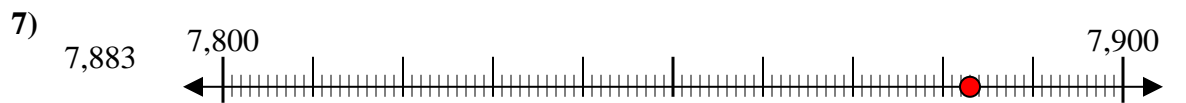
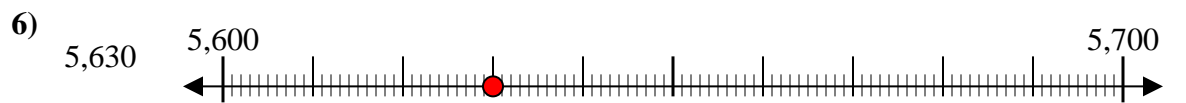
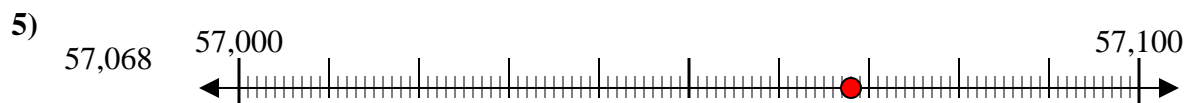
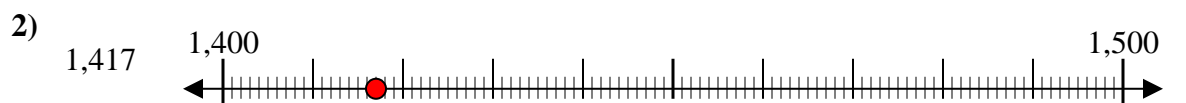
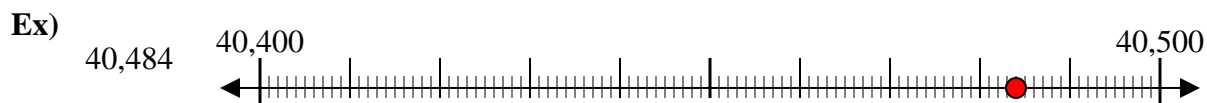
160



10. \_\_\_\_\_



Use the numberlines to round each number to the nearest 100.



Answers

Ex. 40,500

1. 21,700

2. 1,400

3. 300

4. 400

5. 57,100

6. 5,600

7. 7,900

8. 900

9. 27,000

10. 200