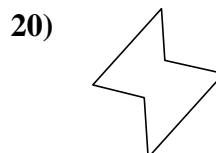
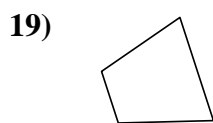
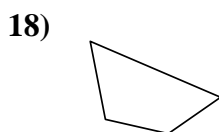
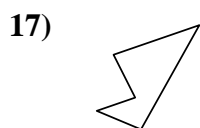
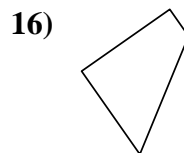
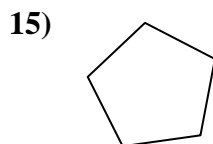
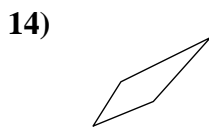
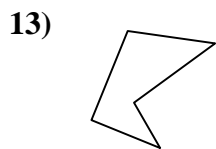
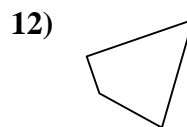
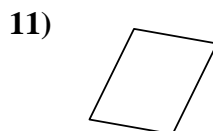
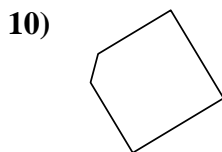
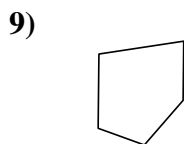
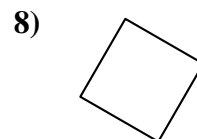
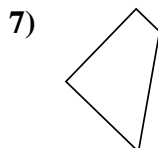
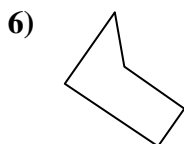
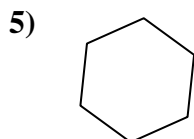
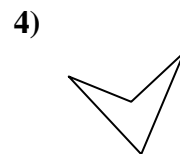
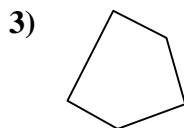
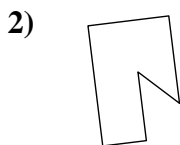
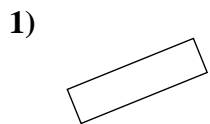




Determine if the shape shown is a quadrilateral (yes) or not (no).

Answers


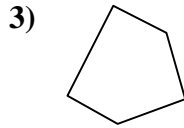
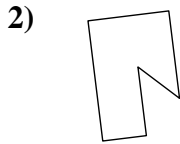
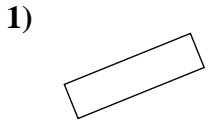


- 1. _____
- 2. _____
- 3. _____
- 4. _____
- 5. _____
- 6. _____
- 7. _____
- 8. _____
- 9. _____
- 10. _____
- 11. _____
- 12. _____
- 13. _____
- 14. _____
- 15. _____
- 16. _____
- 17. _____
- 18. _____
- 19. _____
- 20. _____



Determine if the shape shown is a quadrilateral (yes) or not (no).

Answers

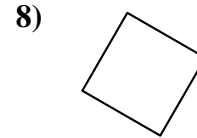
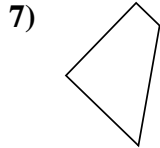
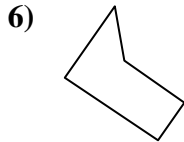
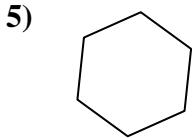


1. yes

2. no

3. no

4. yes

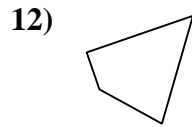
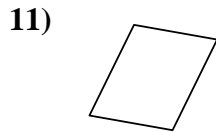
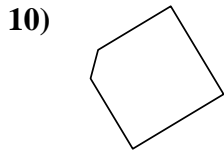
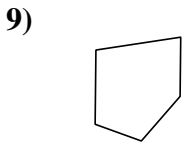


5. no

6. no

7. yes

8. yes

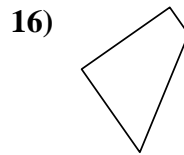
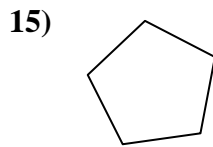
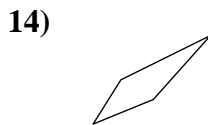
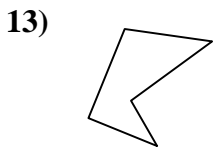


9. no

10. no

11. yes

12. yes

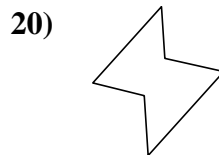
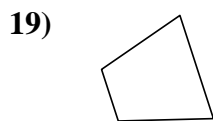
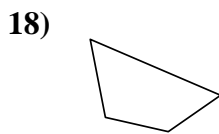
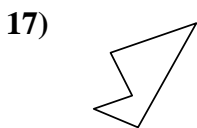


13. no

14. yes

15. no

16. yes



17. no

18. yes

19. yes

20. no