



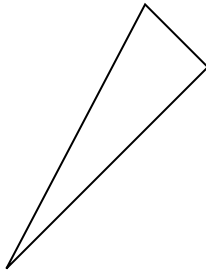
Determine if the figure shown is a 'Triangle', 'Square', 'Rectangle', 'Hexagon' or 'Other'.

Answers

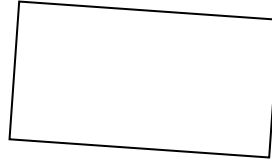
1)



2)



3)



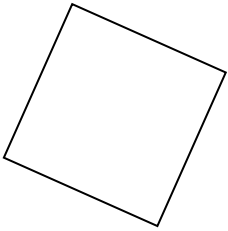
1. _____

2. _____

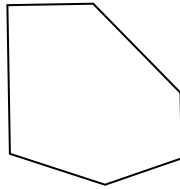
3. _____

4. _____

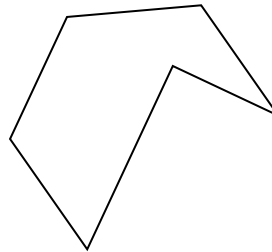
4)



5)



6)



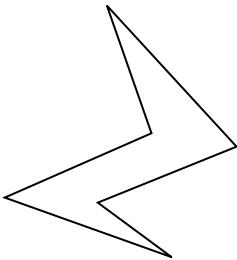
5. _____

6. _____

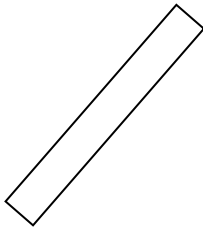
7. _____

8. _____

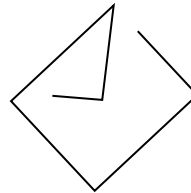
7)



8)



9)



9. _____

10. _____

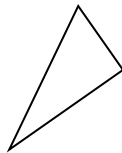
11. _____

12. _____

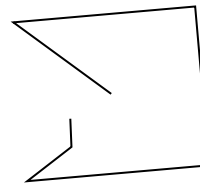
10)



11)



12)




13. _____


14. _____

15. _____

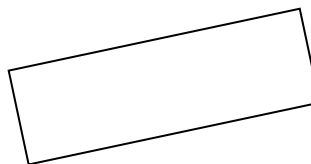
13)



14)



15)



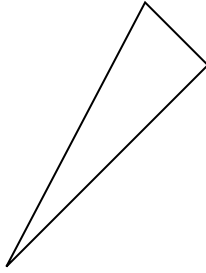


Determine if the figure shown is a 'Triangle', 'Square', 'Rectangle', 'Hexagon' or 'Other'.

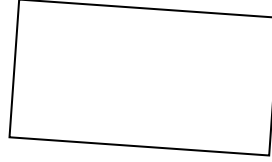
1)



2)



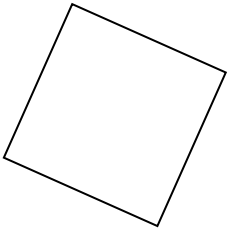
3)



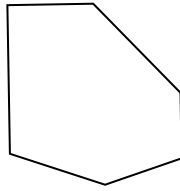
1.

other

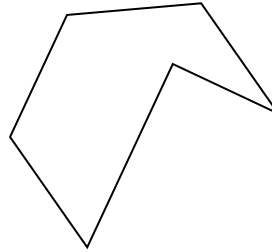
4)



5)



6)



2.

triangle

3.

rectangle

4.

square

5.

hexagon

6.

hexagon

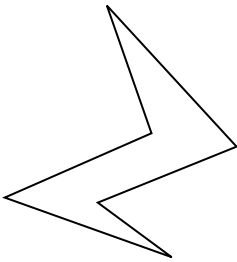
7.

hexagon

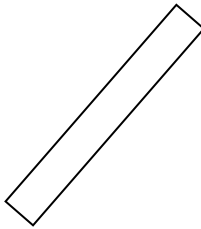
8.

rectangle

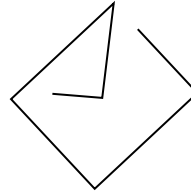
7)



8)



9)



9.

other

10.

triangle

11.

triangle

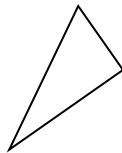
12.

other

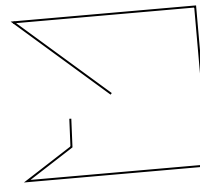
10)



11)



12)



13.

other


14.

triangle


15.

rectangle

13)



14)



15)

