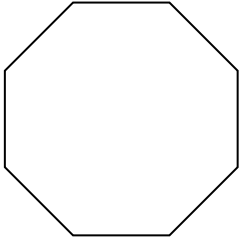





Determine if the shape shown is a regular shape or an irregular shape.

Answers

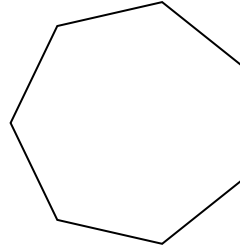
1)



2)



3)




1. _____

2. _____


3. _____

4. _____

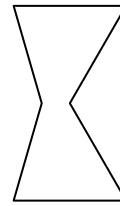
4)



5)



6)



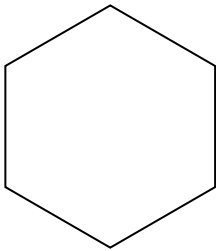
5. _____

6. _____

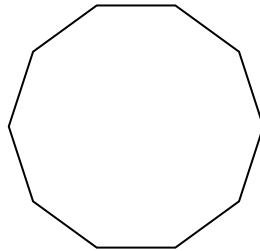
7. _____

8. _____


7)



8)



9)



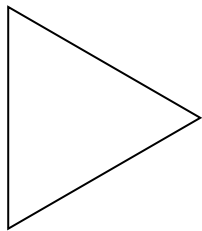
9. _____

10. _____


11. _____

12. _____

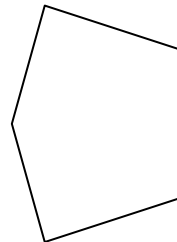
10)



11)



12)




13. _____

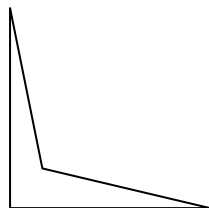
14. _____

15. _____

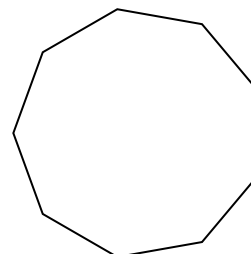
13)



14)



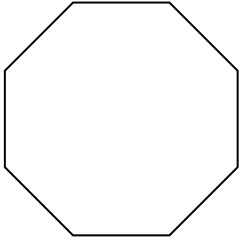
15)






Determine if the shape shown is a regular shape or an irregular shape.

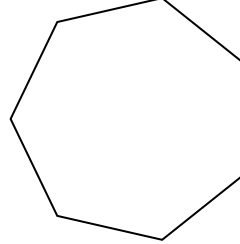
1)



2)



3)



Answers


1. Regular

2. Irregular


3. Regular

4. Irregular

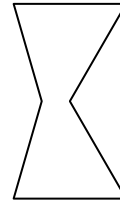
4)



5)



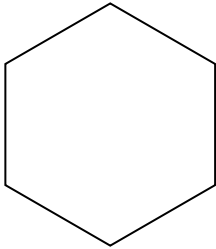
6)



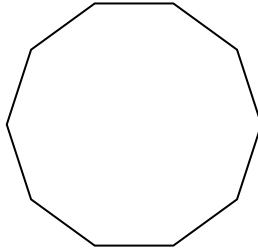
5. Irregular

6. Irregular


7)



8)



9)



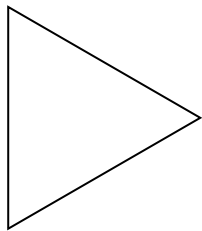
7. Regular

8. Regular


9. Irregular

10. Regular

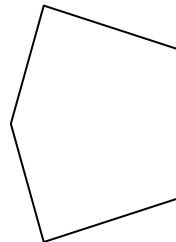
10)



11)



12)




12. Irregular

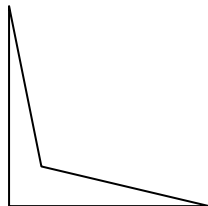
13. Irregular

14. Irregular

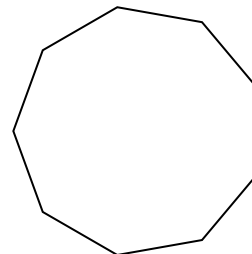
13)



14)



15)



15. Regular