




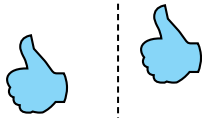
Determine if the shape is translating (slide), rotating (turn) or reflecting (flip).

Answers

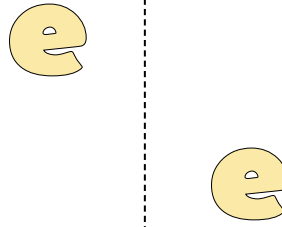
1)



2)



3)



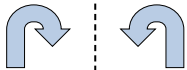
1. _____

2. _____

3. _____

4. _____


4)



5)



6)



5. _____

6. _____

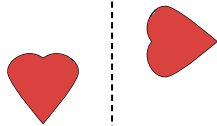
7. _____

8. _____

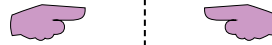
7)



8)



9)



9. _____

10. _____


11. _____

12. _____


10)



11)



12)

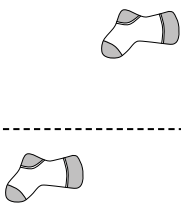


13. _____

14. _____

15. _____

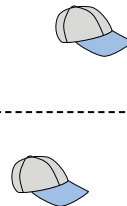
13)



14)



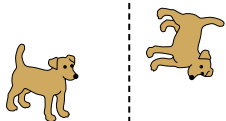
15)



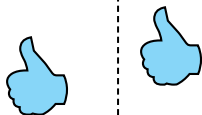


Determine if the shape is translating (slide), rotating (turn) or reflecting (flip).

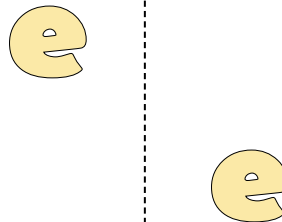
1)



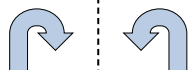
2)



3)




4)



5)



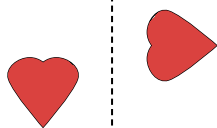
6)



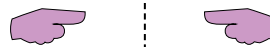
7)



8)




9)




10)



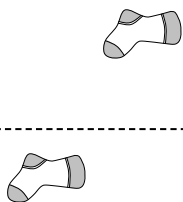
11)



12)



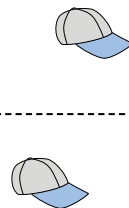
13)



14)



15)



Answers

1. rotating

2. translating

3. translating

4. reflecting

5. translating

6. rotating

7. rotating

8. rotating

9. reflecting

10. reflecting

11. reflecting

12. reflecting

13. translating

14. translating

15. translating