



Use the visual model to solve each problem.

Answers

1) There are 15 stars below.



If you were to take away 8, how many would be left?

$15 - 8 = ?$

2) There are 8 triangles below.



If you were to take away 4, how many would be left?

$8 - 4 = ?$

3) There are 6 squares below.



If you were to take away 2, how many would be left?

$6 - 2 = ?$

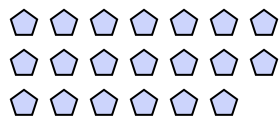
4) There are 5 rectangles below.



If you were to take away 1, how many would be left?

$5 - 1 = ?$

5) There are 20 pentagons below.



If you were to take away 4, how many would be left?

$20 - 4 = ?$

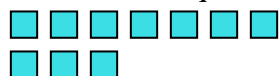
6) There are 8 stars below.



If you were to take away 6, how many would be left?

$8 - 6 = ?$

7) There are 10 squares below.



If you were to take away 8, how many would be left?

$10 - 8 = ?$

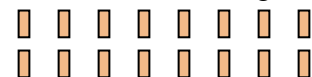
8) There are 19 stars below.



If you were to take away 10, how many would be left?

$19 - 10 = ?$

9) There are 16 rectangles below.



If you were to take away 5, how many would be left?

$16 - 5 = ?$

10) There are 6 squares below.



If you were to take away 1, how many would be left?

$6 - 1 = ?$

- 1. _____
- 2. _____
- 3. _____
- 4. _____
- 5. _____
- 6. _____
- 7. _____
- 8. _____
- 9. _____
- 10. _____



Use the visual model to solve each problem.

1) There are 15 stars below.



If you were to take away 8, how many would be left?

15 - 8 = ?

2) There are 8 triangles below.



If you were to take away 4, how many would be left?

8 - 4 = ?

3) There are 6 squares below.



If you were to take away 2, how many would be left?

6 - 2 = ?

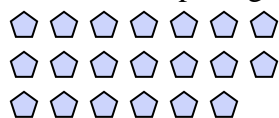
4) There are 5 rectangles below.



If you were to take away 1, how many would be left?

5 - 1 = ?

5) There are 20 pentagons below.



If you were to take away 4, how many would be left?

20 - 4 = ?

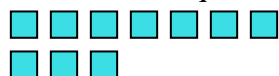
6) There are 8 stars below.



If you were to take away 6, how many would be left?

8 - 6 = ?

7) There are 10 squares below.



If you were to take away 8, how many would be left?

10 - 8 = ?

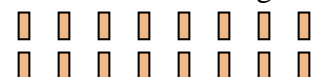
8) There are 19 stars below.



If you were to take away 10, how many would be left?

19 - 10 = ?

9) There are 16 rectangles below.



If you were to take away 5, how many would be left?

16 - 5 = ?

10) There are 6 squares below.



If you were to take away 1, how many would be left?

6 - 1 = ?

Answers

1. 7

2. 4

3. 4

4. 4

5. 16

6. 2

7. 2

8. 9

9. 11

10. 5