



Express each number using tally marks.

1) 16 _____

2) 21 _____

3) 89 _____

4) 70 _____

5) 61 _____

6) 72 _____

7) 58 _____

8) 44 _____

9) 55 _____

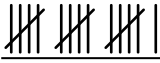
10) 94 _____

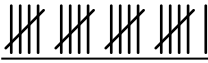
11) 62 _____

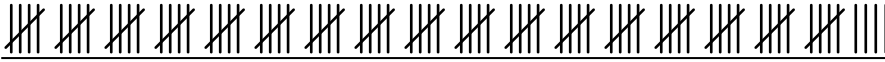
12) 95 _____




Express each number using tally marks.

1) 16 

2) 21 

3) 89 

4) 70 

5) 61 

6) 72 

7) 58 

8) 44 

9) 55 

10) 94 

11) 62 

12) 95 