



Use the chart to answer each question.

Name	Boxes of Candy Sold
Sarah	
Debby	
Olivia	
Jerry	
Victor	
Frank	
Oliver	







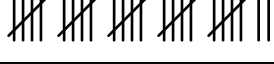
Answers

1. _____
2. _____
3. _____
4. _____
5. _____
6. _____
7. _____
8. _____
9. _____
10. _____

- 1) Who sold the fewest boxes?
- 2) Who sold the greatest number of boxes?
- 3) How many boxes of candy did Oliver sell?
- 4) How many people sold more than 27 boxes?
- 5) How many people sold less than 22 boxes?
- 6) Who sold more? Frank or Oliver?
- 7) Who sold less? Jerry or Olivia?
- 8) How much more did Victor sell than Oliver sold?
- 9) Who sold exactly 40 boxes?
- 10) How much less did Olivia sell than Sarah sold?



Use the chart to answer each question.

Name	Boxes of Candy Sold
Sarah	
Debby	
Olivia	
Jerry	
Victor	
Frank	
Oliver	

32

22

17

49

40

48

27

Answers

1. **Olivia**

2. **Jerry**

3. **27**

4. **4**

5. **1**

6. **Frank**

7. **Olivia**

8. **13**

9. **Victor**

10. **15**

- Who sold the fewest boxes?
- Who sold the greatest number of boxes?
- How many boxes of candy did Oliver sell?
- How many people sold more than 27 boxes?
- How many people sold less than 22 boxes?
- Who sold more? Frank or Oliver?
- Who sold less? Jerry or Olivia?
- How much more did Victor sell than Oliver sold?
- Who sold exactly 40 boxes?
- How much less did Olivia sell than Sarah sold?