

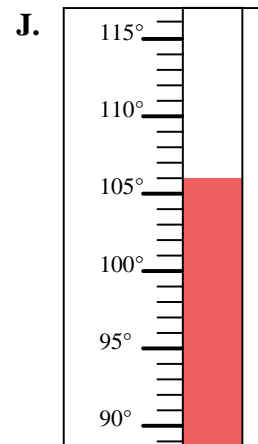
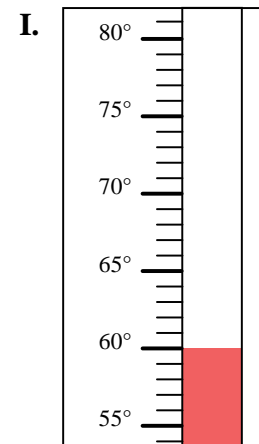
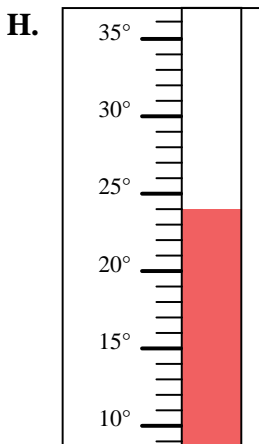
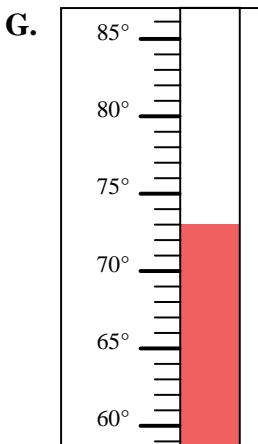
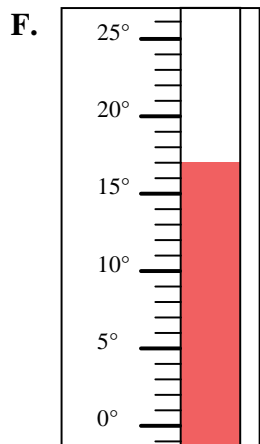
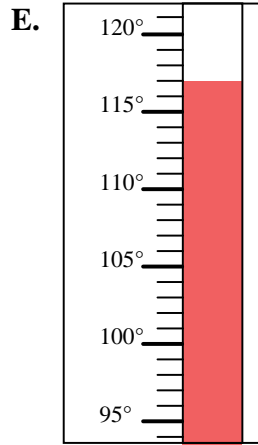
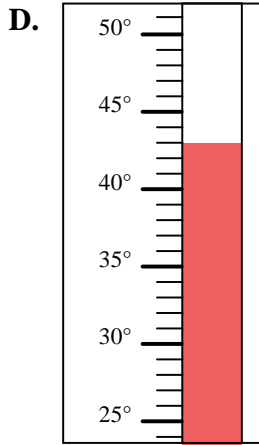
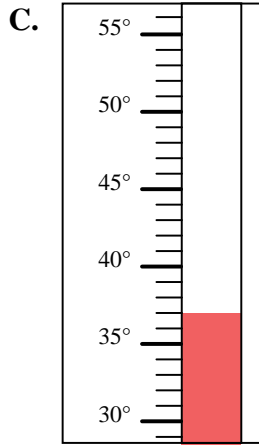
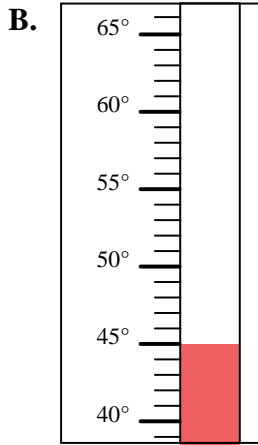
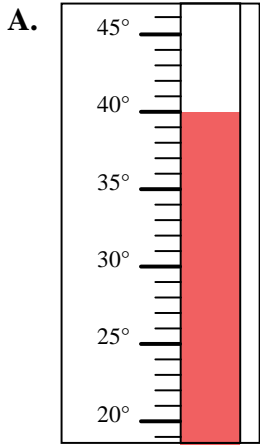


Determine which letter best answers each question.

Answers

- 1) Which thermometer best represents the temperature 37°?
- 2) Which thermometer best represents the temperature 73°?
- 3) Which thermometer best represents the temperature 45°?
- 4) Which thermometer best represents the temperature 43°?
- 5) Which thermometer best represents the temperature 17°?
- 6) Which thermometer best represents the temperature 24°?
- 7) Which thermometer best represents the temperature 106°?
- 8) Which thermometer best represents the temperature 40°?
- 9) Which thermometer best represents the temperature 117°?
- 10) Which thermometer best represents the temperature 60°?

1. _____
2. _____
3. _____
4. _____
5. _____
6. _____
7. _____
8. _____
9. _____
10. _____





Determine which letter best answers each question.

Answers

- 1) Which thermometer best represents the temperature 37°?
- 2) Which thermometer best represents the temperature 73°?
- 3) Which thermometer best represents the temperature 45°?
- 4) Which thermometer best represents the temperature 43°?
- 5) Which thermometer best represents the temperature 17°?
- 6) Which thermometer best represents the temperature 24°?
- 7) Which thermometer best represents the temperature 106°?
- 8) Which thermometer best represents the temperature 40°?
- 9) Which thermometer best represents the temperature 117°?
- 10) Which thermometer best represents the temperature 60°?

1. **C**
2. **G**
3. **B**
4. **D**
5. **F**
6. **H**
7. **J**
8. **A**
9. **E**
10. **I**

