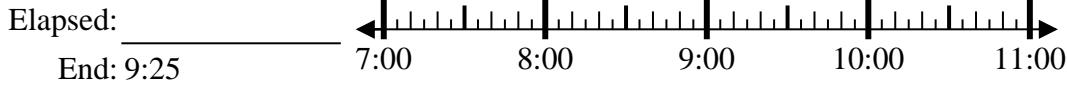




Solve each problem.

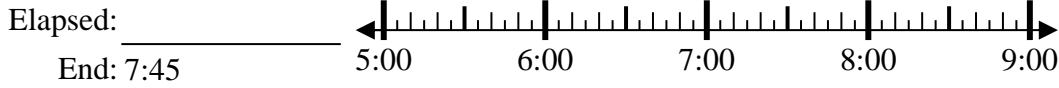
Answers

1) Start: 7:05



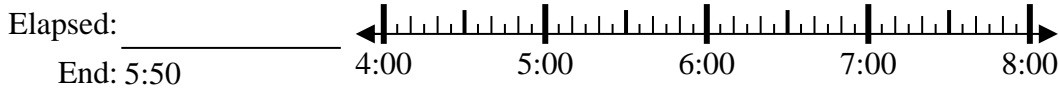
1. _____

2) Start: 5:25



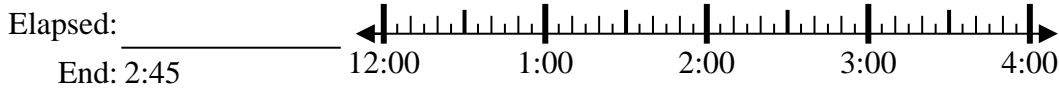
2. _____

3) Start: 4:15



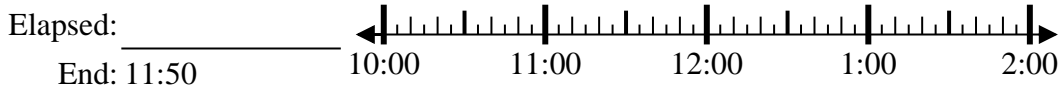
3. _____

4) Start: 12:05



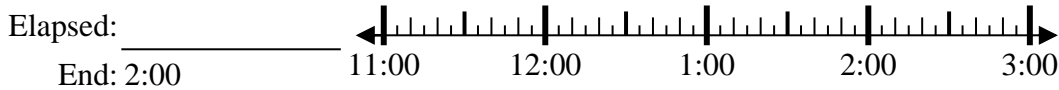
4. _____

5) Start: 10:05



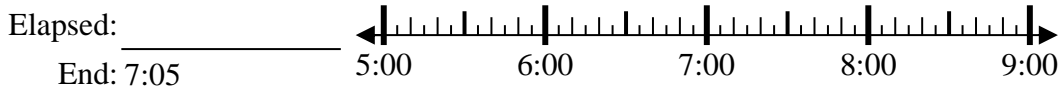
5. _____

6) Start: 11:45



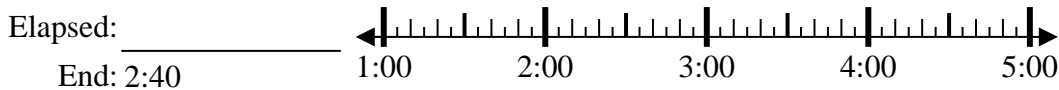
6. _____

7) Start: 5:25



7. _____

8) Start: 1:25



8. _____

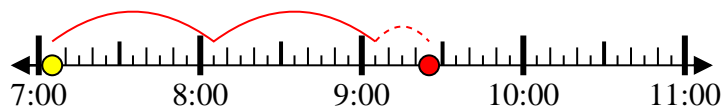


Solve each problem.

1) Start: 7:05

Elapsed: 2 hrs & 20 mins

End: 9:25



2) Start: 5:25

Elapsed: 2 hrs & 20 mins

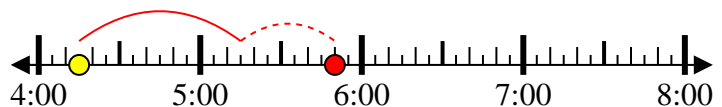
End: 7:45



3) Start: 4:15

Elapsed: 1 hr & 35 mins

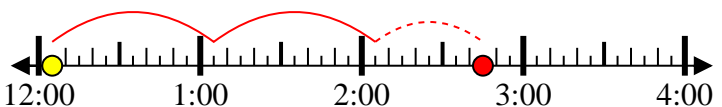
End: 5:50



4) Start: 12:05

Elapsed: 2 hrs & 40 mins

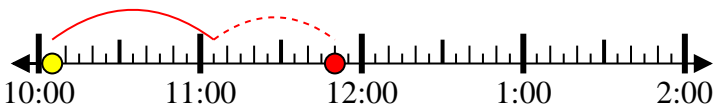
End: 2:45



5) Start: 10:05

Elapsed: 1 hr & 45 mins

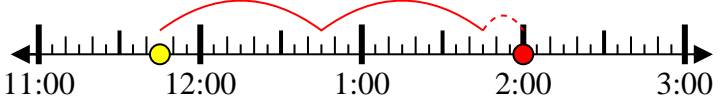
End: 11:50



6) Start: 11:45

Elapsed: 2 hrs & 15 mins

End: 2:00



7) Start: 5:25

Elapsed: 1 hr & 40 mins

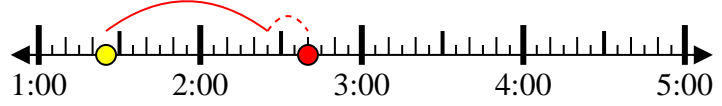
End: 7:05



8) Start: 1:25

Elapsed: 1 hr & 15 mins

End: 2:40



Answers

1. 2 hrs & 20 mins

2. 2 hrs & 20 mins

3. 1 hr & 35 mins

4. 2 hrs & 40 mins

5. 1 hr & 45 mins

6. 2 hrs & 15 mins

7. 1 hr & 40 mins

8. 1 hr & 15 mins