



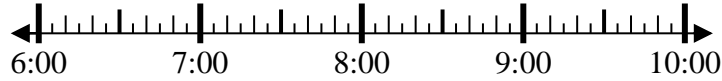
Solve each problem.

Answers

1) Start: 6:50

Elapsed: _____

End: 8:15



1. _____

2) Start: 4:25

Elapsed: _____

End: 7:00



2. _____

3) Start: 2:40

Elapsed: _____

End: 5:25



3. _____

4) Start: 9:45

Elapsed: _____

End: 12:25



4. _____

5) Start: 12:35

Elapsed: _____

End: 2:20



5. _____

6) Start: 6:35

Elapsed: _____

End: 9:05



6. _____

7) Start: 12:35

Elapsed: _____

End: 2:05

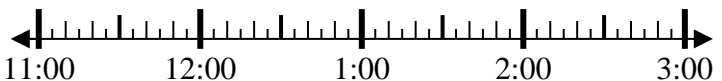


7. _____

8) Start: 11:40

Elapsed: _____

End: 1:50



8. _____

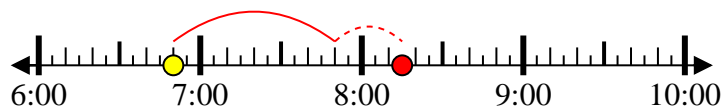


Solve each problem.

1) Start: 6:50

Elapsed: 1 hr & 25 mins

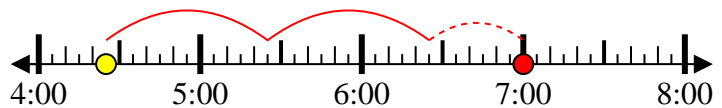
End: 8:15



2) Start: 4:25

Elapsed: 2 hrs & 35 mins

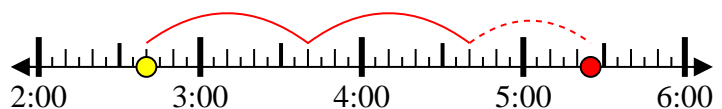
End: 7:00



3) Start: 2:40

Elapsed: 2 hrs & 45 mins

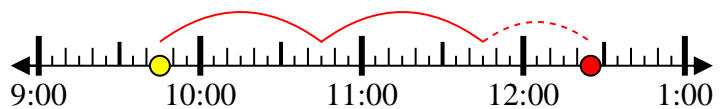
End: 5:25



4) Start: 9:45

Elapsed: 2 hrs & 40 mins

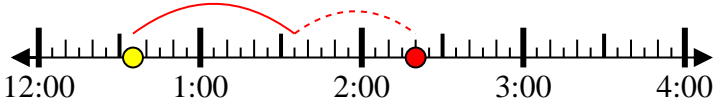
End: 12:25



5) Start: 12:35

Elapsed: 1 hr & 45 mins

End: 2:20



6) Start: 6:35

Elapsed: 2 hrs & 30 mins

End: 9:05



7) Start: 12:35

Elapsed: 1 hr & 30 mins

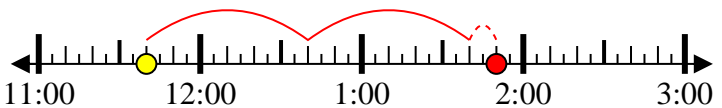
End: 2:05



8) Start: 11:40

Elapsed: 2 hrs & 10 mins

End: 1:50



Answers

1. 1 hr & 25 mins

2. 2 hrs & 35 mins

3. 2 hrs & 45 mins

4. 2 hrs & 40 mins

5. 1 hr & 45 mins

6. 2 hrs & 30 mins

7. 1 hr & 30 mins

8. 2 hrs & 10 mins