



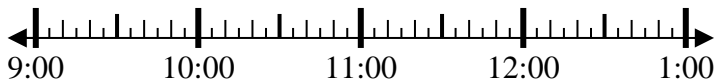
Solve each problem.

Answers

1) Start: _____

Elapsed: 1 hr & 25 mins

End: 10:45



1. _____

2) Start: _____

Elapsed: 2 hrs & 55 mins

End: 4:55



2. _____

3) Start: _____

Elapsed: 2 hrs & 15 mins

End: 9:55



3. _____

4) Start: _____

Elapsed: 1 hr & 10 mins

End: 8:25



4. _____

5) Start: _____

Elapsed: 2 hrs & 25 mins

End: 1:40



5. _____

6) Start: _____

Elapsed: 1 hr & 25 mins

End: 6:55



6. _____

7) Start: _____

Elapsed: 2 hrs & 40 mins

End: 2:40



7. _____

8) Start: _____

Elapsed: 1 hr & 20 mins

End: 1:35



8. _____

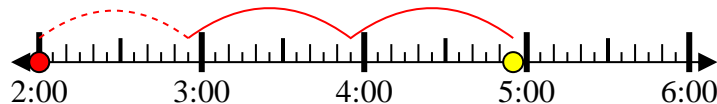


Solve each problem.

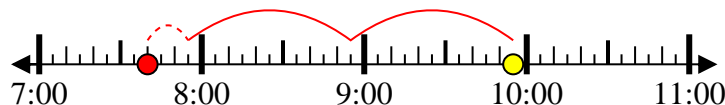
1) Start: 9:20
 Elapsed: 1 hr & 25 mins
 End: 10:45



2) Start: 2:00
 Elapsed: 2 hrs & 55 mins
 End: 4:55



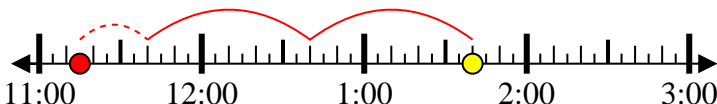
3) Start: 7:40
 Elapsed: 2 hrs & 15 mins
 End: 9:55



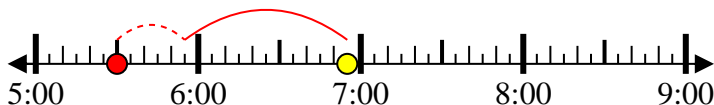
4) Start: 7:15
 Elapsed: 1 hr & 10 mins
 End: 8:25



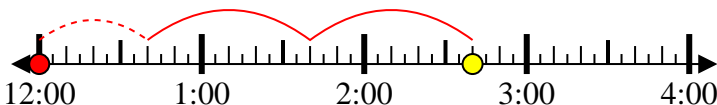
5) Start: 11:15
 Elapsed: 2 hrs & 25 mins
 End: 1:40



6) Start: 5:30
 Elapsed: 1 hr & 25 mins
 End: 6:55



7) Start: 12:00
 Elapsed: 2 hrs & 40 mins
 End: 2:40



8) Start: 12:15
 Elapsed: 1 hr & 20 mins
 End: 1:35



Answers

1. 9:20

2. 2:00

3. 7:40

4. 7:15

5. 11:15

6. 5:30

7. 12:00

8. 12:15