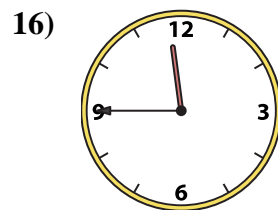
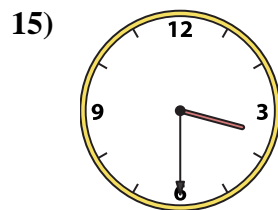
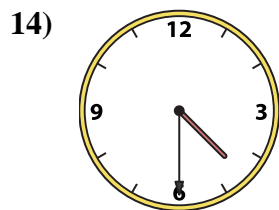
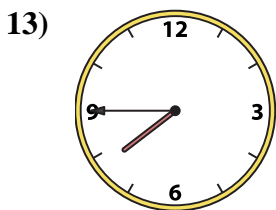
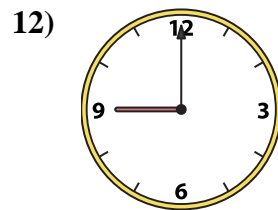
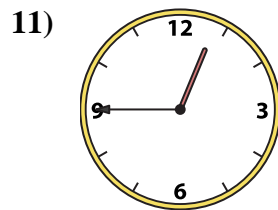
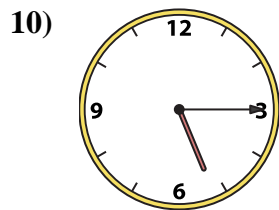
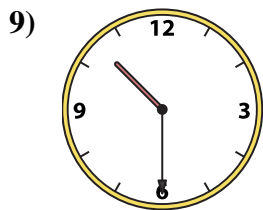
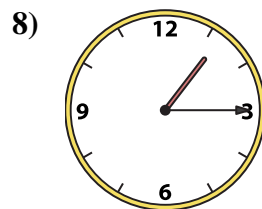
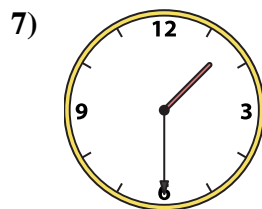
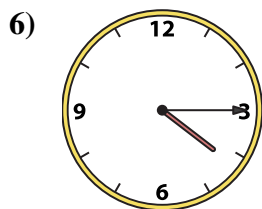
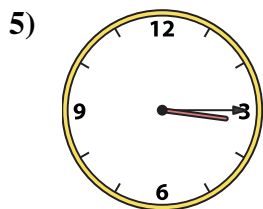
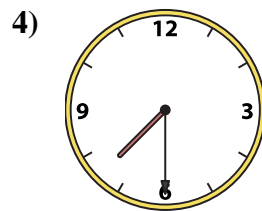
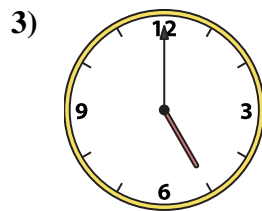
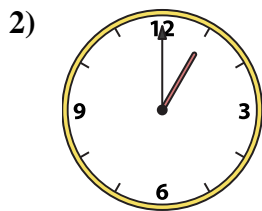
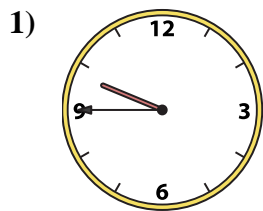




Match the analog clock to the digital clock.



A. 11:45

B. 10:30

C. 1:00

D. 7:45

E. 5:00

F. 4:30

G. 4:15

H. 5:15

I. 3:15

J. 3:30

K. 9:00

L. 7:30

M. 1:30

N. 9:45

O. 1:15

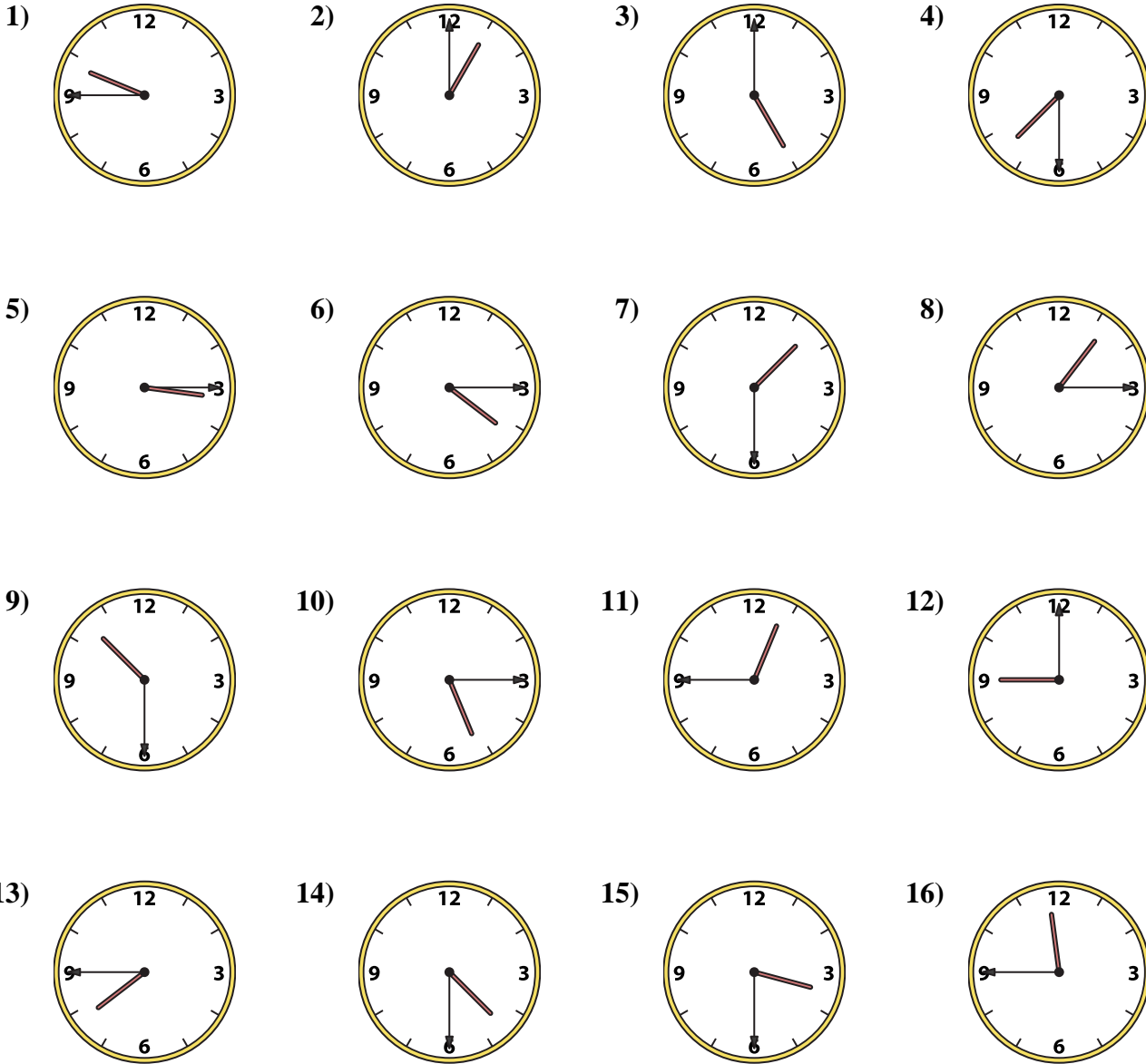
P. 12:45

Answers

1. _____
2. _____
3. _____
4. _____
5. _____
6. _____
7. _____
8. _____
9. _____
10. _____
11. _____
12. _____
13. _____
14. _____
15. _____
16. _____



Match the analog clock to the digital clock.



- | | | | |
|----|----|----|----|
| A. | B. | C. | D. |
| E. | F. | G. | H. |
| I. | J. | K. | L. |
| M. | N. | O. | P. |

Answers

1. **N**
2. **C**
3. **E**
4. **L**
5. **I**
6. **G**
7. **M**
8. **O**
9. **B**
10. **H**
11. **P**
12. **K**
13. **D**
14. **F**
15. **J**
16. **A**