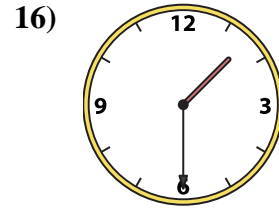
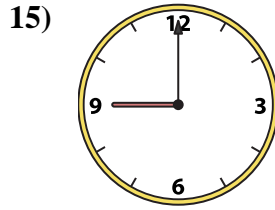
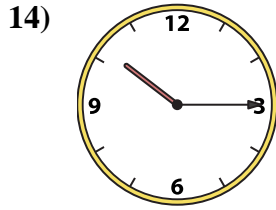
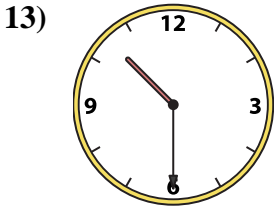
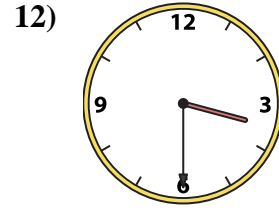
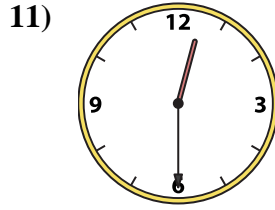
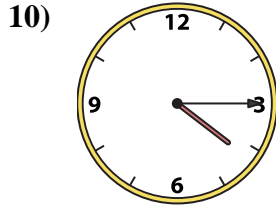
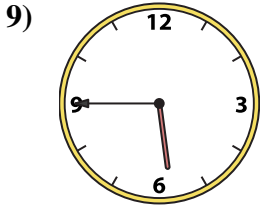
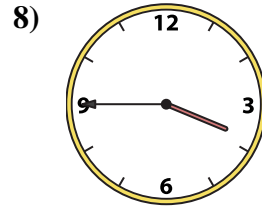
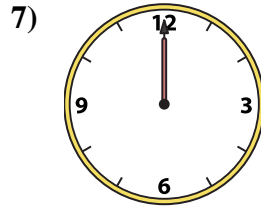
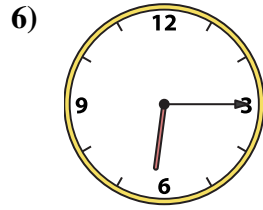

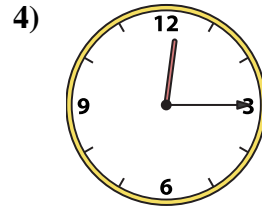
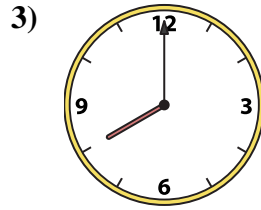
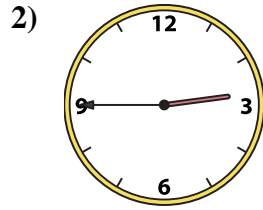
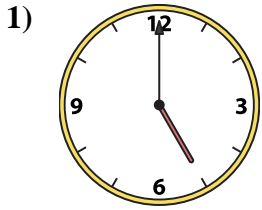




Match the analog clock to the digital clock.

**Answers**



1. \_\_\_\_\_
2. \_\_\_\_\_
3. \_\_\_\_\_
4. \_\_\_\_\_
5. \_\_\_\_\_
6. \_\_\_\_\_
7. \_\_\_\_\_
8. \_\_\_\_\_
9. \_\_\_\_\_
10. \_\_\_\_\_
11. \_\_\_\_\_
12. \_\_\_\_\_
13. \_\_\_\_\_
14. \_\_\_\_\_
15. \_\_\_\_\_
16. \_\_\_\_\_

A. 12:00

B. 4:15

C. 8:00

D. 9:00

E. 1:30

F. 12:30

G. 3:30

H. 2:45

I. 3:45

J. 10:15

K. 5:45

L. 6:15

M. 12:15

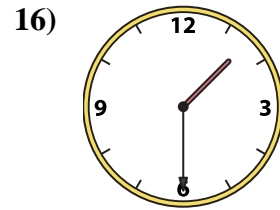
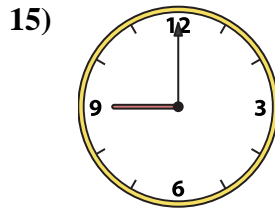
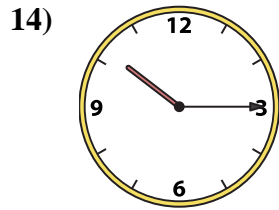
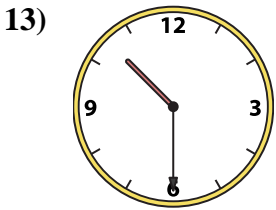
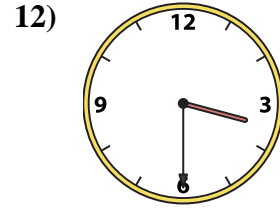
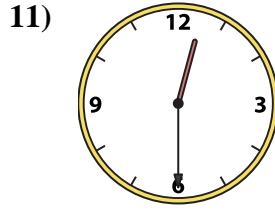
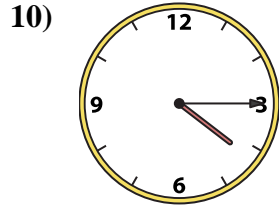
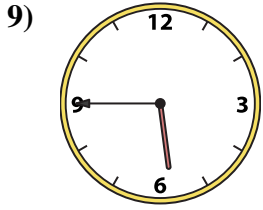
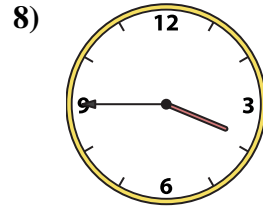
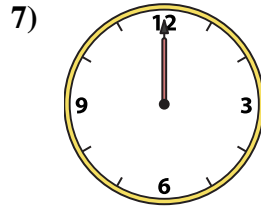
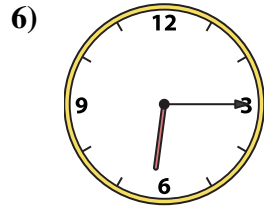

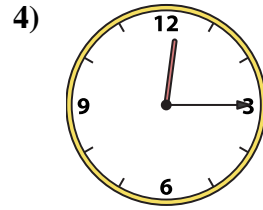
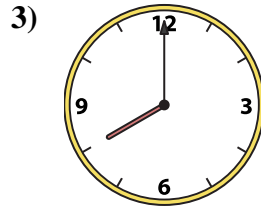
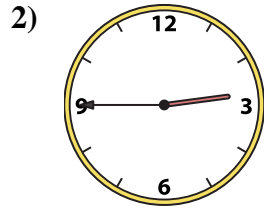
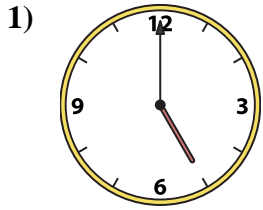
N. 10:00

O. 10:30

P. 5:00



Match the analog clock to the digital clock.



A. 12:00

B. 4:15

C. 8:00

D. 9:00

E. 1:30

F. 12:30

G. 3:30

H. 2:45

I. 3:45

J. 10:15

K. 5:45

L. 6:15

M. 12:15

N. 10:00

O. 10:30

P. 5:00

**Answers**

1. **P**

2. **H**

3. **C**

4. **M**

5. **N**

6. **L**

7. **A**

8. **I**

9. **K**

10. **B**

11. **F**

12. **G**

13. **O**

14. **J**

15. **D**

16. **E**