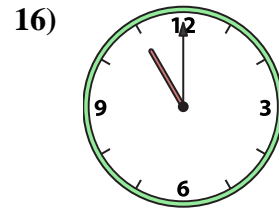
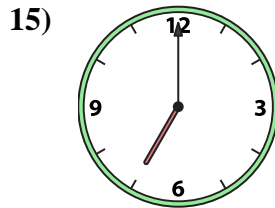
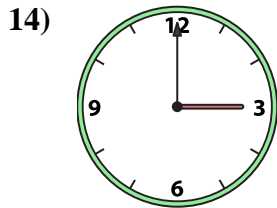
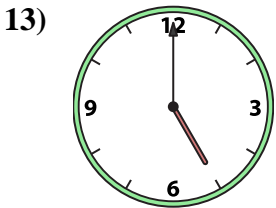
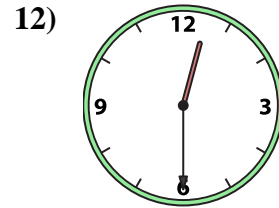
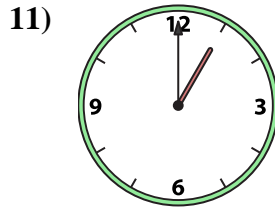
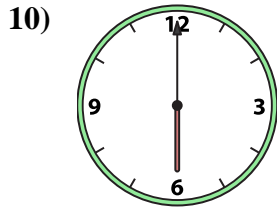
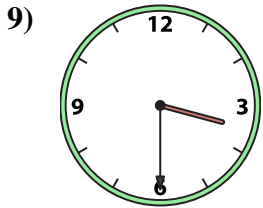
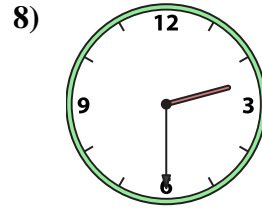
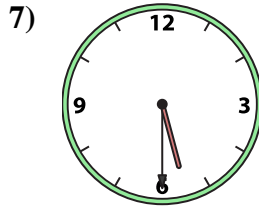
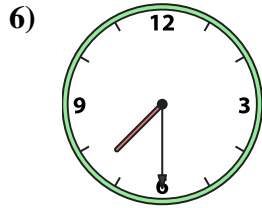
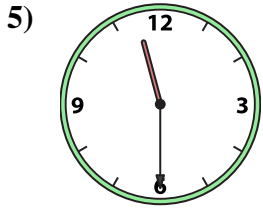
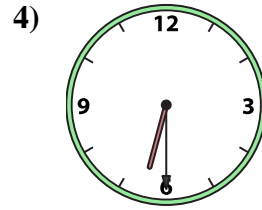
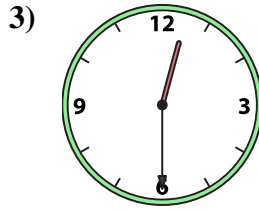
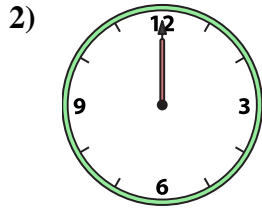
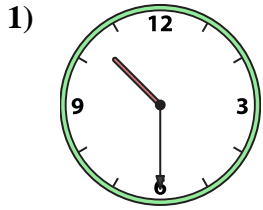




Match the analog clock to the digital clock.



A. 2:30

B. 10:30

C. 7:30

D. 6:00

E. 3:00

F. 5:30

G. 1:00

H. 5:00

I. 7:00

J. 12:30

K. 11:00

L. 6:30

M. 12:30

N. 11:30

O. 3:30

P. 12:00

Answers

1. _____

2. _____

3. _____

4. _____

5. _____

6. _____

7. _____

8. _____

9. _____

10. _____

11. _____

12. _____

13. _____

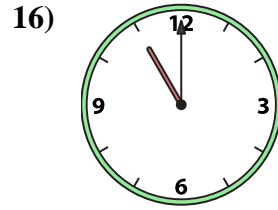
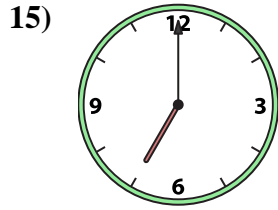
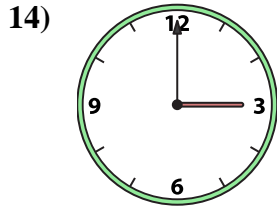
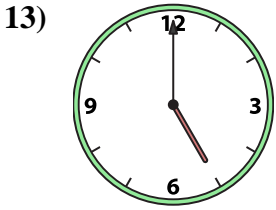
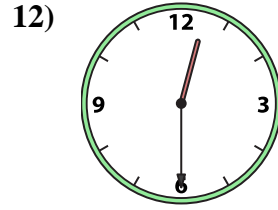
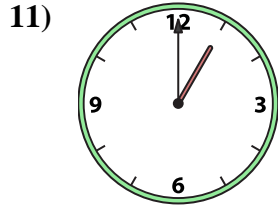
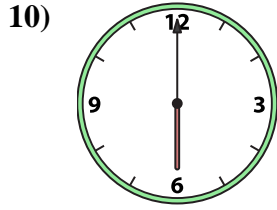
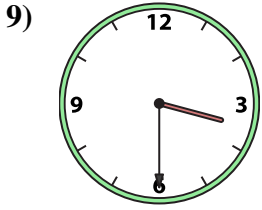
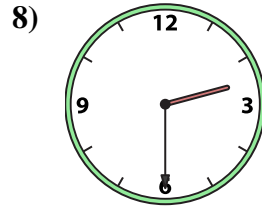
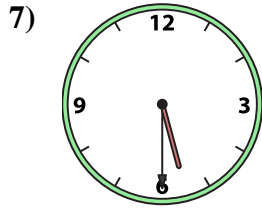
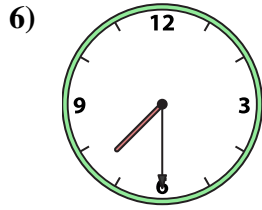
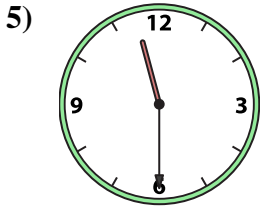
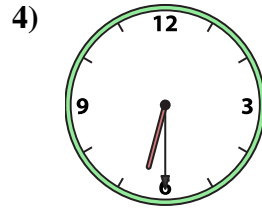
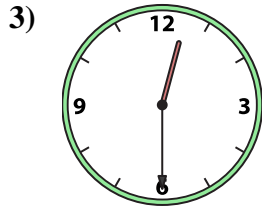
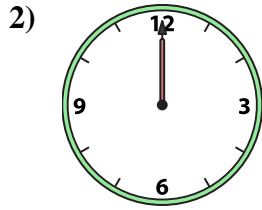
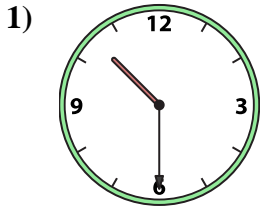
14. _____

15. _____

16. _____



Match the analog clock to the digital clock.



A. **2:30**

B. **10:30**

C. **7:30**

D. **6:00**

E. **3:00**

F. **5:30**

G. **1:00**

H. **5:00**

I. **7:00**

J. **12:30**

K. **11:00**

L. **6:30**

M. **12:30**

N. **11:30**

O. **3:30**

P. **12:00**

Answers

1. **B**

2. **P**

3. **J**

4. **L**

5. **N**

6. **C**

7. **F**

8. **A**

9. **O**

10. **D**

11. **G**

12. **M**

13. **H**

14. **E**

15. **I**

16. **K**