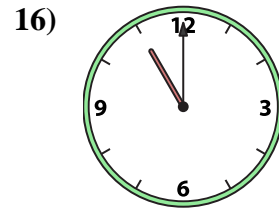
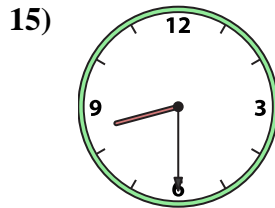
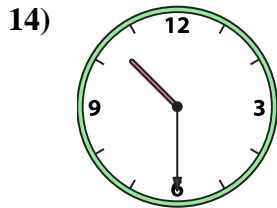
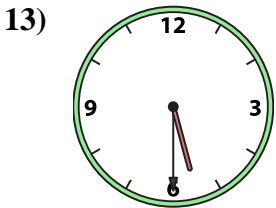
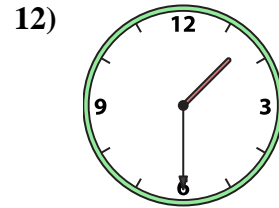
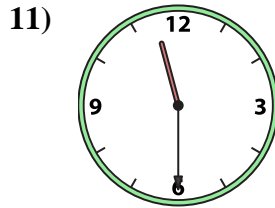
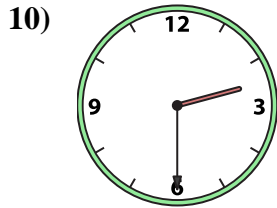
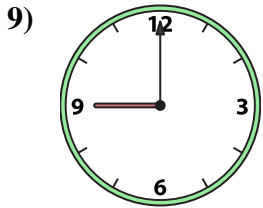
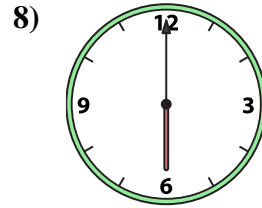
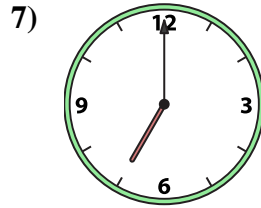
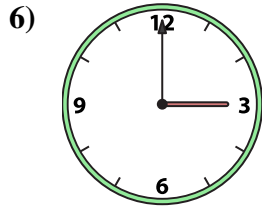

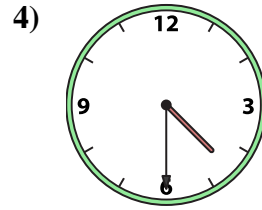
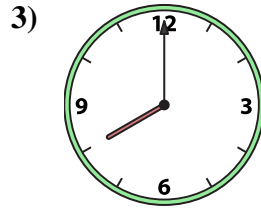

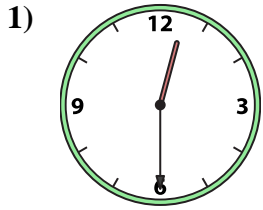




Match the analog clock to the digital clock.



A. 11:00

B. 8:30

C. 5:30

D. 3:00

E. 11:30

F. 10:30

G. 8:00

H. 12:30

I. 7:00

J. 2:30

K. 1:30

L. 5:00

M. 4:30

N. 6:00

O. 1:00

P. 9:00

Answers

1. _____

2. _____

3. _____

4. _____

5. _____

6. _____

7. _____

8. _____

9. _____

10. _____

11. _____

12. _____

13. _____

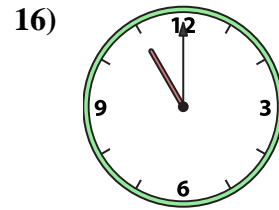
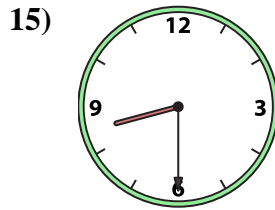
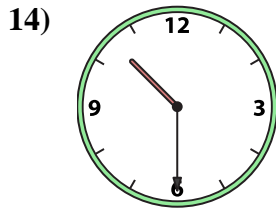
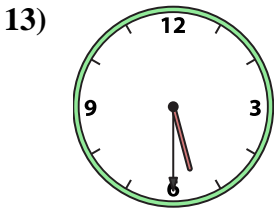
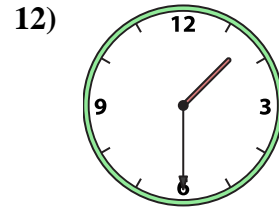
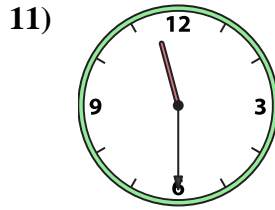
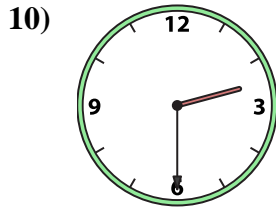
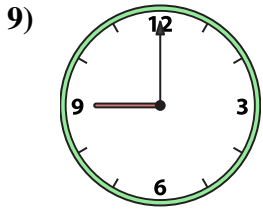
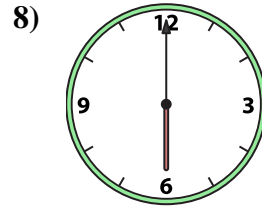
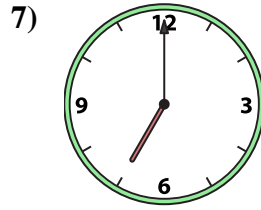
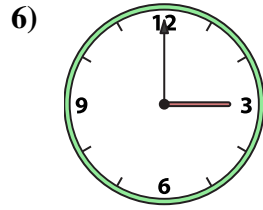
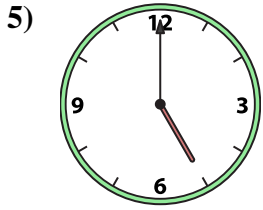
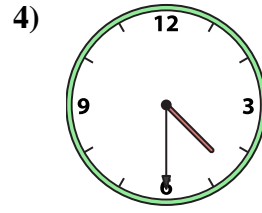
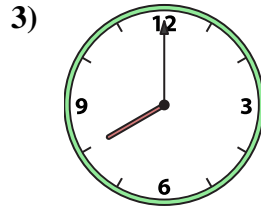
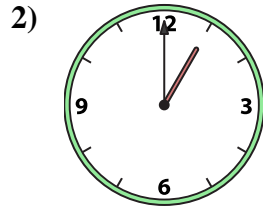
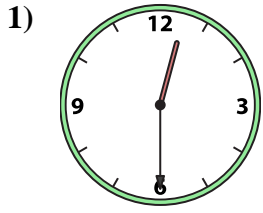
14. _____

15. _____

16. _____



Match the analog clock to the digital clock.



A. 11:00

B. 8:30

C. 5:30

D. 3:00

E. 11:30

F. 10:30

G. 8:00

H. 12:30

I. 7:00

J. 2:30

K. 1:30

L. 5:00

M. 4:30

N. 6:00

O. 1:00

P. 9:00

Answers

1. **H**

2. **O**

3. **G**

4. **M**

5. **L**

6. **D**

7. **I**

8. **N**

9. **P**

10. **J**

11. **E**

12. **K**

13. **C**

14. **F**

15. **B**

16. **A**