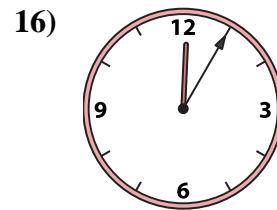
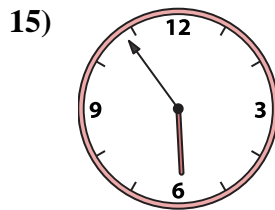
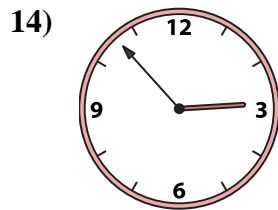
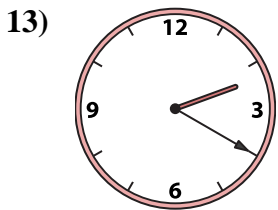
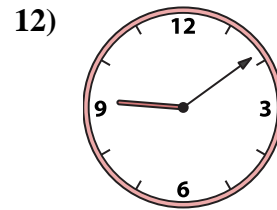
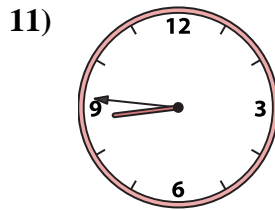
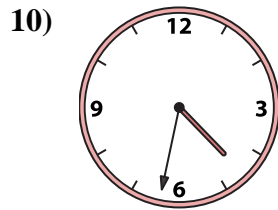
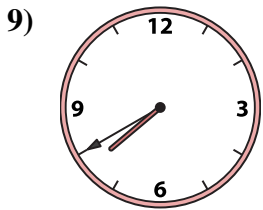
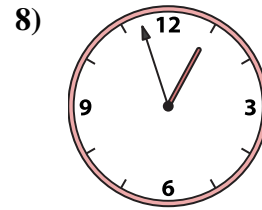
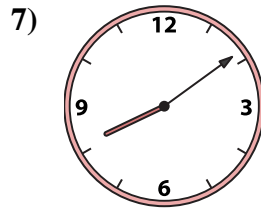
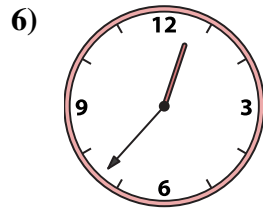
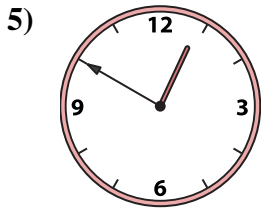
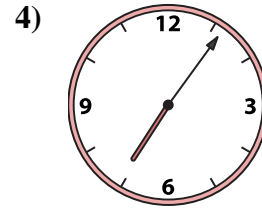

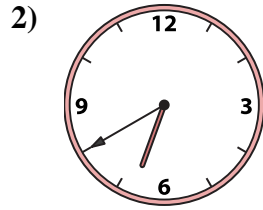
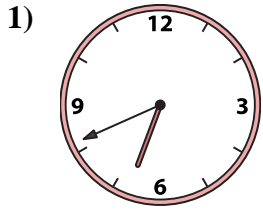




Match the analog clock to the digital clock.



A. 8:46

B. 12:37

C. 6:41

D. 2:20

E. 7:40

F. 6:40

G. 8:09

H. 5:54

I. 4:32

J. 7:06

K. 2:53

L. 12:50

M. 12:05

N. 12:57

O. 9:09

P. 2:57

Answers

1. \_\_\_\_\_

2. \_\_\_\_\_

3. \_\_\_\_\_

4. \_\_\_\_\_

5. \_\_\_\_\_

6. \_\_\_\_\_

7. \_\_\_\_\_

8. \_\_\_\_\_

9. \_\_\_\_\_

10. \_\_\_\_\_

11. \_\_\_\_\_

12. \_\_\_\_\_

13. \_\_\_\_\_

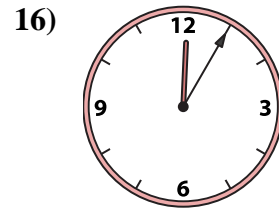
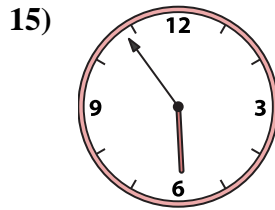
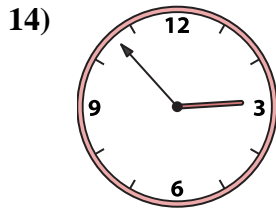
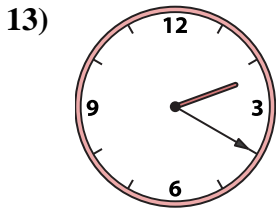
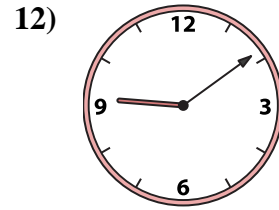
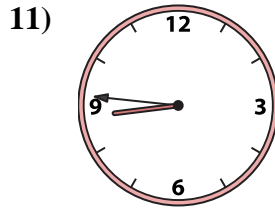
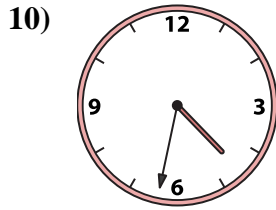
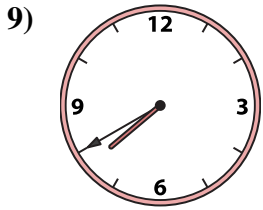
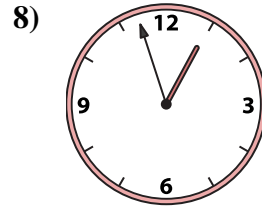
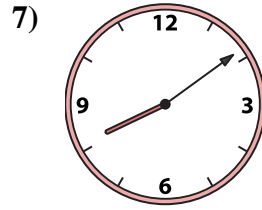
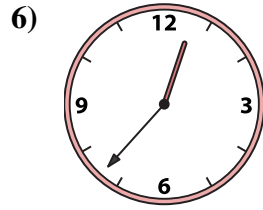
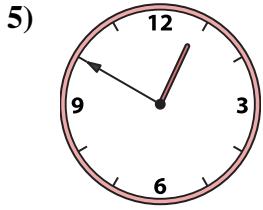
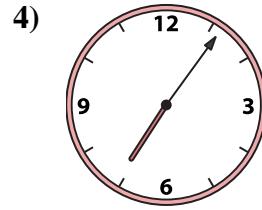

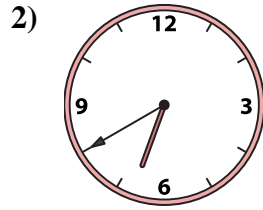
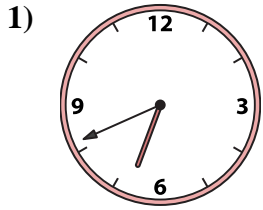
14. \_\_\_\_\_

15. \_\_\_\_\_

16. \_\_\_\_\_



Match the analog clock to the digital clock.



A. 8:46

B. 12:37

C. 6:41

D. 2:20

E. 7:40

F. 6:40

G. 8:09

H. 5:54

I. 4:32

J. 7:06

K. 2:53

L. 12:50

M. 12:05

N. 12:57

O. 9:09

P. 2:57

**Answers**

1. **C**

2. **F**

3. **P**

4. **J**

5. **L**

6. **B**

7. **G**

8. **N**

9. **E**

10. **I**

11. **A**

12. **O**

13. **D**

14. **K**

15. **H**

16. **M**