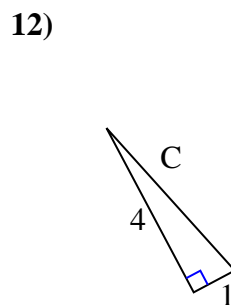
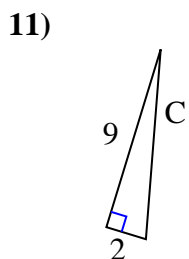
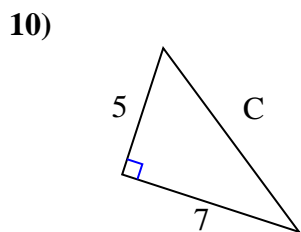
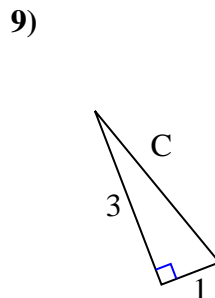
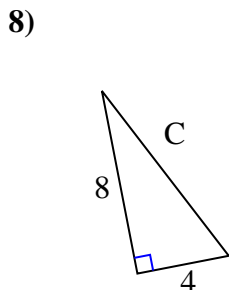
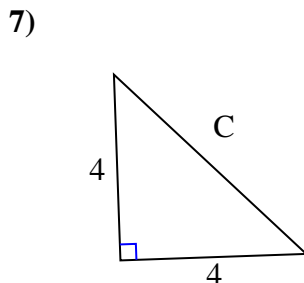
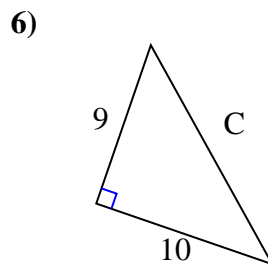
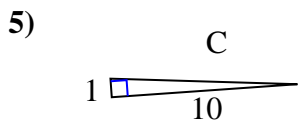
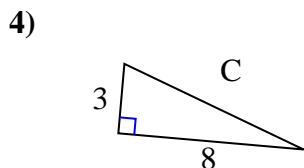
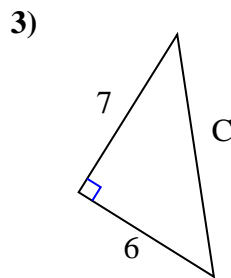
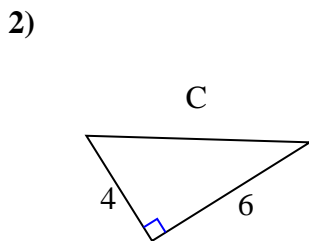
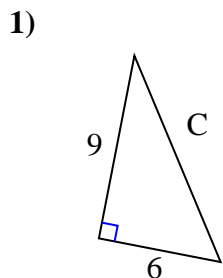




Find the value of 'C' round your answer to the nearest hundredth.

Answers



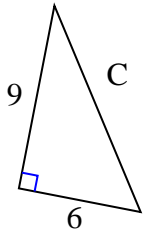
1. \_\_\_\_\_
2. \_\_\_\_\_
3. \_\_\_\_\_
4. \_\_\_\_\_
5. \_\_\_\_\_
6. \_\_\_\_\_
7. \_\_\_\_\_
8. \_\_\_\_\_
9. \_\_\_\_\_
10. \_\_\_\_\_
11. \_\_\_\_\_
12. \_\_\_\_\_



Find the value of 'C' round your answer to the nearest hundredth.

Answers

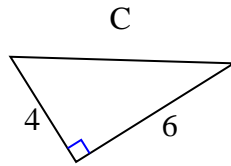
1)



$$81 + 36 = 117$$

$$\sqrt{117} = 10.82$$

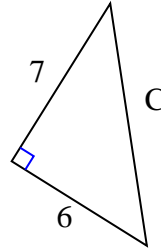
2)



$$16 + 36 = 52$$

$$\sqrt{52} = 7.21$$

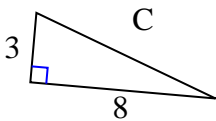
3)



$$49 + 36 = 85$$

$$\sqrt{85} = 9.22$$

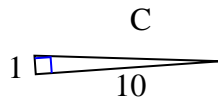
4)



$$9 + 64 = 73$$

$$\sqrt{73} = 8.54$$

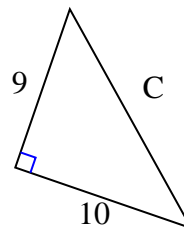
5)



$$1 + 100 = 101$$

$$\sqrt{101} = 10.05$$

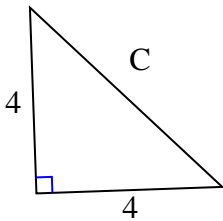
6)



$$81 + 100 = 181$$

$$\sqrt{181} = 13.45$$

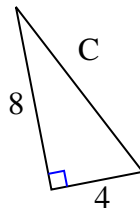
7)



$$16 + 16 = 32$$

$$\sqrt{32} = 5.66$$

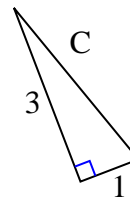
8)



$$64 + 16 = 80$$

$$\sqrt{80} = 8.94$$

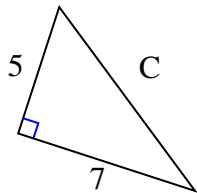
9)



$$9 + 1 = 10$$

$$\sqrt{10} = 3.16$$

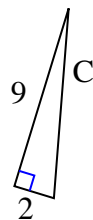
10)



$$25 + 49 = 74$$

$$\sqrt{74} = 8.6$$

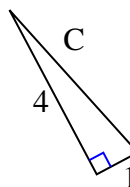
11)



$$81 + 4 = 85$$

$$\sqrt{85} = 9.22$$

12)



$$16 + 1 = 17$$

$$\sqrt{17} = 4.12$$

1. 10.82
2. 7.21
3. 9.22
4. 8.54
5. 10.05
6. 13.45
7. 5.66
8. 8.94
9. 3.16
10. 8.6
11. 9.22
12. 4.12